	KENDRIYA VIDYALAYA, KHAMMAM					
	FORMATIVE ASSESSMENT- I (2016-17)					
	CLASS: V		SUB: MATHS		DATE: _____	TIME: 90
	MNTS					
	NAME _____ SEC: _____ ROLLNO: _____					
	KNOWLEDGE	UNDERSTANDING	ABILITY TO COMPUTE	PROBLEM SOLVING ABILITY	TOTAL	
VALUE POINTS	10	10	10	10	40	
OBTAINED V.P.						
GRADE						

KNOWLEDGE

10M

6x1=6M

1) Fill in the blanks

- a) _____ is the biggest 5- digit number.
- b) $7650 - \quad = 7650$
- c) 5 kilogram = _____ gram
- d) A square has _____ equal sides.
- e) A right angle measures _____ degrees
- f) _____ is basic unit of length

2. Answer the following questions.

A. Write the expanded form of the following number.

1x2=2M

64310 = _____

B. Re write the given number in descending order.

1x2=2M

5064, 5006, 5605, 6500

UNDERSTANDING –

10 M

3. Answer the following questions

A. Give measures of the following types of angles.

2x1=2M

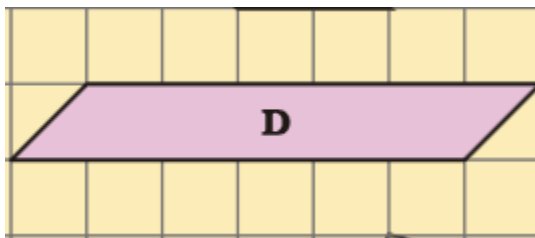
a) Less than right angle = _____

b) More than right angle = _____

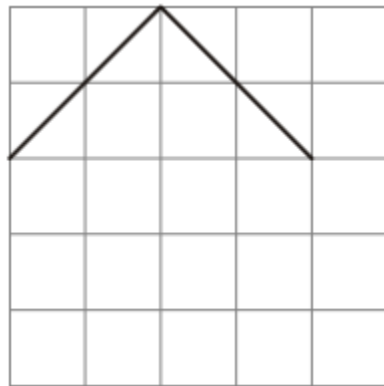
4. Answer the following questions

1x2=2M

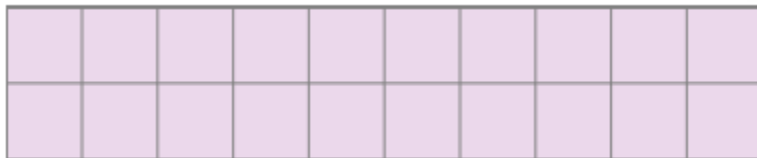
a. Write the area in square cms of the given shape in square grid.



b. Complete the shape with two more sides, so that its area is 10 square cm 1x2=2M



5. Here is a rectangle of area 20 square cm.



a) Draw one straight line in this rectangle to divide it into two equal triangles. What is the area of each of the triangles?

b) Draw one straight line in this rectangle to divide it into two equal rectangles. What is the area of each of the smaller rectangles?

ABILITY TO COMPUTE

10M

6. Fill in the blanks.

1X2=2M


1. Write the area of the rectangle given below is _____ sq. cms




2. The number of minutes 3 hours is _____ minutes.

7. Solve the following.

1. Draw hands on the clock that shows



Less than right angle



more than right angle

2. Find the area of the given figure.

8. Solve the following

Draw an angle of the following measure which is less than 90 at A

1x4=4

A

PROBLEM SOLVING ABILITY

10M

9. fill in the blanks.

2 X 1 =

2M

(i) Measure the length of fish in centimeter.

= _____ cm

(ii) The place value of 6 in 25634 is _____

10. Answer the following :

2X 2= 4M

(i) If a motor boat goes 20 km in one hour then , how much distance it will cover in 6 hours.

(ii) Measure the perimeter of given shapes.

11. Gracy took a loan of Rs 4000 to buy a net. She paid back Rs 345 every month for one year. How much money did she pay back to the bank?