

MATHEMATICS

STANDARD - 3

Time : 2 hours

Name of the Student :

Name of the School :

Division :

Signature of the Parent:

Signature of the Teacher :


Sl. No.	Activities	Grade
1	Shopping Festival	
2	Number Chain	
3	Let's Hoist the Flag	
4	Card Game	
5	In the Library	
6.	Pookalam Competition	
	Overall Grade	

Instructions

- Fifteen minutes cool off time is given. Read the questions carefully during this time.
- Activity 1 is compulsory. Write any four activities from Activity 2 to 6.
- Write the answers for all sub questions of the selected activity.

Activity 1 - Shopping Festival

Ramu and Anu went for a festival. On their way back, they visited a toy shop. They had a 100 rupee note with them. They saw the price list displayed in front of the shop.



Ramu bought a balloon and a car. Anu bought a toy drum.

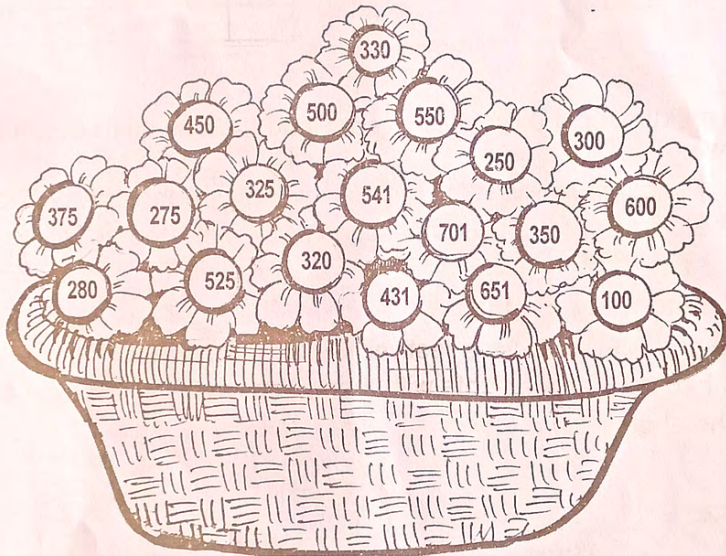
Amount spent by Anu

Amount spent by Ramu

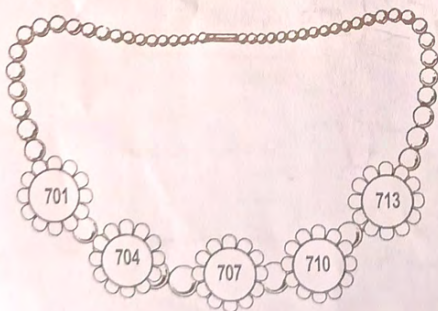
Total amount spent by both of them

What will be the balance amount if
Rs.100/- is given to the shopkeeper?

Activity 2 - Number Chain

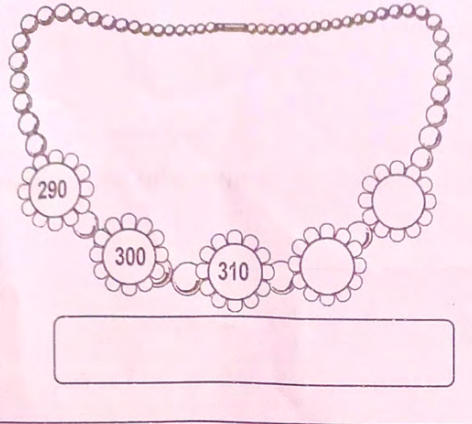

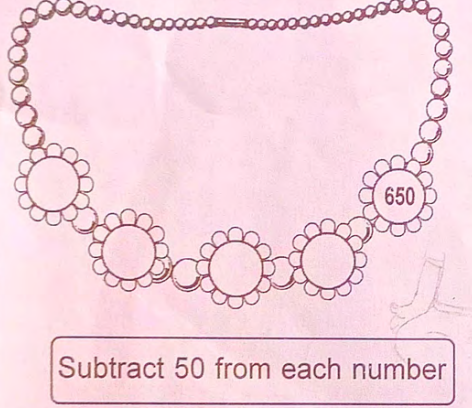
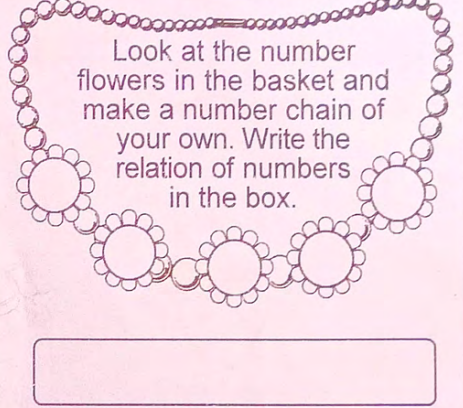


Look at the number flowers in the basket. The chain given below is made using these flowers. The relation of the numbers is also given below.



Add 3 to each number

Some numbers are missing in the chain. Can you find them? Write the relation of the numbers in the box. Flowers once taken should not be used again.

	
	<p style="text-align: center;">Look at the number flowers in the basket and make a number chain of your own. Write the relation of numbers in the box.</p> 

Activity 3 - Let's Hoist the Flag

On the 75th Independence Day, National Flags were hoisted on the houses of all students. National Flags were distributed at Peelikad U.P. school for 20 and 30 rupees. Look at the table given.

Section	Price of National Flag		Total
	20 Rupees	30 Rupees	
LP	175 flags flags	300 flags
UP	264 flags	311 flags flags


- How many flags of rupees 30 were distributed in the L.P. section?

- Total number of flags distributed in the U.P. section.

- Find the total number of children at Peelikad U.P. school who were given the national flags.

- Which flags were distributed more? Flags of 20 rupees or 30 rupees.

Activity 4 - Card Game



Vimala, Anwar and Aravind are friends. They played a game making three digit numbers using number strips of hundreds, tens and ones. (They used all the 3 strips)

Vimala made the largest three digit number. Find the number.

Aravind made the smallest number. Find the number.

			▶
--	--	--	---

Anwar made the maximum numbers starting with five hundred. Which are those numbers?

			▶
--	--	--	---

			▶
--	--	--	---

			▶
--	--	--	---

			▶
--	--	--	---

			▶
--	--	--	---

			▶
--	--	--	---

Now arrange the numbers made by Anwar in ascending order.

			▶
--	--	--	---

			▶
--	--	--	---

			▶
--	--	--	---

			▶
--	--	--	---

			▶
--	--	--	---

			▶
--	--	--	---

Activity 5 - In the Library



The books kept in each row of the shelves in Varayankunnu Library are given continuous numbers. Story books are kept in the first row. They are numbered from 427 to 486. Poetry books are kept in the second row. They are numbered from 218 to 294. The autobiographic books in the third row are numbered from 185 to 209.

- How many story books are there in the shelf?

--

- Number of poetry books in the shelf.

- Which type of book is less in number?

- Find the total number of books in the shelf.

Activity 6 - Pookalam Competition

Poomala L.P. School decided to conduct a Pookalam competition for the Onam celebration. Students planned to collect money for buying flowers.

Total amount collected from Standard 3A is 265 rupees.

Total amount collected from Standard 3B is 280 rupees.

Find the total amount collected from standard 3A and 3B.

How much more money did Standard 3B collect than 3A?

From the collected amount, Malini bought flowers for 300 rupees. There were 3 types of flowers. How much flowers of each type did she buy?

Flowers	Price (For 1 kg)	Quantity in kilogram	Amount
Jamanthi	50		
Chendumalli	40		
Rose	60		