

H. T.T. GOVT GIRLS HIGHSCHOOL, CHALLAKERE, CHITRADURGA-DIST
SUMMATIVE ASSESMENT-1 : SEPTEMBER/OCTOBER -2019

CLASS : 10

QUESTION PAPER

MARKS : 80

SUBJECT: MATHEMATICS

TIMINGS : 3 hours

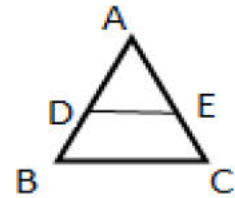
I. In the following questions, four choices are given for each questions, choose and write the correct answer along with its alphabet : 1x8=08

1. In an AP with first term 'a' and common difference 'd', the n^{th} term is given by
a) $a_n = a + (n-1)d$ b) $a_n = \frac{a}{2} + (n-1)d$ c) $a_n = \frac{n}{2} + (a-1)d$ d) $a_n = d + (n-1)a$
2. The 10th term of an A.P. 5,9,13,... is
a) 36 b) 31 c) 41 d) 21
3. The pair of linear equations is consistent with a unique solution when
a) $\frac{a_1}{a_2} \neq \frac{b_1}{b_2}$ b) $\frac{a_1}{a_2} = \frac{b_1}{b_2} = \frac{c_1}{c_2}$ c) $\frac{a_1}{a_2} = \frac{b_1}{b_2} \neq \frac{c_1}{c_2}$ d) $\frac{a_1}{a_2} \neq \frac{b_1}{b_2} \neq \frac{c_1}{c_2}$
4. The coordinates of a point on the x-axis are of the form
a) (x, y) b) (x, 0) c) (0, x) d) (y, 0)
5. The formula for finding the coordinates of the point P(x,y) from the origine is
a) $\sqrt{(x+y)}$ b) $\sqrt{(x+y)^2}$ c) $\sqrt{x^2 + y^2}$ d) $\sqrt{x^2 - y^2}$
6. All squares are
a) equal b) Congruent c) having same area d) similar
7. The maximum numbers of tangents that can be drawn to a circle from an external point is
a) 1 b) 2 c) 3 d) 4
8. The formula used to find the circumference of a circle is
a) $2\pi r$ b) $2\pi r^2$ c) $4\pi r$ d) πr^2

II. Answer the following questions : 1x8=08

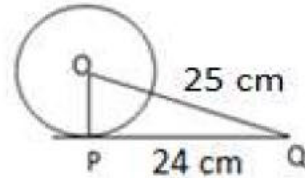
9. If the first term and common difference of an A.P are 6 and 5 respectively, find its 3rd term.
10. If the n^{th} term of an A.P is $4n^2 - 1$, then find the 8th term.
11. Find out whether the lines representing the following pair of linear equations intersect at a point, are parallel or coincident.
 $9x + 3y + 12 = 0$
 $18x + 6y + 24 = 0$
12. Find the coordinates of the midpoint of the line segments joining the points (6,2) and (4,4)

13. In the given triangle ABC , $DE \parallel BC$. If $DE=5\text{cm}$, $BC=8\text{cm}$ and $AD=3.5\text{cm}$, then find the length of AB .



14. State 'Basic proportionality theorem'.

15. From a point Q , the length of the tangent to a circle is 24cm and the distance of Q from the centre is 25cm . Then find the radius of the circle.



16. If the perimeter and area of the circle are numerically equal, then find the radius of the circle.

III. Answer the following questions :

2x8=16

17. Find the sum of first 51 terms of an AP whose second and third terms are 14 and 18 respectively.

18. Determine the AP whose 3rd term is 16 and the 7th term exceeds the 5th term by 12.

19. Solve : $3x+4y = 10$

$$2x-2y = 2$$

20. Find the distance between the points $A(8,-3)$ and $B(0,9)$ by using distance formula.

21. A ladder 10m long reaches a window 8m above the ground. Find the distance of the foot of the ladder from base of the wall.

OR

The perimeters of two similar triangles are 25cm and 15cm. If one side of the first triangle is 9cm, find the corresponding side of the second triangle.

22. Prove that the tangents drawn at the ends of a diameter of a circle are parallel.

23. Draw a circle of radius 3cm. Construct a pair of tangents to it, from a 8cm away from its centre.

24. A horse is tied to a peg at one corner of a square shaped grass field of side 15m by means of a 5m long rope (see fig). Find the area of that part of the field in which the horse can graze.



IV. Answer the following questions :

3x9=27

25. A sum of the Rs.700 is to be used to give seven cash prizes to students of a school for their overall academic performance. If each prize is Rs.20 less than its preceding prize, find the value of each prizes.

OR

In a flower bed, there are 23 rose plants in the first row, 21 in the second row, 19 in the third row, and so on. There are 5 rose plants in the last row. How many rows are there in the flower bed?

26. Five years ago, Nuri was thrice as old as Sonu. Ten years later, Nuri will be twice as old as Sonu. How old are Nuri and Sonu?

OR

The larger of two supplementary angles exceeds the smaller by 18 degrees. Find them.

27. Find the area of the triangle formed by joining the midpoints of the sides of the triangle whose vertices are A(2,2), B(4,4) and C(2,6)

28. Find the coordinates of the points of trisection of the line segment joining (4,-1) and (-2,-3)

OR

Find the perimeter of the triangle whose vertices are (-2,1), (4,6) and (6,-3)

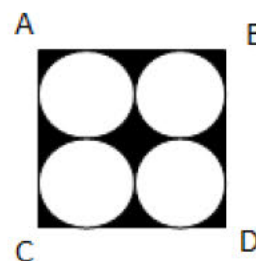
29. Prove that 'The tangents drawn to a circle from an external point are equal.'

30. Two Concentric circles are of radii 5cm and 3cm. find the length of the chord of the larger circle which touches the smaller circle.

31. Construct a triangle of sides 4cm, 5cm and 6cm and then a triangle similar to it whose sides are $\frac{2}{3}$ of the corresponding sides of the first triangle.

32. Draw a triangle ABC with side base BC=8cm and altitude 4cm, and then construct another triangle whose sides are $\frac{5}{3}$ times the corresponding sides of the isosceles triangle ABC.

33. Find the area of the shaded region in the fig, where ABCD is a square of side 14cm.



V. Answer the following questions :

4x4=16

34. The sum of the 4th and 8th terms of an AP is 24 and the sum of the 6th and 10th terms is 44. Find the first three terms of the AP.

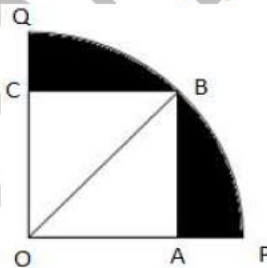
OR

If the sum of first 8 terms of arithmetic progressions is 136 and that of first 15 terms is 465, then find the sum of first 25 terms.

35. Prove that "The ratio of the areas of two similar triangles is equal to the square of the ratio of their corresponding sides."

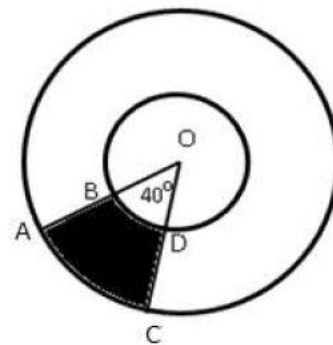
36. Solve the pair of linear equations graphically : $2x + y - 6 = 0$
 $4x - 2y - 4 = 0$

37. In the fig, a square OABC is inscribed in a quadrant OPBQ. If OA=20cm, find the area of the shaded region. (Use $\pi=3.14$)



OR

Find the area of the shaded region in the fig,
If radii of the two concentric circles with centre 'o' are 7cm and 14cm respectively and $\angle AOC = 40^\circ$



VI. Answer the following questions :

5x1=5

38. State and prove Pythagoras theorem.
-