

CODE NO. : A	TOTAL PAGES : 9
--------------	-----------------

KENDRIYA VIDYALAYA AFS BAGDOGRA  
HALF YEARLY EXAMINATION (2018 -19)

SUBJECT :	EVS	CLASS :	IV
TIME :	2 HOURS	Max.Marks.	80

Instruction: ALL QUESTIONS ARE COMPULSORY.


NAME : \_\_\_\_\_ SEC : \_\_\_\_\_ ROLL NO. \_\_\_\_\_ DATE: \_\_\_\_\_




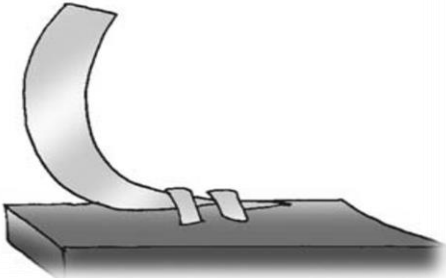
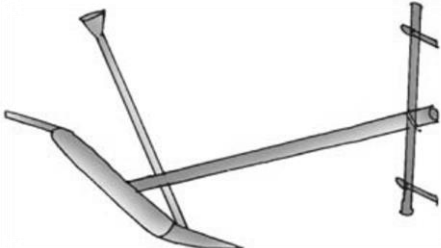
MARKS OBTAINED- \_\_\_\_\_





SIGNATURE OF INVIGILATOR

SIGNATURE OF EXAMINER

OBSERVATION

1	Observe the pictures and write their names	
a.	 <p style="text-align: right;">_____</p>	1M

<p>b.</p>	 <p>_____</p>	<p>1M</p>
<p>c.</p>	 <p>_____</p>	<p>1M</p>
<p>d.</p>	 <p>_____</p>	<p>1M</p>
<p>e.</p>	 <p>_____</p>	<p>1M</p>
<p>f.</p>	 <p>_____</p>	<p>1M</p>

<p>g.</p>		<p>1M</p>
<p>h.</p>		<p>1M</p>
<p>i.</p>		<p>1M</p>
<p>j.</p>		<p>1M</p>

2.	<p>Name the two animals each of the following types-</p> <p>1. Which give birth to babies - _____</p> <p>2. Which lays eggs - _____</p>	2M
3.	<p>How many elephants are there in a herd? And how many KGs of twigs and leaves do an elephant eat in a day ?</p> <p>_____</p> <p>_____</p> <p>_____</p>	2M
4.	<p>Where is Khejadli village? How did it get its name ?</p> <p>_____</p> <p>_____</p> <p>_____</p>	2M
5.	<p>Write the functions of the following in a beehive-</p> <p>1. Queen bee - _____</p> <p>2. Worker bee - _____</p>	2M
6.	<p>Write the names of two vehicles each which run on-</p> <p>1. Petrol - _____</p> <p>2. Diesel - _____</p>	2M

7.

Look at this picture of a railway ticket. Find the following information on the ticket

5M



- The train number-\_\_\_\_\_
- The date of the start of the journey-\_\_\_\_\_
- The berth number-\_\_\_\_\_
- The fare (the cost of the ticket)-\_\_\_\_\_
- The distance covered ( KM )-\_\_\_\_\_

8.

Write five uses of flowers .Also give examples of each use.

5M

- \_\_\_\_\_
- \_\_\_\_\_
- \_\_\_\_\_
- \_\_\_\_\_
- \_\_\_\_\_

**IDENTIFICATION**

	<b>IDENTIFICATION</b>	
1.	Fill in the blanks by choosing the correct word :	
a	We can recognise the ticket checker by his _____. (uniform / bag )	1M
b	Nimmi's family has _____ members after the birth of her sister. (six / ten )	1M
c	Girls should not get married before the age of _____ years. ( 18 / 20 )	1M
d	Karnam Malleshwari is a _____. ( doctor / weight lifter )	1M
e.	An _____ fits the electric wires and plugs. ( Mason / electrician )	1M
f.	A _____ repairs the taps and pipes. ( plumber / worker )	1M
g.	Simi went to _____ after her marriage. ( Palwal / Pakistan )	1M
h.	Best way to clean dirty water is to _____ it. ( boil / strain )	1M
i.	_____ is used to cut the dried leaves from the top of the onion. ( Illige / Kunti)	1M
j.	_____ does not dissolve in water. ( sugar / oil )	1M
2.	How do birds hear? Write the names two animals whose ears cannot be seen from outside like birds.  _____  _____	2M
3.	How do the elephants keep them cool?  _____  _____	2M

4.	<p>What did Jambaji teach the villagers?</p> <hr/> <hr/>	2M
5.	<p>Write the work done by the following people on the railway station –</p> <p>a. Ticket checker - _____</p> <p>b. Coolie - _____</p>	2M
6.	<p>Name the three types of bees in the beehive. Also name one other animal which lives in a group like honeybees.</p> <hr/> <hr/> <hr/>	2M
7.	<p>Write five lines about Kabbadi.</p> <p>a. _____</p> <p>b. _____</p> <p>c. _____</p> <p>d. _____</p> <p>e. _____</p>	5M

<b>DISCOVERY OF FACTS</b>		
1	Answer the following in one word :	
a	An animal with ears like leaves - _____	1M
b	Number of elephants in a herd – _____	1M
c	Who ordered to cut trees in Khejadlivillage? _____	1M
d	The reason for change in Nazli’s family was - _____	1M
e	Where does the river start from? _____	1M
2.	What was the reason of change in Nimmi’s family? Who were the members after the change in the Nimmi’s family? _____ _____ _____ _____	3M



<p>3.</p>	<p>Write two differences between bamboo bridge and the cement bridge. Also draw their pictures.</p> <table border="1" data-bbox="261 244 1362 1025"> <thead> <tr> <th data-bbox="261 244 810 304"><u>Bamboo Bridge</u></th> <th data-bbox="810 244 1362 304"><u>Cement bridge</u></th> </tr> </thead> <tbody> <tr> <td data-bbox="261 304 810 418">1.</td> <td data-bbox="810 304 1362 418"></td> </tr> <tr> <td data-bbox="261 418 810 533">2.</td> <td data-bbox="810 418 1362 533"></td> </tr> <tr> <td data-bbox="261 533 810 1025"></td> <td data-bbox="810 533 1362 1025"></td> </tr> </tbody> </table>	<u>Bamboo Bridge</u>	<u>Cement bridge</u>	1.		2.				<p>3M</p>
<u>Bamboo Bridge</u>	<u>Cement bridge</u>									
1.										
2.										
<p>4.</p>	<p>How does water becomes dirty? Why is it important to clean the water before we drink it?</p> <hr/> <hr/> <hr/>	<p>3M</p>								
<p>5.</p>	<p>What is weed? Why should the weeds be removed?</p> <hr/> <hr/> <hr/>	<p>3M</p>								

6.

Locate these in the political map of India -

1. Bihar
2. Uttarakhand
3. Haryana
4. Kerala
5. Delhi .

5M

