	<b>KENDRIYA VIDYALA SANGATHAN CHENNAI( MADURAI CLUSTER)</b>		
	<b>HALF YEARLY EXAMINATION (2017-18)</b>		
	<b>SUBJECT: EVS</b>		
	<b>CLASS: V</b>	<b>SEC:</b>	<b>TIME: 2 1/2 HOURS</b>
<b>NAME OF THE STUDENT:</b>			<b>ROLL NO:</b>
<b>Invigilator's Sign:</b>		<b>Evaluator's sign:</b>	
<b>Maximum marks: 80</b>		<b>Marks obtained:</b>	

### GENERAL INSTRUCTIONS:

- a) All questions are compulsory.
- b) The question paper consists 46 questions divided into three Parts A, B and C.
- c) Part A contains 20 questions of 1 mark each.
- d) Part B contains 15 questions of 2 marks each.
- e) Part C contains 6 questions of 5 marks each.

### PART – A

a. Observe the pictures, identify them and write a sentence about each.

1.




---



---

2.



---

---

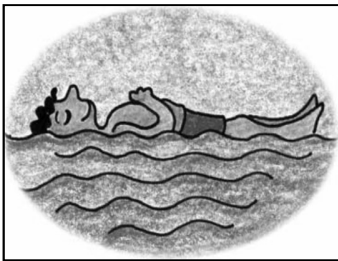
3.



---

---

4.



---

---

5.



---

---

**b. Fill in the blanks:**

6. Ghadsisar was made by king \_\_\_\_\_.

7. \_\_\_\_\_ is the solid form of water.

8. \_\_\_\_\_ discovered that mosquitoes spread malaria.

**C. Choose the correct answer:**

9. Hibernation is the animal goes for long sleep on \_\_\_\_\_ season.

( winter / summer )

10. \_\_\_\_\_ is the highest peak in the world.

( Mount Everest / Kangchenjunga )

**d. Identify and mark the following in the map of India:**

11. Golconda fort is located in the state \_\_\_\_\_

12. Mizo is spoken the state of \_\_\_\_\_

13. Mamdi Tandra is a very famous in \_\_\_\_\_

14. Ghadsisar lake is located in the state of \_\_\_\_\_

15. Dandi seashore in \_\_\_\_\_



**e. Answer in one sentence.**

16. What is the normal range of hemoglobin for child?

\_\_\_\_\_

17. Who was the first person land on the moon?

\_\_\_\_\_

18. Does the oil dissolve in water?

\_\_\_\_\_

19. ORS stands for:

\_\_\_\_\_

20. "I can find my female from many kilometers away by her smell"- Who am I?

\_\_\_\_\_

**PART – B**

**IV. Answer the following shortly:**

21. Observe the picture and answer:

a. Who is she?

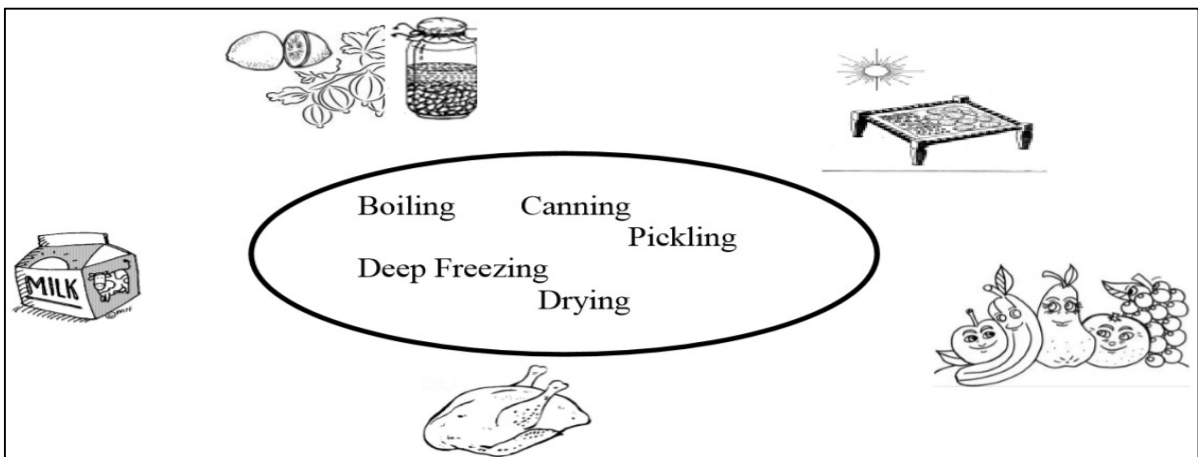
\_\_\_\_\_



b. What did she want to become?

\_\_\_\_\_

22. Observe the picture and match their method of preservation:



23. What do you observe in the glass jar? Explain.

---

---

---

---



24. What kinds of tools are needed for climbing mountains?

---

---

25. What are the things needed to make Mamidi tandra?

---

---

26. What is Anaemia?

---

---

27. Why snakes are called farmer's friend?

---

---

28. Write any two things (food items)

i) Made from Rice \_\_\_\_\_, \_\_\_\_\_

ii) Made from milk \_\_\_\_\_, \_\_\_\_\_

29. Name any one thing which :

Float on water: \_\_\_\_\_

Sink in water : \_\_\_\_\_

Dissolve in water: \_\_\_\_\_

Does not dissolve in water: \_\_\_\_\_


30. How to prevent mosquito breeding?

---

---

---

31. Draw and colour picture plant.



32. Why are bastions made in the fort wall? Why were big holes made in them?

---

---

---

---

33. Define astronomy.

---


---

34. Why do ants always move in a line?

---

---

35. Draw a picture of tongue and mark the place of different taste.



**(Answer all questions. Each question carries five marks)**

36. Observe the report and answer the following:


**क्लिनिकल विकृति रिपोर्ट**  
**CLINICAL PATHOLOGY REPORT**  
**केंद्रीय सरकार स्वास्थ्य योजना**  
**Central Govt. Health Scheme**

16/07/2014

नाम/Name. Manas... आयु/Age... 12... स्त्री या पुरुष/Sex... **Male**...

रोग की पहचान/Diagnosis... **Fever with Chills and Rigors**  
( ठंड लगकर कंपकंपी के साथ बुखार )

**Malarial Parasite Found in Blood Sample**  
( खून में मलेरिया के जीवाणु पाए गए )

  
**Pathologist**

a) What is the name of the patient?

---

b) How old is the patient?

---

c) What is found in blood sample?

---

d) What is the date of pathological report?

---

e) What is he suffering from?

---

37. a. Differentiate between Map and Globe.

Map	Globe

b. Draw and label the following:

<p><u>Stages of seed germination</u></p>
--



38. Write about Golconda fort.

---

---

---

---

---

---

---

---

---

---

39. Write about the various means of dispersal of seeds.

---

---

---

---

---

---

---

---

---

---

40. Give reasons:

i) Puri floats in oil on frying.

---

---

---

---

---

ii) Mountaineers take Vitamin C , Iron tablets and hot chocolate milk.

---

---

---

---

41. a. Write short note on Kalbeliyas.

---

---

---

---

b. Who was Al-Briruni? What did he write about India?

---

---

---

---