

KENDRIYA VIDYALAYA AFS, BAGDOGRA

MODEL PAPER

2019-2020

SUBJECT	ENGLISH		CLASS	IV
TIME	90 MINUTES		MAX. MARKS	50
INSTRUCTIONS:				
1. All questions are compulsory.				
2. Write the answer in the space provided in the booklet itself.				
NAME: _____ SEC.: _____ ROLL NO.: _____				
INVIGILATORS SIGN. _____ EXAMINER'S SIGN. _____				
MARKS OBTAINED _____				
	<u>READING</u>			
Q1.	Read the passage carefully and answer the questions given below it: Bears are found in Europe, Asia, Africa and America. They are massively built, with short tails and thick legs. Bears are not really carnivore. They eat almost anything, the chief exception in the polar bear, which in its natural state lives on fish and seals. However in captivity, they seem to enjoy meat, vegetables, fruits, milk, rice and porridge. Bears have a strong sense of smell but they have very poor eyesight. Bears are not quite as dangerous as people imagine them to be. Like most animals they will do their best to avoid human being.			
a.	Where are bears found? _____ _____			1M
b.	What does a bear eat in captivity? _____ _____			1M
c.	What is the strongest sense of a bear? _____ _____			1M

d.	What kind of tails and legs do bear have? <hr/> <hr/>	1M
e.	What does the bear avoid like most animal? <hr/> <hr/>	1M
Q2	<u>WRITING</u> Answer the following questions:	
a.	What did the library door say? <hr/> <hr/>	1M
b.	When should we not water the plants? <hr/> <hr/>	1M
c.	How did the tree help the boy earn money? <hr/> <hr/> <hr/>	2M
d.	Who finally made the cow get up and move? <hr/> <hr/> <hr/>	2M
e.	What did Hiawatha learn about the birds? <hr/> <hr/> <hr/>	2M

f.	How did the learned pundit challenge everybody? <hr/> <hr/> <hr/>	2M
Q3	<u>GRAMMAR</u>	
a.	Write the singular form of the word: leaves _____	1M
b.	We should be _____ to animals. (kind/cruel).	1M
c.	Make a meaningful sentence using the word ‘mother tongue’: <hr/> <hr/>	1M
d.	Write one word ending with ‘ing’: _____	1M
e.	Write the past tense of the words: know _____ come _____	1M
f.	Write the rhyming words of: Book _____	1M
g.	Add ‘ly’ to the following words: angry _____ gentle _____	1M
h.	Punctuate the following sentence: on monday i will go to school <hr/> <hr/>	1M
i.	My mother bought a kilogram of _____ (apple / apples).	1M
j.	Fill in the blanks with suitable articles (a or an): _____ bow _____ alarm clock	1M

KENDRIYA VIDYALAYA AFS BAGDOGRA

**PERIODIC TEST-2 (2019-20)
MODEL TEST PAPER**




SUBJECT	EVS	CLASS	IV
TIME	90 MINUTES	MARKS:	50







INSTRUCTION: ALL QUESTIONS ARE COMPULSORY


NAME: _____ SEC: _____ ROLL NO: _____

INVIGILATOR'S SIGN: _____ MARKS OBTAINED: _____

EXAMINER'S SIGN: _____

Q.No	<u>OBSERVATION AND REPORTING</u>	MARKS
Q1.	Observe the pictures and write their names.	
i	 <p>_____</p>	1 M
ii	 <p>_____</p>	1 M
iii	 <p>_____</p>	1 M

iv		1 M
v.		1 M
vi		1 M
vii	 <p>shutterstock.com - 342607673</p>	1 M
viii		1 M
ix		1 M

x		1 M
---	--	-----

2.	Write names of two vegetables which do not have seeds and draw their pictures.	2M
----	--	----

Ans :	1. _____ 2. _____	
3.	Write the name of four sources of water around you.	2M
Ans :	_____, _____, _____, _____.	

IDENTIFICATION AND CLASSIFICATION

4.i.	Write the name of any two animals which live on the tree.	1M
Ans :	1. _____ 2. _____	

ii.	Where is the festival of 'Bihu' celebrated?	1M
Ans :	_____	

iii.	Where do the people sit and eat in the gurudwara?	1M
Ans :	_____	

iv.	Write the names of any two vegetables that can stay fresh for some days.	1 M
Ans :	_____, _____.	

5.	Why is Basva not able to attend school for some days?	2M
Ans :	_____ _____	

6.	Why does Babuji sells the previous day's vegetables first?	2M
Ans :	_____ _____	

7. Ans :	How is water made safe for drinking? _____ _____	2M
8. Ans :	Write the names of any two vegetables which are roots and draw their pictures? 1. _____ 2. _____	2M
9. Ans :	What should we do if we have diarrhoea? _____ _____	2M
10. Ans :	Draw the pictures of the five different types of bird beaks and write their use. 1. _____ _____ 2. _____ _____ 3. _____ _____ 4 _____ _____ 5. _____ _____	5M

DISCOVERY OF FACTS

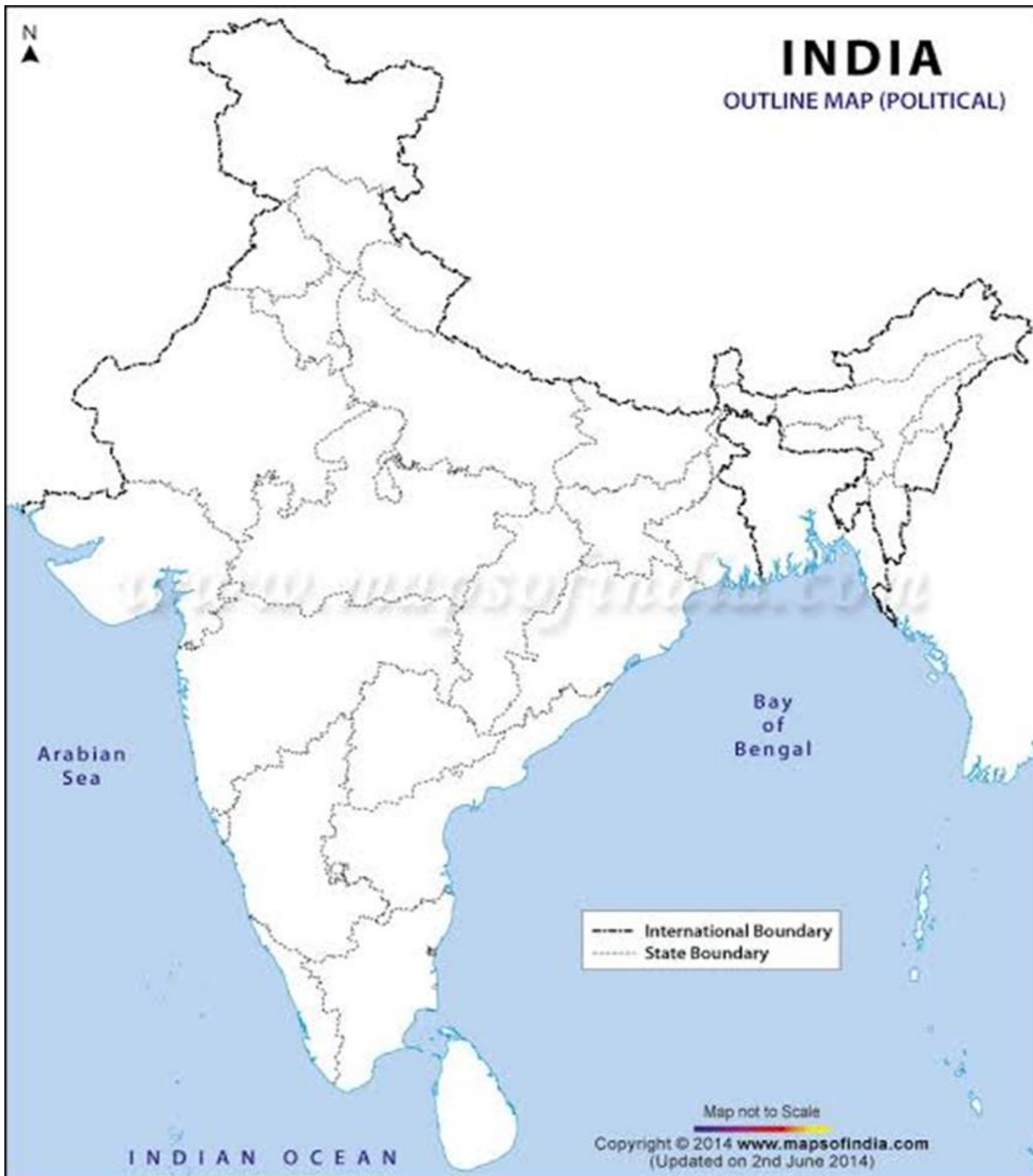
11	Encircle the right option.	
i.	In your school, from where do you take water to drink? a) Tap b) handpump c) well	1 M
ii.	The bird that makes a nest that hangs from the branch of a small tree or bush. A) Tailor bird b) Indian robin c) sun bird	1 M
iii.	We call the unwanted plants that grow in the field along with the crops. a) Seed b)weeds c)trees	1 M
iv.	Babuji bring the fresh vegetables from a) Mandi b) shop c) fields	1 M
v.	This vegetable spoils quickly. a) Onion b) potato c) spinach	1 M
vi.	This animal's front teeth keep growing throughout their life. a) Mouse b) Squirrel d) Snake	1 M
12. Ans :	Why was Raziya worried when she read the newspaper? _____ _____	2M
13.	Why couldn't Abdul pull out the small grass from its bed? _____ _____ _____	2M
14.	Why did Nandita feel like vomiting when at first she had to use the toilet where Mama lived? _____ _____	2M

15.

Locate the given states on the map.

5M

- i) Karnataka
- ii) Andhra Pradesh
- iii) Punjab
- iv) Maharashtra
- v) Assam



केन्द्रीय विद्यालय वायुसेना, बागडोगरा

नमूना पत्र

सत्र- (2019-20)

विषय:	हिन्दी	कक्षा:	चतुर्थ
अवधि:	90 मिनट	पूर्णांक:	50

नाम: _____ अनुक्रमांक _____ अनुभाग _____

निरीक्षक हस्ताक्षर: _____ परीक्षक हस्ताक्षर : _____ प्राप्तांक _____

निर्देश: सभी प्रश्न अनिवार्य है।

पठन

अपठित गद्यांश

नीचे दिए गए अनुच्छेद को पढ़कर प्रश्नों के उत्तर लिखो।

एक जंगल था। जंगल में शेर रहता था उस जंगल में एक शेर भोजन करके आराम कर रहा था। इतने में एक मक्खी उड़ती – उड़ती वहाँ आ पहुँची। शेर ने दो- तीन दिनों से स्नान नहीं किया था। इसलिए मक्खी शेर के कान के एकदम पास भिन्न-भिन्न-भिन्न करने लगी। शेर को मुश्किल से नींद आई थी। उसने पंजा उठाया मक्खी उड़ गयी। पर वह दुबारा उसी शेर के पास आ जाती। कई बार यही हुआ पर वह मक्खी नहीं मानी।

प्रश्न-1	जंगल में कौन आराम कर रहा था ? उत्तर- _____	1
----------	---	---

प्रश्न-2	शेर को कौन परेशान कर रहा था ? उत्तर - _____	1
प्रश्न-3	शेर ने कितने दिनों से स्नान नहीं किया था ? उत्तर - _____	1
प्रश्न-4	मक्खी शेर के कान के एकदम पास क्या करने लगी ? उत्तर - _____	1
प्रश्न-5	विलोम शब्द लिखो । मुश्किल - _____	1
लेखन		
प्रश्न-1	पढ़कू क्या पढ़ते थे ? उत्तर: _____	1
प्रश्न 2.	पढ़कू ने मालिक से क्या पूछा ? उत्तर- _____ _____	1
प्रश्न-3	बच्चों ने खाने-पीने की चीजें छींके में क्यों रखी ? उत्तर: _____ _____	2
प्रश्न-4	धनी ने गांधीजी से बात करने के लिए सुबह का समय ही क्यों ठीक समझा होगा ? उत्तर: _____ _____	2
प्रश्न 5.	नीना चुन्नू और टिकू से दाल क्यों बनवाना चाहते थे? उत्तर- _____ _____	2

प्रश्न 6.	चूहे ने घर में क्या-क्या नुकसान किया लिखो ? उत्तर- _____ _____	2
	<u>व्याकरण</u>	
प्रश्न-1	तसवीर का पर्यायवाची शब्द लिखो ? _____	1
प्रश्न-2	तुकात्मक शब्द लिखो- छत्रे - _____	1
प्रश्न-3	संज्ञा शब्द को रेखांकित करें- ओहो ! मक्खन कितना सारा । झट से चट करू किनारा ।	1
प्रश्न-4	किसी एक चीज का नाम लिखो जिसे हम बिलोते हैं- _____	1
प्रश्न-5	अर्थ लिखें- मंतिख - _____	1
प्रश्न-6	मुहावरे का वाक्य में प्रयोग करें- दिन रात एक करना _____	1
प्रश्न-7	ये क्या गढ़ते हैं- कवि - _____	1

**KENDRIYA VIDYALAYA AFS BAGDOGRA
MODEL PAPER PT-2(2019-20)**

SUBJECT	MATHS		CLASS	4
TIME	90 min.		TOTAL	50

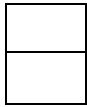
NAME _____ **ROLL NO** _____ **SECTION** _____


SIGNATURE OF INVIGILATOR _____ **MARKS** _____


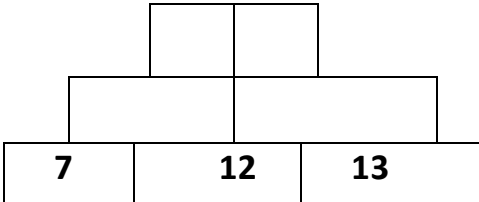
SIGNATURE OF EXAMINER : _____

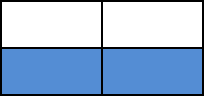
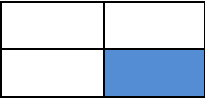


ALL QUESTIONS ARE MANDATORY

Knowledge

Q1	Fill in the blanks.	
A.	Complete this half picture. 	1
B.	60 is the $\frac{1}{3}$ of _____.	1
C.	2, 4, 6, 8, _____.	1
D.	Draw your pattern with arrows.	1

E.	 <p>Make $\frac{1}{4}$ of this picture.</p>	1
F.	<p>Solve this.</p> <p>3, 5, 7, 9, ___</p>	1
Q-3	<p>Draw a pattern of your surrounding.</p> <hr data-bbox="337 821 987 827"/>	2
Q-4	<p>Make 2 different types of pattern with the use of this symbol.(\Rightarrow)</p>	4
	UNDERSTANDING	

Q-5	Fill in blank:- 26Z , 25Y , 24X , 23W, _____	1
Q-6	AB ,CD,EF,GH, _____	1
Q-7	Colour half the number of shapes as shown here. 	1
Q-8	Complete this pattern: 3, 6, 12, 24, _____, _____	1
Q-9	Complete the number Tower 	2
Q-10	Razia wants to change for Rs 100.How many notes will she get if All 10 rupee notes _____ All 5 rupee notes _____	2

Q-11	<p>Match the coloured part as shown.</p>  <p style="text-align: right;">3/4</p>  <p style="text-align: right;">4/4</p>  <p style="text-align: right;">1/2</p>  <p style="text-align: right;">1/4</p>	4
<u>Ability to compute</u>		
Q-12	Half of 100 = _____	1
Q-13	3/4 of 1 kg = _____grams	1
Q-14	<p>Fill suitable measure:</p> <p>In a 5000 metres race people run _____ KM</p>	1
Q-15	<p>Complete this following pattern.</p> <p>2, 4, ,6, 8, _____, _____</p>	1
Q-16	Billu height is 140 cm ,Akash’s height is 120 cm. What is the addition between their heights ?	2

Q-24	A Bus loaded 15people.Then how many buses we need for 180 people.	2																		
Q-25	<p>. There are 5 sacks of wheat ,3 sacks of rice,1 almirah,1 water tank,3 table,4 chair,2 mattresses,1 bamboo ladder,pots and pans .Weight of the things is following</p> <table style="margin-left: auto; margin-right: auto;"> <tr> <td>A Sacks of wheat</td> <td>100 kg</td> </tr> <tr> <td>A Sack of rice</td> <td>35 kg</td> </tr> <tr> <td>Water tank</td> <td>50 kg</td> </tr> <tr> <td>Almirah</td> <td>70 kg</td> </tr> <tr> <td>A table</td> <td>10 kg</td> </tr> <tr> <td>A chair</td> <td>5 kg</td> </tr> <tr> <td>A mattress</td> <td>20 kg</td> </tr> <tr> <td>Bamboo Ladder</td> <td>10 kg</td> </tr> <tr> <td>Pots and Pans</td> <td>10 kg</td> </tr> </table> <p>.Which things should be removed that the weight not more than 700 kgs?</p>	A Sacks of wheat	100 kg	A Sack of rice	35 kg	Water tank	50 kg	Almirah	70 kg	A table	10 kg	A chair	5 kg	A mattress	20 kg	Bamboo Ladder	10 kg	Pots and Pans	10 kg	4
A Sacks of wheat	100 kg																			
A Sack of rice	35 kg																			
Water tank	50 kg																			
Almirah	70 kg																			
A table	10 kg																			
A chair	5 kg																			
A mattress	20 kg																			
Bamboo Ladder	10 kg																			
Pots and Pans	10 kg																			