

KENDRIYA VIDYALAYA PICKET SECUNDERABAD HALFYEARLY QUESTION PAPER – 2019-20

Class: IV

Time: 2 hrs.

Subject: EVS

Marks: 80

Name: _____ Sec: _____ Roll No. _____

Competency	Observation (30)	Identification (25)	Discovery Factor (25)

Signature of Invigilator _____ Signature of Examiner _____


OBSERVATION

I. Observe the picture and answer the questions. 15 X 1 = 15

Observe the skin pattern and name the animals.

1)

2)



3. Name the given Picture.



4. Name the given Picture.



5. Name the Game



6. Name the Painting



7. Name the Person.



8. Name the Person.



9. Name the given Picture.



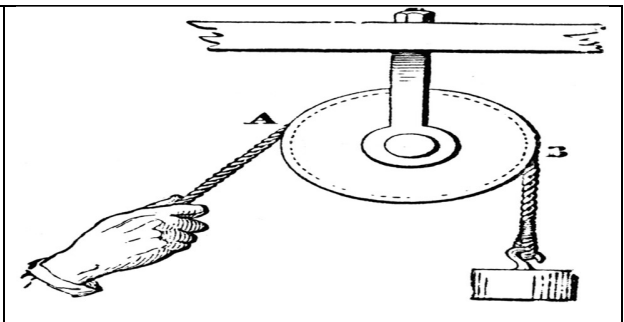
10. Name the given Picture.



11. Name the insect in the Picture.



12. Name the Object.



13. What do you call this person.



14. Name the Person.



15. Name the Flower



II. Observe the picture and write the answer.

5 x 2 = 10

a) Write any two reasons for water pollution.



b) Answer the question.



i) Name the mammal. _____

ii) Where does it live? _____

c)



Name the game?

I) Name the famous player in the above picture. _____

1) Observe the picture and answer.



I) Name the animal you see in the picture.

ii) A group of it is called.

e)



I) Name the Flower

II) Does it grow on bush or creeper?

III.

Observe the Railway reservation ticket and answer the 5 x 1 = 5

given questions.

शुभ यात्रा		HAPPY JOURNEY	
टिकट क्र. / PNR NO.	ट्रेन नं. / TRAIN NO.	दिनांक / DATE	कि.मी. / KM
450-0342225	22621	14-10-2013	407
वर्ग / CLASS	वय / AGE	वर्ग / CLASS	वय / AGE
SL	2	SL	0
RESERVATION SLIP (INVALID WITHOUT ORIGINAL PPS-RHS)			
नाम / NAME	पता / ADDRESS	व्य. संख्या / NO. UP TO	694
राधा रामेश्वरम / RAMESHWARI	काण्डलुमारी / KANDALUMARI		
कोच / COACH	सीट/नं. / SEAT/NO.	लिंग / SEX	वय / AGE
ML/113	ML/105	M	22
ML/114	ML/106	M	21
T. AUTHORITY: SBC 996332			
FARE: 40			
FOR FOUR ZERO ONLY			
VALID WITH ORIGINAL ID			
FROM: CHPE EXP		TO: BRD RAMESHWARI	
694 14-09-2013 12:42 SBC 6 VIA NNI -HOU		SCH DEP 14-10 20:45 ARR 15-10 04:05	

- 1) PNR Number _____
- 2) TRAIN NO. _____
- 3) TRAIN NAME _____
- 4) DISTANCE (Kms) _____
- 5) THE FARE (Cost of the ticket) _____

IDENTIFICATION

1) Give two examples of each:

5 x 1 = 5

1) Animals that has ears _____, _____

2) Places for which we have to buy tickets to enter

_____, _____

- 3) Flowers used as food _____, _____.
- 4) Two rivers of India _____, _____.
- 5) Two insects seen around flowers _____, _____.

II) Choose the correct Answer and put a (✓) mark. 5 x 1 = 5

a) National animal of India

- 1) Tiger 2) Cat
3) Sheep 4) None of the above

b) Animals which have hair on their body.

- 1) Give birth to babies 2) lays eggs
3) ears cannot be seen 4) All the above

c) Karanam Malleswari is a

- 1) Foot ball player 2) Weight lifter
3) Kho-Kho player 4) Kabaddi player

d) _____ bee collects nectar from flower.

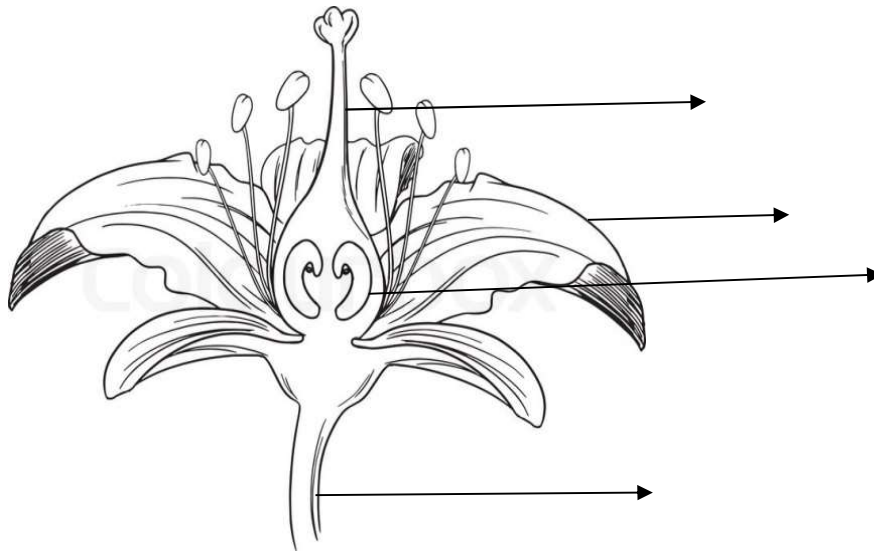
- 1) Queen bee 2) Male bee
3) Worker bee 4) None of the above

e) An animal that lives in a herd.

- 1) Tiger 2) Cat 3) Sheep 4) Elephant

II) a) Label the parts of a Flower.

5 x 2 = 10



b) Classify the Games.

Kho-Kho Carroms Kabbadi Chess

Indoor Games	Outdoor Games

c) Match the following:

- | | | |
|--------------|-------------|--------|
| a) Konkani | Gujarat | () |
| b) Marathi | Goa | () |
| c) Gujarati | Kerala | () |
| d) Malayalam | Maharashtra | () |

d) Write two differences between bamboo bridge and cement bridge

Bamboo Bridge	Cement Bridge

--	--

e) Name two animals that lays eggs and two animals that give birth to babies.

Animals lays Eggs	Animals give birth to babies

III. Read the Time Table and answer

5 x 1 = 5

6335 Nagarcoil Express

Sl.No	Station Name	Arrival Time	Departure Time	Distance (Kilometre)	Day
1	Gandhidham	--	05:15	0	1
2	Ahmedabad	11:30	11:50	301	1
3	Vadodara	14:03	14:10	401	1
4	Surat	16:15	16:20	530	1
5	Valsad	17:23	17:25	598	1
6	Bhiwandi Raod	21:10	21:12	772	1

1. From which station did the train start?

Ans. _____

2. How many minutes did the train stop at Ahmedabad?

Ans. _____

3. What is the distance between Gandhidham and Surat?

Ans. _____

4. The train reached Vadodara at _____ hours

5. The train was at _____ at 17.23 hours

DISCOVERY OF FACTS

I) Which of the following will change colour when dissolved in water?
Write Yes / No in the blank

5 X 1 = 5

- a) Haldi _____
- b) Sugar _____
- c) Sherbet _____
- d) Cooking Soda _____
- e) Soap water _____

II) **Choose the correct answer and fill in the blanks** **5 x 1 = 5**

1) Mixture of Mud and Cow dung coated on the floor keeps _____ away

- a) Insects
- b) Birds

2) We use Sunflower to make _____

- a) Scent
- b) Medicines

3) Marble and Cement are used to make the floor _____

- a) Strong
- b) Weak

4) Branches of Neem and Keekar trees protect _____ from termites

- a) Wood
- b) Iron

5) In Dessert areas of Rajasthan _____ trees are found

- a) Mango tree
- b) Khejadi tree

III) Give Reasons

5 x 2 = 10

1) The route from Goa to Kerala has 2000 Bridges and 92 Tunnels. Why?

A. _____

_____.

2) We should not cut the trees. Why?

A. _____

_____.

3) It is not safe to drink River water directly. Why?

A. _____

_____.

4) Why do people hunt animals?

A. _____

_____.

5) Why do Elephants flap their ears ?

A. _____

_____.

Mark the States in the Indian Political Map.

5 x 1 = 5

1. State in which people speak Marathi. _____
2. State which is famous for Madhubani paintings _____
3. State in which Bamboo bridges are used _____
4. State of Karanam Malleswari _____
5. State where Valley of flowers is situated _____

INDIA POLITICAL MAP

