	<b>KENDRIYA VIDYALA CHENNAI REGION MADURAI CLUSTER</b>		
	<b>HALF YEARLY EXAMINATION 2017 MODEL PAPER</b>		
	<b>SUBJECT: EVS</b>		
	<b>CLASS: IV</b>	<b>SEC:</b>	<b>TIME: 2 1/2 HOURS</b>
<b>NAME OF THE STUDENT:</b>			<b>ROLL NO:</b>
<b>Invigilator's Sign:</b>		<b>Evaluator's sign:</b>	
<b>Maximum marks: 80</b>		<b>Marks obtained:</b>	

General Instructions:

- a) All questions are compulsory.
- b) The question paper consists 41 questions divided into three Parts A, B and C.
- c) Part A contains 20 questions of 1 mark each.
- d) Part B contains 15 questions of 2 marks each.
- e) Part C contains 6 questions of 5 marks each.

**PART-A**

I) Fill in the blanks.

1. A hot sandy place with dry soil is called \_\_\_\_\_.
2. Honey bees are attracted to \_\_\_\_\_ flowers.
3. Kottayam is a district in \_\_\_\_\_.
4. \_\_\_\_\_ rings are there in Olympic symbol.
5. The valley of flower is in \_\_\_\_\_.

II) Choose the correct answer

6. Mammals have ears which are ----- (visible\ invisible).
7. An elephant herd has mainly----- (male \ female)
8. (Malayalam\ Kannada) ----- is the spoken language of Kerala.

9. ----- (Architect \ mason) makes the map design of the building.

10. ----- (Tea dust \ salt) doesn't dissolve in water

III) Circle the odd one.

11) Sugar              Dal              Salt              Lemon juice

12) Pilot              Mason              Carpenter              Electrician

13) Van              Bus              Cycle              Truck

14) Deer              Tiger              Frog              Dog

15) Ganges              Vaigai              Kaveri              Arabian Sea

IV) Locate the following in India political map:

16. Tamil Nadu    17.Kerala    18.Goa    19.Rajasthan.    20. Punjab.



PART-B

V) Answer the following

21. Where do we build bridge?

---

---

---

22. What is Madhubani?

---

---

---

23. What changes will happen due to transfer of family members.

---

---

---

24. Name four insects that live together in group.

---

---

---

25. What is a ferry?

---

---

---

26. Name some things that are sold at the railway station.

---

---

---

27. What are extinct animals? Give two examples.

---

---

---

28. Why do people hunt animals?

---

---

---

29. Write the materials use to build a hut.

---

---

---

30. Draw a honey bee and label the parts.

VI.Observe the picture and write two lines



---

---

32



---

---


33



---

---

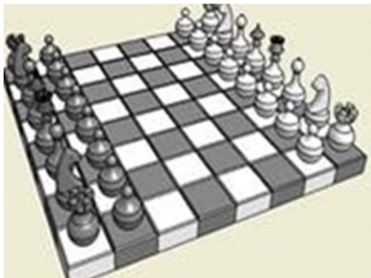
34



---

---

35



---

---

PART-C

III.LONG ANSWERS

36 (a).Draw a flower and label the parts.

(b). Write the uses of flower.

---

---

---

---

---

37. Write the differences between cement bridge and bamboo bridge.


38. Classify the following.

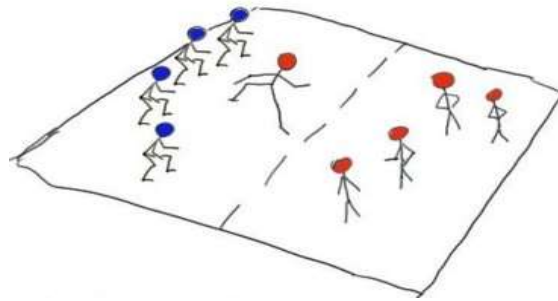
Fox ,Elephant, Sparrow, Pigeon, Frog, Crow, Peacock, Pig, Mouse, Cat, Buffalo,  
Duck, Hen, Camel, Lizard, cow.

Ears can be seen

Ears cannot be seen

--	--

39 .Observe the picture and answer the question



i) Write the name of the game. \_\_\_\_\_


ii) Is it indoor game or outdoor game? \_\_\_\_\_

iii) Number of players in this game. \_\_\_\_\_

iv) Other names of this game  
\_\_\_\_\_

v) Write any one rule of playing this game.  
\_\_\_\_\_

40) Look at the picture and answer the following.



i) Name the people who help in constructing the house.

---

---

---

ii) What kind of work are they doing?

---

---

---

41) How are trees useful for us?

---

---

---

---

---

---

---