

CODE NO.: A	TOTAL PAGES :05
-------------	-----------------

KENDRIYA VIDYALAYA AFS, BAGDOGRA
MODEL PAPER FOR PERIODIC TEST -II, 2019-20

SUBJECT:	ENGLISH	CLASS:	III
TIME:	90 MINUTES	MAX. MARKS:	50

INSTRUCTIONS:

1. All questions are compulsory.
2. Write the answer in the space provided in the booklet itself.
3. VSA-1 Mark each, answer in one word to one sentence.
4. SA-2 Marks each, answer in 10 words.
5. LA-5 Marks each, answer in 40 words.

NAME: _____ SEC: _____ ROLL NO: _____

INVIGILATOR'S SIGN: _____ MARKS OBTAINED: _____

EXAMINER'S SIGN: _____

Q. 1	<u>READING</u>	
	<p>Reading the passage carefully and answer the questions given below it:</p> <p>Anisha got up at 8 O'clock. She rushed to brush her teeth and have a bath. While she was scrubbing her face, mother shouted, "Hurry up your favourite dish is ready and new clothes are waiting for you." Anisha dressed up and came to the drawing room. She saw a bowl on the table. "What is this, mother?", asked Anisha, "this is kheer for you," replied mother. Anisha exclaimed, "wow!" Anisha loved the delicious dish.</p>	
a)	At what time Anisha got up?	1M
b)	What did Anisha see on the table? _____	1M
c)	Which thing Anisha loved very much?	1M

d)	Write the past tense of 'rush' from the passage? _____	1M
e)	Who shouted when she was scrubbing her face? _____	1M
Q2.	<u>WRITING</u> Answer the following questions-	
a)	How old is the speaker in chapter Don't Tell? _____	1M
b)	Why does the washer man bring donkey? _____	1M
c)	When does the baby lough? _____	2M
d)	What does the baby do with the pebbles? _____ _____	2M
e)	What sound do you hear on the road in the morning? _____ _____	2M
f)	Why is the road annoyed with the crow? _____ _____	2M
Q3.	<u>GRAMMAR</u>	1M
a)	Write the plural form of the given word: - Tiger_____	

b)	Write two rhyming words for the given word. rat _____	1M
c)	Add “ly” to make a word. near _____	1M
d)	Fill in the blanks One child, many _____	1M
e)	Write the full form of the given word Don't _____	1M
f)	Make sentence using the following Village _____	1M
g)	Write the meaning of the following word Silly _____	1M
h)	Write the home of the given animal Ant _____	1M
i)	Write the young ones of the given animal Horse _____	1M
j)	Change the gender of the given word Women: - _____	1M
Q4.	<u>CREATIVE WRITING</u>	5M
a)	Write five sentence about your pet. _____ _____ _____ _____ _____	

TOTAL PAGES :06

KENDRIYA VIDYALAYA AFS, BAGDOGRA
SAMPLE PARER (PT-II), 2019-20

SUBJECT:	EVS		CLASS:	III
TIME:	90 MIN.		MAX. MARKS:	50

INSTRUCTIONS:




- 1. All questions are compulsory.**
- 2. Write the answer in the space provided in the booklet itself.**




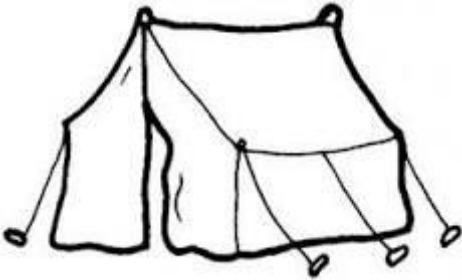

NAME: _____ SEC: _____ ROLL NO: _____

INVIGILATOR'S SIGN: _____ MARKS OBTAINED: _____


EXAMINER'S SIGN: _____


OBSERVATION

1.	Observe the pictures and write their names:	
a)	 _____	1M
b)	 _____	1M
c)	 _____	1M

<p>d)</p>	 <p>_____</p>	<p>1M</p>
<p>e)</p>	 <p>-----</p>	<p>1M</p>
<p>f)</p>	 <p>_____</p>	<p>1M</p>
<p>g)</p>	 <p>_____</p>	<p>1M</p>
<p>h)</p>	 <p>_____</p>	<p>1M</p>

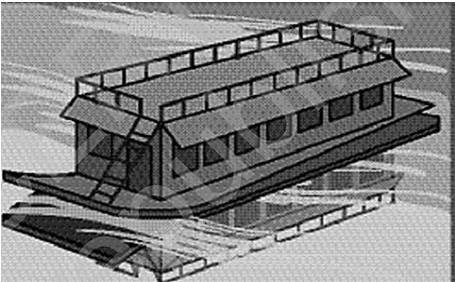
i)	 <p>© Can Stock Photo - csp12912078</p>	1M
----	---	----


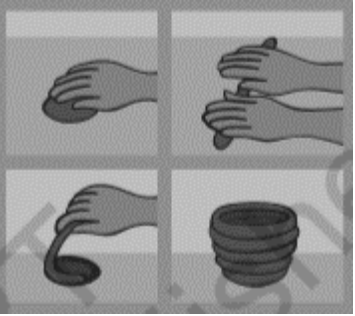
j)		1M
----	---	----

2.	<p>Observe the picture and write its name. How many players are needed to play this game?</p>  <p>#160171024</p>	2 M
----	---	-----

3	<p>Draw two medicinal plants and write their uses?</p> <div style="display: flex; justify-content: space-around;"> <div style="border: 1px solid black; width: 300px; height: 150px; margin-bottom: 10px;"></div> <div style="border: 1px solid black; width: 300px; height: 150px; margin-bottom: 10px;"></div> </div> <hr style="border: 0.5px solid black; margin-bottom: 5px;"/> <hr style="border: 0.5px solid black; margin-bottom: 5px;"/> <hr style="border: 0.5px solid black; margin-bottom: 5px;"/>	2 M
---	---	-----

IDENTIFICATION

<p>1.</p> <p>a</p> <p>b</p> <p>c</p> <p>d</p>	<p>Choose the correct answer to fill in the blanks.</p> <p>_____ is an indoor game.(Ludo / Cricket)</p> <p>We take _____ when we have a toothache.(ajwain / clove)</p> <p>The food item that we get from plant_____.(Milk / egg / potato)</p> <p>We send E-mails through _____. (Telephone / Post office /Computer)</p>	<p>1M</p> <p>1 M</p> <p>1M</p> <p>1M</p>
<p>2.</p>	<p>Write name of one animal that you cannot touch and name of one animal that can bite us.</p> <p>_____</p> <p>_____</p>	<p>2 M</p>
<p>4.</p>	<p>Draw a mud house. Write one sentence about this house.</p> <div data-bbox="245 703 724 1099" style="border: 1px solid black; width: 300px; height: 177px; display: inline-block;"></div> <p>_____</p>	<p>2M</p>
<p>5.</p>	<p>Write any one name of following game –</p> <p>Traditional - _____</p> <p>Non-tradition - _____</p>	<p>2M</p>
<p>6.</p>	<p>Identify the picture and write how it is different from other houses?</p> <div data-bbox="225 1447 681 1727" style="border: 1px solid black; width: 286px; height: 125px; display: inline-block;"></div> <p>_____</p> <p>_____</p> <p>_____</p>	<p>2M</p>

7.	<p>Observe the picture and write.</p>  <p>What is the boy doing? _____</p> <p>What is the color of letterbox? _____</p>	2M	
8.	<p>Write the process to make a bowl from a roll of clay.</p> <p>_____</p> <p>_____</p> <p>_____</p> <p>_____</p> <p>_____</p> <p>_____</p> <p>_____</p>		5M
<u>DISCOVERY OF FACTS</u>			
Q 1	<p>What does PIN stand for?</p> <p>_____</p>	1M	
Q 2	<p>Which is the cheapest means of communication (Postcard / Telegram / Telephone)</p> <p>_____</p>	1M	
Q 3 Ans	<p>Write name of any one thing that a blind person can use.</p> <p>_____</p>	1 M	
Q 4	<p>What did the potter need to make a pot?</p> <p>_____</p>	1 M	

Q 5 Goat eats grass. () Lion is a pet animal ()	Write True or False against the statement.	1M
Q 6	Which is our National game? <hr/>	1 M
Q 7 Ans	Name the parts of the plants that is eaten as food: Ginger _____ Mustard _____ Mango _____ Carrot _____	2 M
Q 8 Ans	Why do you keep the following animals in your house? A Cat _____ A Cow _____	2 M
Q 9 Ans	Why do we need a house? <hr/> <hr/> <hr/> <hr/>	2 M
Q 10	Write five lines on Braille script. <hr/> <hr/> <hr/> <hr/> <hr/> <hr/> <hr/> <hr/>	5M

कुल पृष्ठ:-5

केन्द्रीय विद्यालय वायुसेना, बागडोगरा
सामयिक परीक्षा-2
सत्र- (2019-20)

विषय:	हिन्दी		कक्षा:	तीसरी
अवधि:	90 मिनट		पूर्णांक:	50

नाम: _____ अनुक्रमांक _____ अनुभाग _____

निरीक्षक हस्ताक्षर : _____ परीक्षक हस्ताक्षर : _____

निर्देश: सभी प्रश्न अनिवार्य हैं।

पठन
अपठित गद्यांश

नीचे दिए गए अनुच्छेद को पढ़कर प्रश्नों के उत्तर लिखो।

अवंती ने एक छोटी-सी रंगई की दुकान खोली और गाँववासियों के लिए कपड़ा रंगना शुरू कर दिया। सब लोग उसकी रंगई की प्रशंसा करने लगे। धीरे-धीरे उसकी दुकान चल निकली। अवंती की प्रशंसा सुनकर एक सेठ को बहुत ईर्ष्या महसूस होने लगी।

प्रश्न-1	अवंती ने किसकी दुकान खोली ? उत्तर: _____	1
प्रश्न-2	अवंती ने किसके लिए कपड़ा रंगना शुरू किया ? उत्तर: _____	1
प्रश्न-3	अवंती की प्रशंसा सुनकर किसे ईर्ष्या होने लगी ? उत्तर: _____	1
प्रश्न-4	सब लोग किसकी प्रशंसा करने लगे ? उत्तर: _____	1

प्रश्न-5	गद्यांश से एक संयुक्त अक्षर वाला शब्द लिखो । उत्तर: _____	1
	<u>लेखन</u>	
प्रश्न-1	सर्दी में हम क्या पहनते हैं ? उत्तर: _____ _____	1
प्रश्न-2	शिवदास ने गुरुजी की थैली देखकर अपनी गाड़ी क्यों दे दी? उत्तर: _____ _____	1
प्रश्न-3	डंक मारने वाले कीड़ों के नाम लिखो ? उत्तर: _____ _____	2
प्रश्न-4	क्या बूढ़े आदमी ने सचमुच मेरा इलाज कर दिया था ? तुम ऐसा क्यों सोचते हो ? उत्तर: _____ _____	2
प्रश्न-5	बाघ की खबर पूरे गाँव में फैल गई ? कैसे? उत्तर: _____ _____	2
प्रश्न-6	लोग मीरा बहन के पास पहुँचे । क्यों ? उत्तर _____ _____	2
	<u>व्याकरण</u>	
प्रश्न-1	'ई' लगाकर शब्द बनाएँ । रंग - रंगाई	1

	साफ़ - -----	
प्रश्न-2	अनुस्वर या चन्द्रबिंदु लगाकर सही शब्द बनाएँ । गेहू - -----	1
प्रश्न-3	तुक वाले शब्द लिखें। साँप - -----	1
प्रश्न-4	वाक्य ठीक करें । पिंजड़ा बिना बाघ बंद हो गया । -----	1
प्रश्न-5	समान अर्थ वाले शब्द लिखें। अवश्य - -----	1
प्रश्न-6	बहुवचन लिखें। कहानी - -----	1
प्रश्न-7	सही निशान लगाओ। ! ? गुरु जी नमस्ते किधर चले	1
प्रश्न-8	विलोम शब्द लिखो । मीठा - -----	1
प्रश्न-9	विशेषण शब्द लिखें। ----- अवन्ती	1
प्रश्न-10	लिंग बदलें । आदमी - -----	1
	<u>सृजनात्मक-लेखन</u>	
प्रश्न 1	चाय बनाने की विधि पाँच वाक्यों में लिखें। ----- -----	5

	<hr/> <hr/> <hr/> <hr/> <hr/> <hr/> <hr/> <hr/>	
प्रश्न-2	बाघ के बारे में पाँच वाक्य लिखें। <hr/> <hr/> <hr/> <hr/> <hr/> <hr/> <hr/> <hr/> <hr/> <hr/>	5
	<u>वर्तनी</u>	
क	शब्दों को शुद्ध करके लिखिए।	
1	पंचतत्र - -----	1
2	साप - -----	1
3	ऊँगली - -----	1
4	ईलाज - -----	1
5	नमसते - -----	1

KENDRIYA VIDYALAYA AFS, BAGDOGRA**PERIODIC TEST-SAMPLE PAPER, 2019-20**

SUBJECT:	MATHEMATICS		CLASS:	III
TIME:	90 MINUTES		MAX. MARKS:	50

INSTRUCTIONS:

- 1. All questions are compulsory.**
- 2. Write the answer in the space provided in the booklet itself.**

NAME: _____ SEC: _____ ROLL NO: _____


INVIGILATOR'S SIGN: _____ MARKS OBTAINED: _____

EXAMINER'S SIGN: _____


KNOWLEDGE**VSA**

1	Encircle the correct answer. Weight of 1 mango will be- a) 10kg b) 15kg c) 100g	1M
2	Continue the pattern. 10A, 11B, 12C, _____	1M

3	Fill in the blank. $12 \times 3 = \underline{\hspace{2cm}}$	1M
4	Tick the correct answer and write. If we add 1 to any odd number we get an $\underline{\hspace{2cm}}$ (even/odd) number.	1M
5	Write the correct answer. Liquids are measured in $\underline{\hspace{2cm}}$. (metre/litre)	1M
6	Fill in the blank. $3+3+3+3 = 4 \times \underline{\hspace{2cm}}$	1M
	SA	
7	Convert the following- 1 kilogram = $\underline{\hspace{2cm}}$ gram Half kilogram = $\underline{\hspace{2cm}}$ gram	2M
8	Which of the following things weigh less than half kilogram ? Your school bag, your pair of shoes, a brick, geometry box <hr/>	2M
	LA	
9	Match the write answers. a. 4 times 4 $3 + 3$ b. 2 times 3 $5 + 5$ c. 3 times 2 $4 + 4 + 4 + 4$ d. 2 times 5 $2 + 2 + 2$	4M

UNDERSTANDING		
	VSA	
10	<p>Guess your own weight and mark \checkmark.</p> <p>a) 80kg b) 20 – 40 kg c) 200 kg</p>	1M
11	<p>Continue the pattern.</p> 	1M
12	<p>Continue the pattern.</p> <p>AB AABB AAABBB _____</p>	1M
13	<p>Complete it .</p> <p>2×5 is 2 times _____</p>	1M
	SA	
14	<p>Look for the rules and continue this pattern.</p> <p>12A, 13B, 14C, _____, _____</p>	2M
15	<p>Write any 2 even numbers between 155 and 165.</p> <p>_____ _____</p>	2M
	LA	
16	<p>Match the right pairs.</p> <p>a) About 10 litres water tank</p> <p>b) Less than $\frac{1}{2}$ litre bucket</p> <p>c) About 5 litres eye drop bottle</p> <p>d) 2000 litres water suraahi</p>	4M

ABILITY TO COMPUTE														
	VSA													
17	Solve the following. $54 \times 12 = \underline{\hspace{2cm}}$	1M												
18	Fill in the blank. $1080g = 1\text{kilogram and } \underline{\hspace{1cm}}g$	1M												
19	Continue the pattern. $2, 4, 6, 8, \underline{\hspace{2cm}}$	1M												
20	Convert into millilitres. $2\text{ litres} = \underline{\hspace{2cm}}\text{ millilitres}$	1M												
	SA													
21	Fill in the boxes. a) $\square \times 6 = 36$ b) $10 \times \square = 50$	2M												
22	Complete the following. a) $50\text{ kg} = 10\text{kg} + 20\text{kg} + \underline{\hspace{2cm}}$ b) $\underline{\hspace{2cm}} = 25\text{kg} + 20\text{kg}$	2M												
	LA													
23	Fill the following multiplication grid. <table border="1" style="margin-left: 20px;"> <tr> <td>\times</td> <td>4</td> <td>6</td> <td>8</td> </tr> <tr> <td>3</td> <td></td> <td></td> <td>24</td> </tr> <tr> <td>5</td> <td></td> <td>30</td> <td></td> </tr> </table>	\times	4	6	8	3			24	5		30		4M
\times	4	6	8											
3			24											
5		30												

	PROBLEM SOLVING ABILITY	
	VSA	
24	<p>Continue the following pattern.</p> 	1M
25	<p>How many corners would 3 triangles have ?</p> <p>_____</p>	1M
26	<p>Choose the correct answer.</p> <p>Which requires bigger bag.</p> <p>1kg popcorn or 1kg sugar</p> <p>_____</p>	1M
27	<p>Naseem's bottle can hold 72 litres of water . Abdul bottle can hold 36 litres of water.</p> <p>Naseem's bottle can hold _____(twice/half/three times) as much water as Abdul's bottle.</p>	1M
	SA	
28	<p>One bottle holds 400ml and another bottle holds 600ml . How many total litres do both the bottles hold ?</p>	2M
29	<p>Write the correct answer.</p> <p>a) 10 kg = <input type="text"/> grams</p> <p>b) 11 kg = <input type="text"/> grams</p>	2M

	LA																															
30	<p>Help the milkman Gopal to measure the milk by using appropriate litre.</p> <p>How many times Gopal used litres of different capacity for given quantity</p> <table border="1"> <thead> <tr> <th>QUANTITY</th> <th>50ml</th> <th>100ml</th> <th>200ml</th> <th>500ml</th> <th>1litre</th> </tr> </thead> <tbody> <tr> <td>2L 500 ml</td> <td></td> <td></td> <td></td> <td></td> <td></td> </tr> <tr> <td>1250 ml</td> <td></td> <td></td> <td></td> <td></td> <td></td> </tr> <tr> <td>200 ml</td> <td></td> <td></td> <td></td> <td></td> <td></td> </tr> <tr> <td>3 litre</td> <td></td> <td></td> <td></td> <td></td> <td></td> </tr> </tbody> </table>	QUANTITY	50ml	100ml	200ml	500ml	1litre	2L 500 ml						1250 ml						200 ml						3 litre						4M
	QUANTITY	50ml	100ml	200ml	500ml	1litre																										
	2L 500 ml																															
	1250 ml																															
	200 ml																															
	3 litre																															