

**KENDRIYA VIDYALAYA, IIM LUCKNOW**

**HALF YEARLY EXAM, 2019-20**

**CLASS-III**

**TIME: - 2 ½ HOURS**

**SUBJECT: - EVS**

**M.M.: - 80**

Name: - ..... Date: - .....

Section: - ..... Invigilator's Sign: - .....

Roll No.: - ..... Examiner's Sign: - .....

**GRADE-SHEET**

<b>COMPETEN CIES</b>	<b>OBSERVATI ON</b> 30	<b>IDENTIFICATI ON</b> 25	<b>DISCOVERING FACTS</b> 25	<b>TOTAL</b> 80
<b>MARKS</b>				

Remarks of Examiner: - .....  
.....

**Section – A (Observation & Reporting)**

**(30 marks)**

**Q1. (i) Answer the following questions: - (1X10=10 Marks)**

**a) Write the name of one animal that can hop.**

**Ans: .....**

**b) Name one animal that lives in water.**

**Ans: .....**

**c) Write the name of the biggest bird.**

**Ans: .....**

**d) What do you call the young ones of tiger?**

**Ans: .....**

**e) What do we call a person who cannot hear?**

**Ans: .....**

(ii) Observe the pictures and write their names.



Q2. Answer the following questions: (2 X 5=10 Marks)

i) Why do people do different work?




Ans:.....  
.....

ii) Give two examples of herbs (medicinal plants)?

Ans:.....  
.....

ii) Name any four rivers of India?



Ans:.....

.....

iv) Write name of some vegetables that can be eaten raw (without cooking) ?

Ans:.....

.....

v) Give names of some vehicles which do not run on wheels ?

Ans:.....

.....

Q3 (a) Draw the following. (2½ X 2=5)

<u>Two utensils used for cooking food</u>	<u>Two utensils used for eating food</u>

(b) Name 5 in each. (5 marks)

<u>Plants which give us flowers</u>	<u>Plants/Trees which give us fruits</u>
1..... 2.....	1..... 2.....
3..... 4.....	3..... 4.....
5.....	5.....

**Section –B (Identification & Classification)**

**Q4. (a) Tick the following questions: - (1X10= 10 Marks)**

- i) Which bird imitate human voice? Parrot ( ) Crow ( )
- ii) Which bird eats dead animals? Pigeon ( ) Vulture ( )
- iii) Which food item do we get from plant? Egg ( ) Wheat ( )
- iv) Which one is the sound of a duck? Hoot ( ) Quack ( )
- v) Who repairs cars and scooters and bikes? Mechanic ( ) Tailor ( )

**(b) Pick the odd one out. (5marks)**

**(i) Sparrow, crow, parrot, penguin** .....

**(ii) Taxi, scooter, steamer, bus** .....

**(iii) Aeroplane, helicopter, ambulance, space shuttle** .....

**(iv) Rain, rainbow, river, lake, pond** .....

**(v) Deaf, skin, dumb, blind, handicap** .....

**Q5. Answer the following questions. (2 X 5= 10 Marks)**

a) **Write the name of any four sources of water?**

**Ans:**.....  
.....

b) **Write the name of any four helpers (occupations).**

**Ans:**.....  
.....

c) **What are utensils made of ?**

**Ans:**.....  
.....

d) **Name two food items each which we get from animals and plants?**

**Ans:**.....  
.....

e) **Name the things which we use to decorate our house?**

**Ans:**.....  
.....

**Q6. Write down five domestic and five wild animals? (5)**

**Wild Animals**

**Domestic Animals**

- a) .....
- b) .....
- c) .....
- d) .....
- e) .....

- a) .....
- b) .....
- c) .....
- d) .....
- e) .....

**Section –C (Discovery of Facts)**

**Q7. a) Fill in the blanks: - (1 X 5= 5 Marks)**

- i) Our first school is our ..... (family/ friends)
- ii) Chappati is made of ..... (rice/wheat)
- iii) ..... help a bird to fly . (beak/wings)
- iv) Trains move on ..... (road/track)
- v) Best way of cooking food is ..... . (steaming/frying)

**b) Match the drivers with the vehicles : (1 X 5=5 Marks)**

<b>Drivers</b>	<b>Vehicles</b>
1) Pilot	Ship
2) Teamster	Boat
3) Captain	Aeroplane
4) Oarsman	Train
5) Engine driver	Truck


**Q-8 Answer the following questions. (2X 5= 10 Marks)**

**a) Name the five sense organs. Write their work too.**

Ans:.....  
.....  
.....  
.....  
.....

**b) Draw a bird and label its common features: -**

**Ans:**



**(c) Why do not some children go to school ?**

**Ans:**.....  
.....  
.....

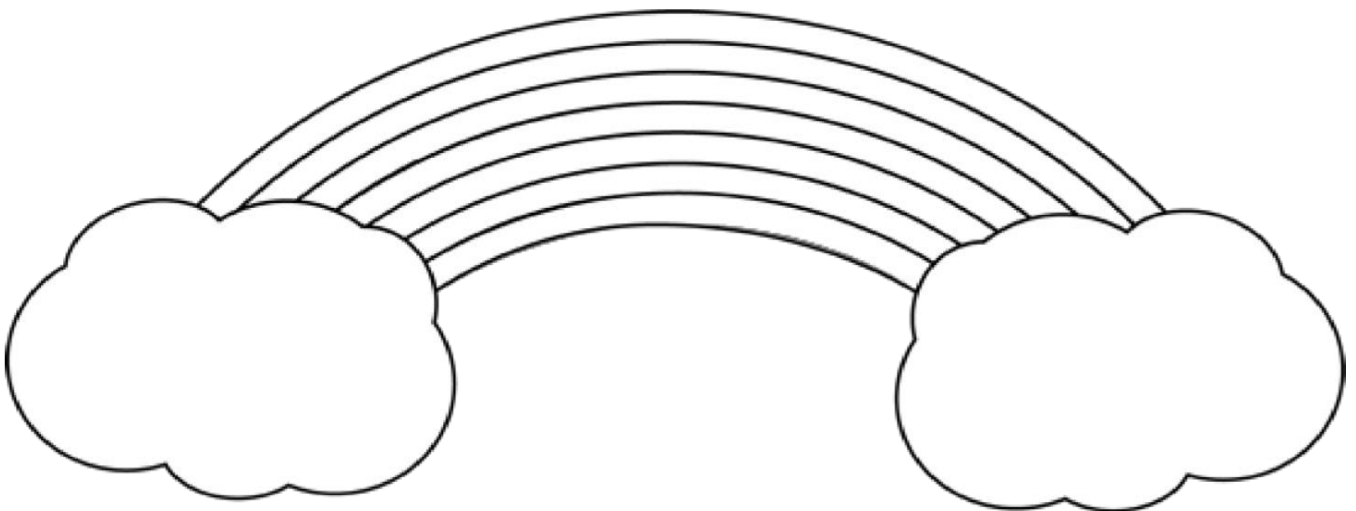
**(d) Write two things cooked by each methods .**

**Ans: 1) Frying : ..... 3) Steaming: .....**  
**2) Baking: ..... 4)Frying: .....**

**(e)Name the people you find in these places.**

**Ans:1)Hospital .....**  
**2) School .....**

**Q9 Colour the rainbow and write the name of the colour: (5 X 1=5 Marks)**



**Ans: Name of the colours:**

- i)**..... **ii)** .....
- iii)**..... **iv)** .....
- v)**..... **vi)** .....
- vii)** .....

**OR**

**Q9 Draw a picture of a plant and label its parts.**

