	KENDRIYA VIDYALA SANGATHANS , CHENNAI REGION (MADURAI CLUSTER)		
	HALF YEARLY EXAMINATION -2017(MODEL PAPER)		
	SUBJECT: EVS		
	CLASS: III	SEC:	TIME: 2 1/2 HOURS
NAME OF THE STUDENT:			ROLL NO:
Invigilator's Sign:		Evaluator's sign:	
Maximum marks: 80		Marks obtained:	

INSTRUCTIONS

PART-A each question carries 1 mark

PART-B each question carries 2 mark

PART-C each question carries 5 mark

PART- A

I VERY SHORT ANSWER

a) OBSERVE THE PICTURE AND WRITE ABOUT IN ONE LINE

1.



2.



3.



4.



5.



I b) FILL IN THE BLANKS

6. A beautiful bird with blue green long feathers_____

7. Plants with thick or thin trunk are called _____

8. _____ is the solid form of water.

9. _____ is the fastest means of transport.

10. Rainbow is a band of _____ colours.

I c) MATCH THE FOLLOWING

11. People who cannot hear

Raw food

12. Sandwich

Flower

13. Colourful part of a plant

Aunt

14. Uncle's wife

Peacock

15. National Bird

Deaf

I d). Mark the following places in India Map

New Delhi Tamil Nadu kerala Jammu Kashmir Maharashtra



PART-B

II ANSWER THE FOLLOWING

21. Name four animals that live in trees

22. Where do you throw the garbage? Name any 2 household work you do in your home _____

23. Some places are shown below. Write the names of people who work there.

Hospital



.....

School



.....

Police station



.....

Garden



.....

24 .Match the two columns:

Milk

Chips

Curd

Bread

Potato


Ice cream

Wheat

Lassi

25. Why do we need house?

26. Identify the following animals. Write the food they eat.



27. How many sense organs do we have? What are they?

28. Observe the picture and write two lines about it.




29. Name any four methods of cooking.

30. Name any four fuels that we use.

31. When do people talk through actions?

32. Identify the bird and write about its beak.

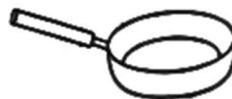


.....

33. How do you store drinking water in your house ?

34. Name any four land transport


35. What are the Utensils made up of? Name the below utensils



PART- C

III.ANSWER IN DETAIL

36. Draw a rainbow and colour it.



37. Write three lines about "TEACHER" " DOCTOR" and write what do you want to be in future

TEACHER

DOCTOR

What do you want to be in future

38. Classify the following animals as mammals , birds, insects, reptiles

Cow Parrot Elephant Housefly Lizard
 Snake butterfly

Mammals	Birds	Insects	Reptiles

38 a) Tick the correct answer

- a) Main Source of water is _____ (Pond / Rain)
- b) We Should eat at _____ (irregular /regular)interval of time
- c) Clouds_____ (condense / evaporate) to give rains
- d) An example of liquid fuel is _____ (electricity/ kerosene)
- e) A house protects us from our _____ (friends / heat)

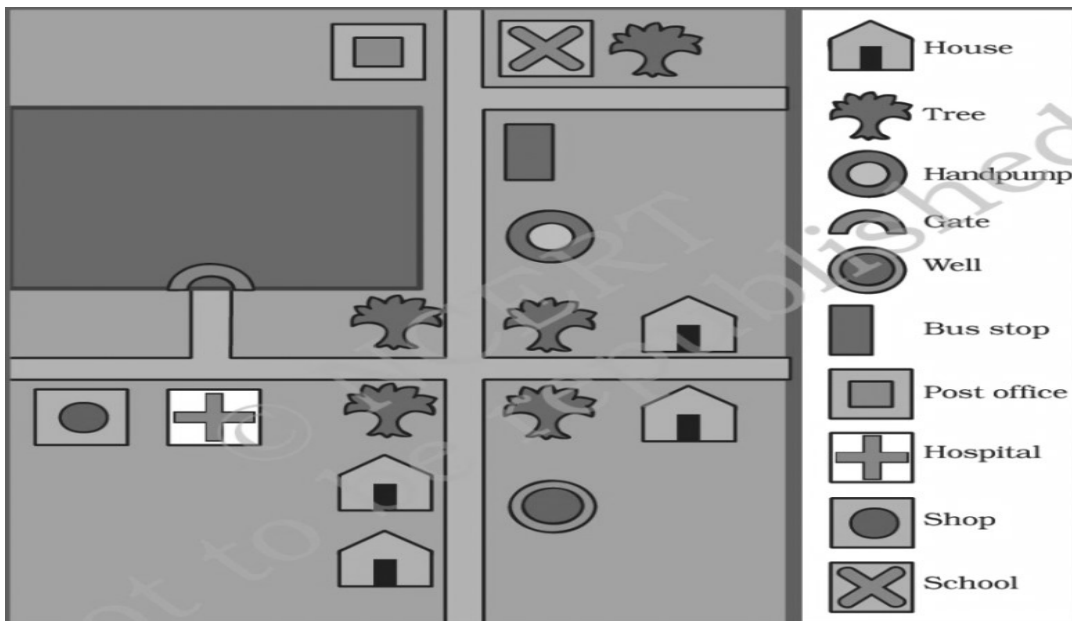
39) Name the part of your house and its purpose

Part of your house	Purpose

40. Look at the picture and label its parts



41. Observe the pictures and answer the following questions.



- a) How many hand pumps are there in the map _____
- b) How many trees are there in the map _____
- c) What is near to the shop _____
- d) Is the bus stop closer to the school or to the hospital _____
- e) How many houses are there in the map ? _____