

GOVT HIGHER PRIMARY SCHOOL

FIRST SUMMATIVE EVALUATION (Bilingual) 2022-23

STD : 3

SUB : MATHS

Student Name : _____

Roll Number : _____

Marks : 100

Date : _____

1. Write 0 to 20 numbers.

1x6=6

2. What comes before and after write it.

1x2=2



3. Circle the bigger number .

1x2=2



4. Circle the smaller number .

1x2=2



5. Colour the biggest number yellow and smallest number red.

1x2=2



6. Tick () Even or Odd.

1x2=2

Things	Total	Even	Odd
	7		
	6		

7. Write the missing even numbers.

1x5=5



8. Add these.

1x2=2

$$\begin{array}{|c|} \hline 2 \\ \hline \end{array} + \begin{array}{|c|} \hline 4 \\ \hline \end{array} = \begin{array}{|c|} \hline \\ \hline \end{array}$$

$$\begin{array}{|c|} \hline 5 \\ \hline \end{array} + \begin{array}{|c|} \hline 13 \\ \hline \end{array} = \begin{array}{|c|} \hline \\ \hline \end{array}$$


9. Read the problem and solve it.

2x2=4

a) Jaya has 8 books . she got 7 more books . How many books does Jaya have now ?

$$\bigcirc + \bigcirc = \bigcirc$$

b) There were 17 balls in a box. rohith took away 9 balls. How many balls are left in a box ?



10. Subtract these.

1x2=2

$$\bigcirc 9 - \bigcirc 2 = \bigcirc$$

$$\begin{array}{|c|} \hline 17 \\ \hline \end{array} - \begin{array}{|c|} \hline 12 \\ \hline \end{array} = \begin{array}{|c|} \hline \\ \hline \end{array}$$

11. Borrow and Subtract.

2x2=4

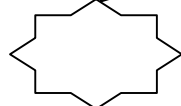
1	2
-	7

1	7
-	8

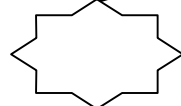
12. Add and Substract.

4x2=8

$$16 + 6 - 2$$



$$13 + 7 - 10$$



$$37 + 45 - 20$$



$$41 + 26 - 16$$



13. Write tens , ones and write the numbers they form.

$2 \times 2 = 4$

14. Count 51 to 100 silently and write missing numbers.

$1 \times 10 = 10$

51				55					
					66				
			74					79	
		83							
91									100

15. Solve the problems.

$6 \times 2 = 12$

48	54	36	29	85	55
- 20	+ 36	+ 40	- 17	+ 45	- 25
<input style="width: 50px; height: 30px;" type="text"/>	<input style="width: 50px; height: 30px;" type="text"/>	<input style="width: 50px; height: 30px;" type="text"/>	<input style="width: 50px; height: 30px;" type="text"/>	<input style="width: 50px; height: 30px;" type="text"/>	<input style="width: 50px; height: 30px;" type="text"/>

16. Circle the smaller number.

$1 \times 2 = 2$

982	892	225	522
------------	------------	------------	------------

17. Circle the bigger number.

$1 \times 2 = 2$

763	620	193	689
------------	------------	------------	------------

18. Write the smallest and biggest numbers and write.

$2 \times 2 = 4$

14, 41, 81, 4, 1, 78	→	<table border="1" style="display: inline-table; text-align: center;"><tr><td>Biggest</td></tr><tr><td> </td></tr></table>	Biggest		<table border="1" style="display: inline-table; text-align: center;"><tr><td>Smallest</td></tr><tr><td> </td></tr></table>	Smallest	
Biggest							
Smallest							
228, 421, 180, 999, 300	→	<table border="1" style="display: inline-table; text-align: center;"><tr><td> </td></tr><tr><td> </td></tr></table>			<table border="1" style="display: inline-table; text-align: center;"><tr><td> </td></tr><tr><td> </td></tr></table>		

