

	KENDRIYA VIDYALA SANGATHANS , CHENNAI REGION (MADURAI CLUSTER)		
	HALF YEARLY EXAMINATION -2017(MODEL PAPER)		
	SUBJECT: EVS		
	CLASS: III	SEC:	TIME: 2 1/2 HOURS
NAME OF THE STUDENT:			ROLL NO:
Invigilator's Sign:		Evaluator's sign:	
Maximum marks: 80		Marks obtained:	

### INSTRUCTIONS

PART-A each question carries 1 mark

PART-B each question carries 2 mark

PART-C each question carries 5 mark

### PART- A

#### I VERY SHORT ANSWER

a) OBSERVE THE PICTURE AND WRITE ABOUT IN ONE LINE

1.




---



---

2.




---



---

3.




---



---

4.



---

---

5.



---

---

**I b) FILL IN THE BLANKS**

6. A beautiful bird with blue green long feathers \_\_\_\_\_

7. Plants with thick or thin trunk are called \_\_\_\_\_

8. \_\_\_\_\_ is the solid form of water.

9. \_\_\_\_\_ is the fastest means of transport.

10. Rainbow is a band of \_\_\_\_\_ colours.

**I c) MATCH THE FOLLOWING**

11. People who cannot hear

Raw food

12. Sandwich

Flower

13. Colourful part of a plant

Aunt

14. Uncle's wife

Peacock

15. National Bird

Deaf

I d). Mark the following places in India Map

New Delhi    Tamil Nadu    kerala    Jammu Kashmir    Maharashtra



**PART-B**

**II ANSWER THE FOLLOWING**

21. Name four animals that live in trees

\_\_\_\_\_

\_\_\_\_\_

22. Where do you throw the garbage? Name any 2 household work you do in your home \_\_\_\_\_

---

23. Some places are shown below. Write the names of people who work there.

**Hospital**



.....

**School**



.....

**Police station**



.....

**Garden**



.....

24 .Match the two columns:

Milk

Chips

Curd

Bread

Potato

Ice cream

Wheat


Lassi

25. Why do we need house?

---

---

26. Identify the following animals. Write the food they eat.



---

---

---

---

---

---

27. How many sense organs do we have? What are they?

---

---

28. Observe the picture and write two lines about it.

---

---



---

29. Name any four methods of cooking.

---

---

30. Name any four fuels that we use.

---


---

31. When do people talk through actions?

---

---

32. Identify the bird and write about its beak.



.....

---

---

33. How do you store drinking water in your house ?

---

---

---

34. Name any four land transport

---

---

35. What are the Utensils made up of? Name the below utensils

---

---



---

---


---

---

**PART- C**

**III.ANSWER IN DETAIL**

36. Draw a rainbow and colour it.



37. Write three lines about “TEACHER” “ DOCTOR” and write what do you want to be in future

TEACHER

---

---

---

DOCTOR

---

---

---

What do you want to be in future

---

38. Classify the following animals as mammals , birds, insects, reptiles

Cow Parrot Elephant Housefly Lizard  
Snake butterfly

Mammals	Birds	Insects	Reptiles

38 a) Tick the correct answer

- a) Main Source of water is \_\_\_\_\_ ( Pond / Rain)
- b) We Should eat at \_\_\_\_\_ ( irregular /regular)interval of time
- c) Clouds\_\_\_\_\_ ( condense / evaporate) to give rains
- d) An example of liquid fuel is \_\_\_\_\_ (electricity/ kerosene)
- e) A house protects us from our \_\_\_\_\_ ( friends / heat)

39 ) Name the part of your house and its purpose

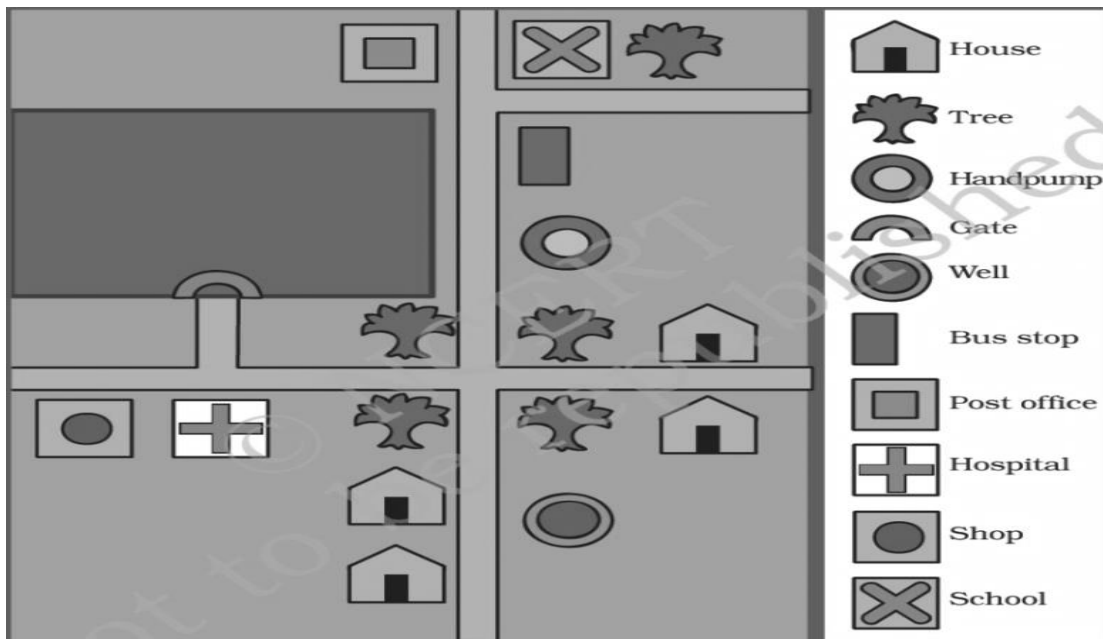
Part of your house	Purpose



40. Look at the picture and label its parts



41. Observe the pictures and answer the following questions.



- How many hand pumps are there in the map \_\_\_\_\_
- How many trees are there in the map \_\_\_\_\_
- What is near to the shop \_\_\_\_\_
- Is the bus stop closer to the school or to the hospital \_\_\_\_\_
- How many houses are there in the map ? \_\_\_\_\_