

HALF YEARLY-1 (2017-18)

CLASS: 3 SEC: _

SUBJECT :EVS

MAX TIME:3 HOURS

NAME: _____

ROLL NO.: _____

DATE:- _____


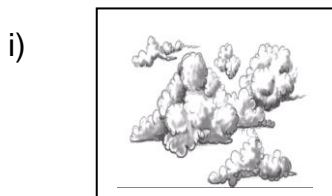

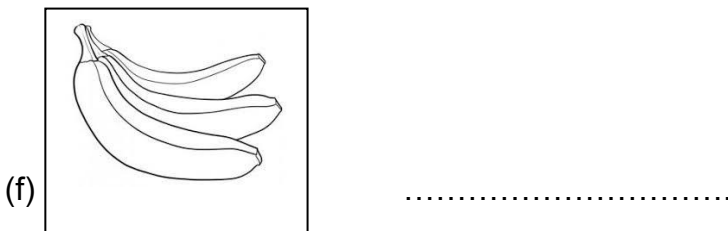

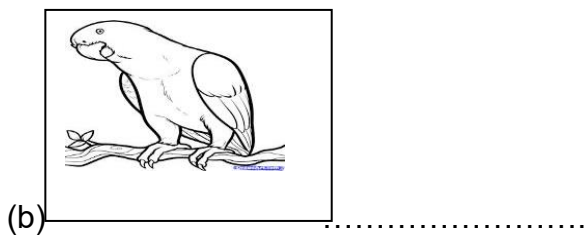
SIGN OF INVIGILATOR: _____

SIGN OF EXAMINOR: _____

| COMP | OBSERVATION | I & REP | DOF | TOTAL |
|-------|-------------|---------|-----|-------|
| GRADE | | | | |

OBSERVATION

Q.1. Observe the pictures given below and write their names. (1x 10=10)



Q.2. Observe given picture and answer the questions following :- (5X2=10)



(a) Name and work as :-.....
.....



(b) Name and use of it :-
.....

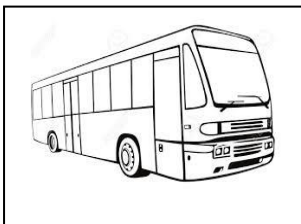


(c) Name and use of it :-.....
.....



(d) Name and advantage of this family:-.....
.....

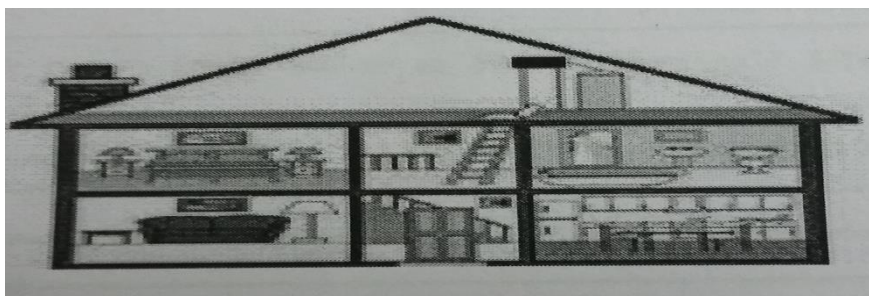
e)



Name and use of it:-.....
.....
.....

LONG ANSWERS (2X5=5)

Q.3 i) Observe the given picture and write down the uses of different part of the house:-



- (a) Bedroom.....
- (b) Bathroom.....
- (c) Drawing Room
-
- (d) Kitchen
- (e) Dining Room.....

ii) What do you do when clock shows:-



5 a.m.:- _____



7 a.m.:- _____



8 a.m.:- _____



4 p.m.:- _____



10 p.m.:- _____

IDENTIFICATION

Q.4 I) Circle the odd one .

(1X5=5)

- (a) Pond, River, Mountain, Sea.
- (b) Pigeon, Sparrow, Crow, Goat.
- (c) Washing, Reading, Bathing, Cleaning.
- (d) Jug, Mug, Glass, Pencil.
- (e) Eyes, Kidney, Nose, Ears.

II) Choose the correct option and fill in the blanks.

(wings, boil, plants,shurbs,grand gather, rain, waterfall

- a) The big plants are called _____.
- b) My father's father is my _____.
- c) Rice and vegetables are cooked by _____them in water.
- d) The main source of water is _____.

e) A bird's flies with the help of its

Q.5 A) match the following:-

(2X5=10)

Ans :

A
RABBIT
SNAKE

B
CRAWL
HOP
FLY

B) Match the followings:-

A
Mango tree
Palm tree

B
Thick trunk
Thin trunk

c) What do you called them:-

i) Sister's sister:-.....

ii) Brother's father :-.....

d) What is the difference between boiled food and fried food :-

.....
.....
.....
.....

e). What is the difference between these two sense organs:-

Eye:-

Ear:-.....

Q.6 **CLASSIFY** :-

(1X5=5)

Tomato, Rice, Onion, Potatoes, Radish,
Dal, Carrot, Cabbage, Chapatti, Poori

| Things that are eaten raw | Things that are Eaten cooked |
|---------------------------|------------------------------|
| | |

DISCOVERY OF FACTS

Q7) Answer the following question :-

- a) Write the name of any two parts of tree: _____ , _____
- b) Write the name of any two sources of water . _____
- c) Which is your first school?
- d) What did the used of bird beak ?
- e) How do people exchange their thoughts without speaking ?

a) Name four animals that can be seen on the land ?

Ans
.....

b) Name any four plants you have seen ?

Ans
.....

c) How did chhotu use the pipe ?

Ans
.....

d) How did Appu know that the banana trees needed water ?

.....
.....

e) Write the colours name of rainbow.

.....
.....
.....

Q.8. I) Write the different parts of Bird and there function.

(1X5=5)

Ans

- (a).....
.....
- (b).....
.....
- (c).....
.....
- (d).....
.....
- (e).....
.....

II) Write five uses of water. .

(1X5=5)

Ans

(a).....
.....

(b).....
.....

(c).....
.....

(d).....
.....

(e).....
.....

PREPARED BY : Mr. SHIRISH KUMAR