



KENDRIYA VIDYALAYA NO.1 SRINAGAR
Half Yearly Exam ---2017-18

Class:-IV
EVS

Section:-_____

Roll No.:-_____

Subject:-

Name of the Student:-_____

Date:-_____ Time:-3hours

Invigilator's signature:-_____ Parents' signature:-_____

Examiner's remarks with signature: _____

Competency	Observation & Reporting	Identification & Classification	Discovery of Facts	Total
V. Points	30	25	25	80
Grade				

Section –A (Observation & Reporting)

OBSERVATION (20)

Very short answer

Observe the given pictures and answer to the questions.



1. a) Whose picture can you see on this currency ?

b) Write the name of the Bank given on the currency?

2.



a) Name this tree: -----

b) Write any food item that we can make out of its fruits-----

3.



a) Write the name of this plant:-----

c) Name two products obtained from this plant.

4



a) Name the bird which is riding:-.....

b) Why do you think the bird is sitting on the buffalo?

5.




a) Name this means of transport:-

b) In which state can you see this means of transport?

Short answer

1. What type of Bridge would you prefer to cross?



2. a) The artist have drawn wrong years on the heads of the animals. Give the correct ears to the animals in the space given below:

Animal	Ear
Elephant	-----
Giraffe	-----
Mouse	-----
Dog	-----

3. Write four steps involved to grow crops

IDENTIFICATION
Very short answer

1



a) Identify the festival in this picture: ----- (1)

b) This festival is related to:----- (Hindus/Muslims/Christains)(1)



2.

a) Identify this helper in the Railway Station:- (1)

b) How did you identify him :- (1)



3.

a) Identify the picture(Railway Station/Bus Stop)-----(1)

b) What are the people doing there:- (2)

4.a) What food would you like to take with you when you travel? (2)


b)Name the place where you want to go: - (1)

5.a) What can be done to keep the toilets clean? (2)

b)What happens if you do not keep the toilets clean? (2)

6.a) Name two flowers blooming at night:- (2)

a) Draw any one flower. Name and color it. (4)




1.

a) Identify the Game: (2)

b) How many players are in this game? (2)

c) What does “out” mean in this game? (2)

d) Make a picture to show how Shyamala managed to get the entire opposition team out in one go (4)



SKILL

Very short answer (4)

Choose the correct answer from the bracket and fill in the blanks:

[snakes, herbs, pulley, beehive]

- I a) Very small plants are called -----
b) -----always swallow their food.
c) The house of the bees is called -----
d) A -----help the trolley to move across the rope.

Short answers

1. What is Family? (4)


2. Who were the members of Nimmi's family before the arrival of her baby sister? (2)

Q. Are special flowers used on certain occasions/festivals by your elders? Make a list of different occasions and the flowers used at each.

. (4)

Occasions/festivals	Name of flower

Q. Match the following: (5)



Q. find out in which states these languages are spoken: (5)

Language	where it is spoken (State)
i) Malyalam	-----
ii) Konkan	-----.
iii) Marathi	-----
iv) Gujrati	-----
V) Kannada	-----

Q. In the map of India locate the following: (5)

- i) Jammu and Kashmir
- ii) Maharashtra
- iii) Andhra Pradesh
- iv) Punjab
- v) Rajasthan

