

## Second Mid Term Evaluation

Social Science

Type A

Time : 1¼ hr.

Score : 40

KP  
Std. 10

Instructions :

- The first 7 minutes and cool - off time
- Read the instructions carefully and attempt the questions

**Answer 1 and 2 questions. Each carries 1 score**

(2 x 1 = 2)




1. Whos is the chairman of GST council?
  - a. Chief Minister
  - b. Prime Minister
  - c. Union Finance Minister
  - d. President
2. "Bharat Mata" is the painting of
  - a. Raja Ravivarma
  - b. Abanindranath Tagore
  - c. Amrita Sher-Gil
  - d. Nandalal Bose

**Answer any three questions from 3 to 6. Each carries 2 score. (3 x 2 = 6)**

3. Evaluate the circumstances that forced Gandhiji to suspend the non - co-operation movement
4. Differentiate between developmental expenditure and non - developmental expenditure.
5. Point out the information about the landscapes that can be obtained by analysing contour lines?
6. Complete the following suitably
  - i. a. Dinabandhu Mitra : Bengali
  - b. Allama Muhammed Iqbal : .....
  - ii. a. Rabindranath Tagore : Gitanjali
  - b. Benkim Chandra Chatterji : .....

**Answer any three questions from 7 to 10. Each carries 3 score. (3 x 3 = 9)**

7. What were the proposals of social reforms for the fundamental changes in Indian Society during the British Rule?
8. List out the results of early struggles of Gandhiji in India.
9. Identify the geographical features represented the given map symbols.

	Symbol	Colour
A		Blue
B		Brown
C		Red

**Type B****Answer 1 and 2 questions. Each carries 1 score****(2 x 1 = 2)**




1. Which is the earliest struggle conducted by Gandhiji in India.
  - a. Non - Cooperation movement
  - b. Peasant struggle in Kheda
  - c. Ahmedabad cotton mill strike
  - d. Champaran satyagraha
2. Which tax is imposed on the income or profit of companies
  - a. Personal Income tax
  - b. Cess
  - c. Corporate tax
  - d. Surcharge

**Answer any three questions from 3 to 6. Each carries 2 score. (3 x 2 = 6)**

3. What are the objective of Gandhiji in travelling across India with the Khilafat leaders to propagate ideas.
4. The bills obtained from shops are often marked with SGST and IGST. What does there represent?
5. Write any two uses of Topographic maps.
6. Name the reform movement founded by Swami Dayanand Saraswathi. What were his ideologies?

**Answer any three questions from 7 to 10. Each carries 3 score. (3 x 3 = 9)**

7. Point out the goals of fiscal policy.
8. Write any three social evils legally abolished by the British in India.
9. Identify the geographical features represented the given map symbols.

	Symbol	Colour
A		Blue
B		Brown
C		Red

10. What are the factors forced Gandhiji to select salt as a powerful weapon against the British?

**Answer any three questions from 11 to 14. Each carries 4 score. (3x 4 = 12)**

11. What were the proposals put forward by Mount Batten Plan?
12. Compare the physical features and cultural features in topographic maps.
13. What is meant by deficit budget. List out the major items of expenditure included in India's budget.