

Second Mid Term Evaluation

KP
Std. 10

Social Science
Type A

Time : 1¼ hr.
Score : 40

Instructions :

- The first 7 minutes and cool - off time
- Read the instructions carefully and attempt the questions

Answer 1 and 2 questions. Each carries 1 score

(2 x 1 = 2)




1. Whos is the chairman of GST council?
 - a. Chief Minister
 - b. Prime Minister
 - c. Union Finance Minister
 - d. President
2. "Bharat Mata" is the painting of
 - a. Raja Ravivarma
 - b. Abanindranath Tagore
 - c. Amrita Sher-Gil
 - d. Nandalal Bose

Answer any three questions from 3 to 6. Each carries 2 score. (3 x 2 = 6)

3. Evaluate the circumstances that forced Gandhiji to suspend the non - co-operation movement
4. Differentiate between developmental expenditure and non - developmental expenditure.
5. Point out the information about the landscapes that can be obtained by analysing contour lines?
6. Complete the following suitably
 - i. a. Dinabandhu Mitra : Bengali
 - b. Allama Muhammed Iqbal :
 - ii. a. Rabindranath Tagore : Gitanjali
 - b. Benkim Chandra Chatterji :

Answer any three questions from 7 to 10. Each carries 3 score. (3 x 3 = 9)

7. What were the proposals of social reforms for the fundamental changes in Indian Society during the British Rule?
8. List out the results of early struggles of Gandhiji in India.
9. Identify the geographical features represented the given map symbols.

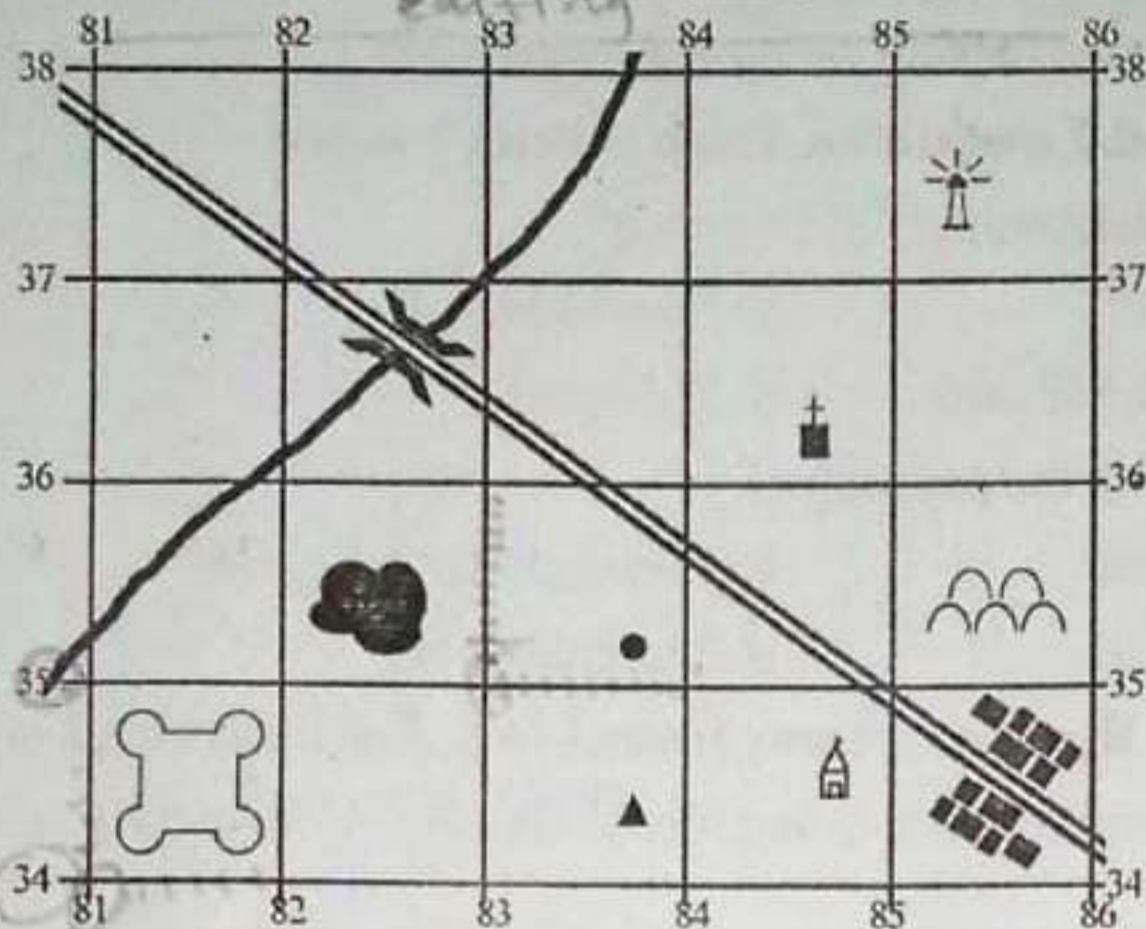
	Symbol	Colour
A		Blue
B		Brown
C		Red

10. Point out the goals of fiscal policy?

Answer any three questions from 11 to 14. Each carries 4 score. (3 x 4 = 12)

11. What is Mount Batten plan? Mention the proposals.

12. Answer the following questions by analysing the given model reference grids.



- Identify any one physical feature shown in the map.
- Identify any one cultural feature shown in the map.
- Locate the Fort using four figure grid reference.
- Locate the well using six figure grid reference method.

13. Distinguish between Direct tax and Indirect tax.

14. Arrange the items in column 'B' appropriate to column 'A'.

A	B
Swaraj Party	Subash Chandra Bose
Forward Bloc	Barender Kumar Gosh
Ghadar Party	C.R. Das
Anusheelan Samithi	Lala Hardayal

Answer any one question from 15 to 16. 5 score

(1 x 5 = 5)

15. What are topographical maps? List out the main uses of topographical maps.

16. Discuss the Goods and Services Tax. List out the circumstances of GST council.

Answer any one question from 17 to 18. 6 score

(1 x 6 = 6)

17. Explain Non - Cooperation movement based on the following hints.

Characteristics of Non - cooperation movement

Indian Society's response to Gandhiji's appeal

18. Discuss the role of national education in the emergence of Indian nationalism.

Type B

Answer 1 and 2 questions. Each carries 1 score

(2 x 1 = 2)




1. Which is the earliest struggle conducted by Gandhiji in India.
 - a. Non - Cooperation movement
 - b. Peasant struggle in Kheda
 - c. Ahmedabad cotton mill strike
 - d. Champaran satyagraha
2. Which tax is imposed on the income or profit of companies
 - a. Personal Income tax
 - b. Cess
 - c. Corporate tax
 - d. Surcharge

Answer any three questions from 3 to 6. Each carries 2 score. (3 x 2 = 6)

3. What are the objective of Gandhiji in travelling across India with the Khilafat leaders to propagate ideas.
4. The bills obtained from shops are often marked with SGST and IGST. What does there represent?
5. Write any two uses of Topographic maps.
6. Name the reform movement founded by Swami Dayanand Saraswathi. What were his ideologies?

Answer any three questions from 7 to 10. Each carries 3 score. (3 x 3 = 9)

7. Point out the goals of fiscal policy.
8. Write any three social evils legally abolished by the British in India.
9. Identify the geographical features represented the given map symbols.

	Symbol	Colour
A		Blue
B		Brown
C		Red

10. What are the factors forced Gandhiji to select salt as a powerful weapon against the British?

Answer any three questions from 11 to 14. Each carries 4 score. (3x 4 = 12)

11. What were the proposals put forward by Mount Batten Plan?
12. Compare the physical features and cultural features in topographic maps.
13. What is meant by deficit budget. List out the major items of expenditure included in India's budget.

14. Arrange the items in column 'B' appropriate to column 'A'.

A	B
Forward Bloc	Bareendra Kumar Gosh
Ghadar Party	C.R. Das
Anusheelan Samithi	Subash Chandra Bose
Swaraj Party	Lala Hardayal

Answer any one question from 15 to 16. 5 score

(1 x 5 = 5)

15. Explain the following questions related to Contour Lines

i. What are Contour lines?

ii. What is contour values?

iii. List out the three things that can be assessed from the contour lines in topographic maps.

16. Explain the features of Direct tax and Indirect tax

Answer any one question from 17 to 18. 6 score

(1 x 6 = 6)

17. Discuss the role played by newspapers in the emergence of Indian nationalism during national freedom struggle.

18. Explain the Non - cooperation movements based on the following hints.

- Characteristics of Non - Cooperation movement
- Indian Society's response to Gandhiji's appeal.