

SAMAGRA SHIKSHA KERALA
Second Terminal Evaluation 2022 - 23

Standard : III

MATHEMATICS

Time : 2 Hrs

Name of student.....

Name of school.....

Division.....

Signature of parent.....

Signature of teacher.....

Sl No.	Activities	Grade
1	Let's Play and Win	
2	Let's Find the Time	
3	Kalotsavam	
4	Arithmetics in Calendar	
5	Vegetable Garden	
6	School Annual Day	
Overall Grade		

Instructions

- First 15 minutes should be used for reading and comprehending the activities.
- Out of the six activities, answer any five.
- All the sub questions of the selected activities should be answered.

Activity - 1 Let's Play and Win

a) Neha and Adhil are playing with number cards. See the number cards with Neha and Adhil. Which card with Adhil is equal to the card that Neha has. Then, write them in the given boxes.

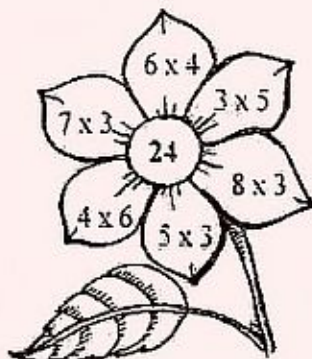


3×5	8×10	6×6	5×5	4×2

25	36	8	15	80
----	----	---	----	----



b) Colour the petals which have equal number that is given in the centre of the flower.

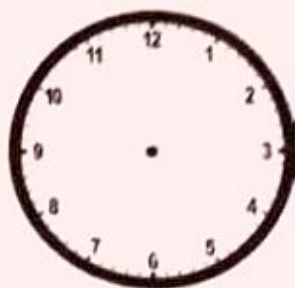


Activity - 2 Let's Find the Time

Anu is participating in the model making competition in the Maths fest.

The competition started at 9.30.

09:30



a) Draw hands in the clock for the time given in the box.

b) Looking at the clock, write the time when Anu completed the work.

.....




c) Find the time taken by Anu to complete her work.

..... hours minutes

d) If the competition started at 9.30 and ended after 3 hours, write the time when the competition ended.

.....

e) Draw the above time in the clock given.



Activity - 3 Kalotsavam

In Kalotsavam, Athira and her friends are participating in the dance competition. Athira and her mother went to a shop to buy things for their programme.



The bill for the things they bought are given below. Complete the bill looking at the price list displayed in the shop.


Fancy Store				
Bill.No: 478			Date : 29.10.2022	
Name : Athira				
Sl. No.	Item	No.	Price of one item(Rs)	Total (Rs)
1	Beads chain	7	4	28
2	Ear ring (Set)	5	6
3	Crown	2
4	Bangle	2
Total			

Activity - 4 Arithmetics in Calendar

a) Given below is a part of the calendar of November 2022. The date of the first Wednesday falls on 2nd November. Find the dates of other Wednesdays.

Sunday	Monday	Tuesday	Wednesday	Thursday	Friday	Saturday
•	•		2			
				•	•	•

b) A part of a calendar is given below. Write down the other dates.



c) The kalotsavam was conducted from 15 to 18 November 2022. How many days kalotsavam is conducted ?

Activity - 5 Vegetable Garden

Vegetable garden is set in school. Seeds were brought from the 'Krishi Bhavan'. The number of seeds in each packet is given in the picture. Find out and write down which type of seed is more in number?

Snakegourd



Number of packets

Number of seeds in
a packet

Total number of seeds

Pumpkin

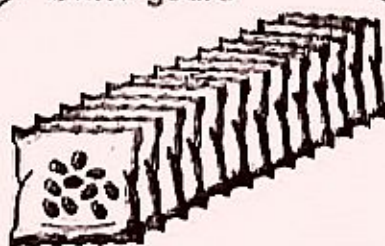


Number of packets

Number of seeds in
a packet

Total number of seeds

Bitter gourd

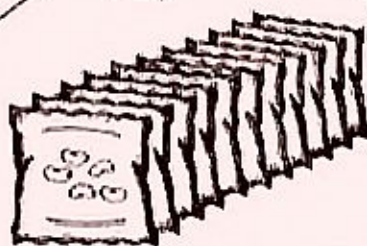


Number of packets

Number of seeds in
a packet

Total number of seeds

Pea



Number of packets


Number of seeds in
a packet

Total number of seeds

Which type of seed is more in number?

Activity - 6 School Annual Day

Students of Standard 3 are arranging chairs for the Annual Day Celebration.



Chairs are arranged in 5 rows. Each row has 6 chairs.

- a) How many chairs are arranged?

As the chairs are not sufficient for all the students, 4 more rows are arranged with 6 chairs each.

- b) How many new chairs are arranged?

- c) How many rows of chairs are there in total?

- d) Find the total number of chairs.