

Annual Evaluation 2022-23

HEALTH & PHYSICAL EDUCATION,
ART EDUCATION AND WORK EDUCATION

Class: VIII

Time : 2hrs

Score : 45

Instructions

- Question paper consists of 3 parts - Health and Physical Education, Art Education and Work Education.
- Each part carries 15 score.
- 15 minutes for cool off time and 2 hours for writing the answer can be taken together and the writing can be started from commencement of the exam itself.
- Answer of each part should be written in separate answer sheets
- Subject, Name, Class and Roll number, should be written in each answer sheet.

HEALTH AND PHYSICAL EDUCATION

Time : 40 mts.

Score : 15

Attempt any **FOUR** questions from 1 to 6. Each question carries 1 Score.

(4x1=4)

- 1) Which game is related to Ashes Trophy ?
a) Cricket b) Football c) Shuttle Badminton d) Tennis
- 2) In which category of Foot ball match FIFA uses Green Card ?
a) Under -19 b) Under -14 c) Under -17 d) Under -12
- 3) The National Sports Museum was established in memory of
a) Dhyan Chand b) Suresh Babu c) Milkha Singh d) Jimmy George
- 4) Identify the Olympic medalist.



- a) P R Sreejesh b) Neeraj Chopra c) Susheel Kumar d) Abhinav Bindra.
- 5) Which of the following is a positive change in the muscular system due to regular exercise?
a) Muscle Fatigue b) Decreases muscle efficiency
c) Increases muscle size d) Blood circulation decreases
- 6) Which Yogasana is performed in prone position ?
a) Paschimottanasana b) Naukasana
c) Ardha pavana mukthasana d) Makarasana

Attempt any **FOUR** questions from 7 to 12 .Each question carries 2 Scores.

(4x2=8)

- 7) Define joints? Classify them according to their movement characteristics.
- 8) What is the difference between Dislocation & Subluxation.
- 9) What is agility? Write two examples from games.
- 10) When does the referee show a green card during a Football game?
- 11) What are Akharas?
- 12) Write the activities of National Sports Talent Contest (NSTC).

Attempt any **ONE** question from 13 to 14.

(1x3=3)

- 13) What are the objectives of Sports Authority of India (SAI) ?
- 14) What are the etiquette that a player should follow in the play ground ?

ART EDUCATION

Time : 40 mts.

Score : 15

Attempt any **FOUR** questions from 1 to 6. Each question carries 1 Score.

(4x1=4)

- 1) Name the artist who best picturised nature and environment in Kerala.
a) Rajan M. Krishnan b) Athul Dodiya
c) Arpana Caur d) Subodha Guptha

- 2) Identify the western musical instrument given below



a.



b.



c.



d.

- 3) The pallava sculpture village which consists cave temples and monolithic shrines
a) Ajantha b) Elephanta
c) Harappa d) Mahabalipuram
- 4) The object which is connected with cameras to capture clear images of the far away and nearby objects.



a) Tripode



b) Lens



c) Memory Card



d) Battery

- 5) The term Angika denotes:
- a) Acting by body b) Acting by voice
c) Acting by properties d) Acting by costumes
- 6) Name the kathakali artist who plays 'Ilathalam' in Kathakali Sangeetham.
- a) Kathikan b) Vidooshakan
c) Sinkidi d) Prasangikan

Questions 7 to 11. Answer any TWO of the following. Each carries 2 Score. (2x3=6)

- 7) Match the following.


a) Kalamandalam Hyderali	Hindusthani Music
b) Zakkir Huzzain	Kathakali Music
c) Bhimsen Joshy	Tabla

- 8) Draw pictures for the description below. (Use separate paper)


“Child taking care of garden”



Faded plant in a pot



A child watering the plant



Child becomes happy on seeing the beautiful flower on the plant

- 9) Name the Karnatic Musical instruments from the following pictures.



a.



b.



c.

- 10) Complete the list of Navarasas.

a) Sringaram b) c) Karunam d) Raudram
e) f) Bhayanakam g) Beebhatsam h) i) Santham

11) Name the puppets from the following puppetry images.



a.



b.




c.


Questions 12 to 14, Answer any ONE of the following.

(1x5=5)


- 12) Prepare the poster for a "Flower Festival" organised in your locality. Draw, colour and complete the poster with appropriate picture and typography. (Use separate paper for drawing)
- 13) Write a short note on any one of the following:
a) Mappilapattu b) Pulluvanpattu c) Kathakali Music
- 14) "A pencil in a pen stand and writing board clipped with white paper are on a table. There enters a rat to eat the pencil. Pencil runs towards the white paper clipped board to escape. Pencil draws the picture of a cat on the white paper and shows it to the rat and rat runs away."- Based on this story context, prepare a storyboard to feature it as a cartoon film.




There is a clip board, a pen-stand and a pencil on the table



The pencil approaches the paper, the rat pursues it.



A rat approaches the table and the pencil starts running



The pencil shows the picture of cat to the rat. Frightened, and runs away

Questions 1 to 4 : Answer any THREE of the following (Each carries 1 Score) (3x1=3)


- 1) As a part of ' **Haritha Kerala Mission** ' for vegetable cultivation in schools irrigation method adopted to solve the water shortage is
(a) Drip irrigation (b) The method of scooping water (c) Pumping method (d) Rain pit
- 2) Which nutrient is present in small grains (millets)
(a) Vitamin K (b) Fibre (c) Vitamin D (d) Vitamin C
- 3) Which among the following pictures is the most appropriate way to prevent the transmission of diseases ?



(a)



(b)



(c)

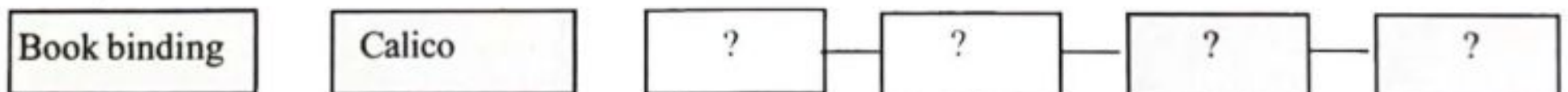


(d)

- 4) Which is the decorative stitch used to stitch the petals of large flowers
(A) Stem stitch (B) Feather stitch (C) Scalloping (D) Long and short stitch

Questions 5 to 9 : Answer any FOUR of the following (Each carries 2 Scores) (4x2=8)

- 5) Complete the flowchart.



- 6) What is organic manure? Write any two of them.

- 7) Match the following.

A	B
a) Coconut shell products	Chlorination
b) Drinking water	Biopesticides
c) Violet	Hacksaw blade
d) Tobacco emulsion	Secondary colour

- 8) Explain the method to make flexi file using grayboard or duplex board.
- 9) Write any four differences between fabric painting and vegetable printing.

Questions 10 to 11 Answer any ONE of the following : (1x4=4)

- 10) Explain the method of making a badge that you have done for the Republic Day.
- 11) Prepare a poster on sand mining, reclamation of paddy fields and destruction of hills.