

Annual Evaluation 2017-18

Art, Work, Health and Physical Education

STD : V

Time: 2 Hours

General Instructions

1. The first 15 minutes before the commencement of the evaluation is the cool-off time. This time shall be used to read the questions.
2. Answer all the questions in the two sections viz. Work Education, Health and Physical Education.
3. Select any one area from Art Education section and answer the questions in that area only.
4. Questions are given in three parts. Answer each part in separate answer sheets. Don't forget to write the name of the subject, your name, standard and roll number in each answer sheet.
5. Two hours time is allotted for the three parts. You can use a maximum of 40 minutes for each part.

Art Education

Area - Drawing

Question 1

There is a plant in Akhila's house which has full of flowers. Each flower has different colour. Draw the plant in Akhila's house.

You may give green colour for the leaves. Colour the flowers with primary colours and make them attractive. Try to draw a big plant.

Question 2

Identify the 3D picture from the pictures given below and draw that picture.



Question 3

Which of the following is a software that helps to draw pictures in computers?

(Wall picture drawing, GIMP, Animation, Line drawing)

Area - Music

Question 1

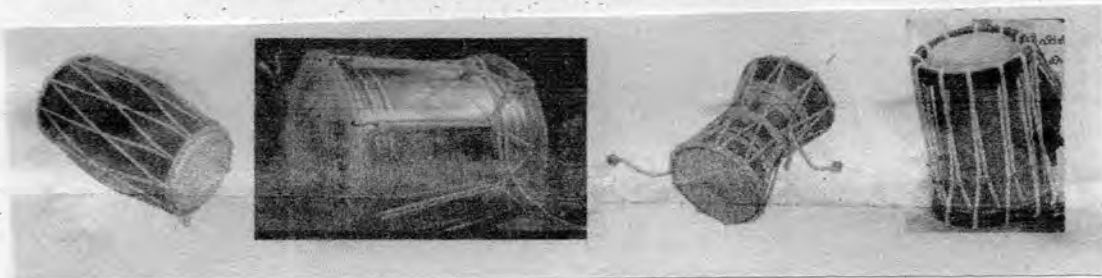
- Who wrote the national song 'Vande mataram'?
[Rabindranath Tagore, Gopalakrishna Gokhale, Bankim Chandra Chatterjee, Ram Singh Thakur]
- Name the playback singer known as 'Ganagandharvan'?
[P Unnikrishnan, G Venugopal, Dr K J Yesudas, Unnimeenon]
- The musical instruments that pass air through it to make sound is known by the name -
[Wind instruments, String instruments, Membranophone (Thukalvadyam), Metallophone] (1 x 3)

Answer the following

Question 2. Write the full form of the sound 'Pa' in Saptaswara? (1 x 1)

Question 3. Saptaswara can be sung from a low pitch to a high pitch. What is this mode of singing known? (1 x 1)

Question 4. Identify the musical instruments of Kerala from those given below:



(1x 2)

Question 5. Write three vaytharis of different rhythm. (1 x 3)

Question 6. Sneha remembered some songs of the same rhythm and style when she heard Preetha teacher singing the song 'Omanathingal kidao' in the Malayalam class. Write any five songs in the rhythm and tune of lullabies that you are familiar with.

(You may write 5 songs of the same tune and rhythm. Film, Drama or Light music songs can be included.) (5 x 1)

Area - Dance

Question 1

- Choreography might have been performed in your school in connection with the classroom activities or Day celebrations. Write two scoring indicators to evaluate Choreography.
- In dance performances, ideas are communicated using the fingers. What is this called?
- In which dance form is Kalamandalam Krishnan Nair famous?

Question 2.

Look at the table below. Match them suitably.

a. Kerala	-	Odyssey
b. Odisha	-	Bharatanatyam
c. Tamil Nadu	-	Kathakali
d. Andhra Pradesh	-	Manipuri
e. Manipur	-	Kuchupudi

Question 3.

Classify the following dance forms as classical dance forms and folk dance forms.

(Bharatanatyam, Margamkali, Thiruvathirakali, Mohiniyattam, Dhaffmuttu, Kathakali)

Area - Drama

Activity 1

Prepare a story board to present a play based on the proverb 'Waste not, Want not' ['Sookshichal Dhukkikenda']. (Place, Time, Settings, Properties on stage, etc. should be mentioned) You need not write dialogues. (Score - 5)

Activity 2

Prepare an appreciation on a play that you have seen or read. (Score - 5)

Activity 3

Moovandan Mango tree is on my way to school. There was a nest on its branch. The mother bird was brooding on its nest to hatch the eggs; three shiny eggs. They were blue like the sky. Suddenly a strong wind blew. The nest fell down. The mother bird flew around and cried. The father bird who had gone in search of food came back to the mother bird.

Write the conversation between the mother bird and the father bird.

Work Education

1. One of the following items is not used to preserve food materials. Which is it?
(honey, sugar, salt, milk)
2. Wells are chlorinated during night.
(True, False)
3. Match the following suitably.

a. Wall hanger	-	Binding needle
b. Book	-	Chikun gunya
c. Salad	-	Disposable paper glass
d. Mosquito	-	Curd
4. List down the materials needed for making flowers using crepe paper.

5. List down the medicinal plants that can be planted in the school or in house yards.
6. What precautions should be taken while doing fabric painting on a pillow cover?

Questions 7 to 8 - Answer any one only.

7. Write the work diary of making a paper boat using a piece of paper.
8. Complete the table by putting a (×, ✓) mark on the parts of a plant that are eatable and non-eatable. One is done for you.

SI No.	Name	Leaf	Stem	Flower	Fruit
A	Muringa	✓	×	✓	✓
B					
C					
D					
E					
F					
G					

Health and Physical Education

Questions 1 to 4 - Choose the correct answer from the brackets. (4 x 1)

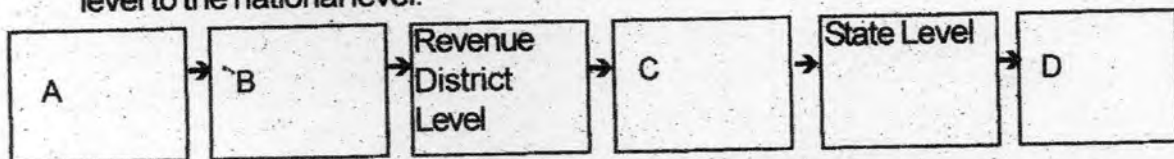
1. When engaging in physical activities, the body temperature and heart beat
(decreases, increases, no change, none of these)
2. Name the instrument used to measure height scientifically?
(Thermometer, Barometer, Stadiometer, Anemometer)
3. The physical fitness test for testing the flexibility of the body.
(sit-ups, sit and reach, modified pull up, one mile race)

4. The Indian who won 4 medals in the World Dwarf Games held in America in 2013.
(Tom Joseph, Joby Mathew, P T Usha, Kishore Kumar)

Questions 5 to 9. Answer any four of the following.

(4x2=8)

5. What do you mean by Agility?
6. Draw the flow chart of the Games competitions for school children from school level to the national level.




7. What do you mean by 'bruise'? What are its symptoms?
8. What does each letter in the acronym 'RICE' in first aid mean?
9. What are the advantages an individual gets while engaging in physical activities?

Questions 10 to 11. Answer any one of the following questions.

(1x3=3)

10. What are the characteristics of a safe playground?
11. Examine the pictures carefully and fill in the details related to them.



Pic 1



Pic 2

- | | |
|---|---|
| a. Name of the object | a. Name of the object |
| b. Name of the game | b. Name of the game |
| c. Material with which it is made | c. Material with which it is made |