

Savithrikkutty



$$20 + 5 = \dots\dots$$



Jumana







$$\dots\dots + 3 = \dots\dots$$

Who made more?

How many more?

2. How many appams did they make together?

Name	Tens	Ones	Total
Savithrikkutty	 <input type="text"/>	 <input type="text"/>	$20 + 5 = 25$
Jumana	 <input type="text"/>	 <input type="text"/>	<input type="text"/>
Total	<input type="text"/>	<input type="text"/>	<input type="text"/>

Savithrikkutty

$$20 + 5 = 25$$

Jumana

$$\dots\dots + \dots\dots =$$



Total

$$\dots\dots + \dots\dots = \dots\dots$$



3. Mischief Maker

Look, the Mud appams that Savithrikkutty and Jumana made together.



Total Mud appams?

$$\dots\dots + \dots\dots = \dots\dots$$

Kunjunni crumbed 8 Mud appams
How many are left?

$$\dots\dots - \dots\dots = \dots\dots$$

4. Let's play and win

Price list of Prizes..

Prizes	Price
Earring	23 rupees
Bangle	23 rupees
Chain	25rupees
Bindi	22rupees
Ring	23rupees
Toy	22rupees
Doll	23rupees
Play phone	24rupees



Look, how many gift and it's price each team got in the first round..

**Bangles
Dolls**

Savithrikkutty
Jumana

Price of bangle-24 rupees

Price of doll-23 rupees

Price of bangles



Price of doll



Total

$40+7=47$

Laila
Thanu

**Play phone
toys**

Price of play phone-24 rupees

Price of toy-22 rupees

Price of play phone



Price of toy



Total

$....+....=...$

What is the total price of gift that Savithrikkutty and Jumana got?

$..... + =$

What is the total price of gift that Laila and Thanu got?

$..... + =$

Which team scored more points in First round?



Look, how many gift and it's price each team got in the second round.

Ring
Bindi

Savithrikkutty
Jumana

Price of Ring-..... rupees

Price of Bindi-rupees

Price of Ring



Price of Bindi



Total+.....=....rupees

Laila
Thanu

Chain
Earring

Price of Chain-..... rupees

Price of Earring-....rupees

Price of Chain



Price of Earring



Total+.....=...rupees

What is the total price of gift that Savithrikkutty and Jumana got?

..... + =

What is the total price of gift that Laila and Thanu got?

..... + =

Which team scored more points in Second round?



5. Let's do Textbook activities.

How many shells?

Savithrikkutty and Ayisha brought coconut shells for playing.



How many shells did they together bring?

Mud appams

They made mud appams with the coconut shells. Each trying to make more.



Savithrikkutty made 21

And Ayisha 16

Who made more?

How many more?

How many appams did they make together?

Mischief maker

Kunjunni mischievously ran over their mud appams. 7 of them were crumbed.


How many are left?

Veluchettan's house

See the bricks to build veluchettan's house.

There are two stacks.

How many in each?



Total