



State Assessment Cell

STATE ACHIEVEMENT TEST

GRADE

6

Medium of Instruction ENGLISH

Booklet Set 66

TO BE FILLED IN BY FIELD INVESTIGATOR (FI)

UDISE School Code

--	--	--	--	--	--	--	--	--	--	--	--	--	--	--	--	--	--	--	--	--

Student Name

Student ID

School Name

Block Name

District Name

State Name

Area Code

1 Rural 2 Urban

Type of School

1 Boys 2 Girls 3 Co-educational

School Shift

1 Morning 2 Evening 3 Day Shift

School Category

01 - Grade 1 to 4/5 02 - Grade 1 to 8 03 - Grade 5/6 to 8

04 - Grade 1 to 10 05 - Grade 6 to 10 06 - Grade 9 & 10

07 - Grade 1 to 12 08 - Grade 6 to 12 09 - Grade 9 to 12

Whether pre-primary section (other than

Anganwadi) attached to school? (Yes = 1, No = 2)

Student Gender

1 Boy

2 Girl

3 Transgender

Social Group

1 SC

2 ST

3 OBC

4 General

5 EWS

CWSN

1 LD

2 VI

3 HI

4 S&LD

5 ID

6 OthD

7 Multiple

Management of the school

01 - Department of Education

02 - Tribal Welfare Department

03 - Local Body

04 - Government Aided

05 - Private Unaided (Recognized)

06 - Other State Govt. Managed

07 - Partially Govt. Aided

08 - Unrecognized

09 - Ministry Affairs Dept.

90 - Social Welfare Dept.

91 - Ministry of Labour

92 - Kendriya Vidyalaya

93 - Jawahar Navodaya Vidyalaya

94 - Sainik School

95 - Railway School

96 - Central Tibetan School

97 - Madrasa Private Unaided (Recognized)

98 - Madrasa Unrecognized

99 - Madrasa Aided (Recognized)

101 - Other Central Govt./PSU School

Number of sections by class (if the class is stand alone, has no section then enter 1):

Classes	Pre-Primary	I	II	III	IV	V	VI	VII	VIII	IX	X
Number of Sections											

© Assessment Cell Kerala 2024

---

## Practice Question 66 - Class 6

---

**Read the following passage and answer the questions that follow.**

A group of friends decided to go on a trip to the forest. They packed their bags with all the essentials: food, water and sleeping bags. As they arrived the deep forest, they were greeted by the sound of birds chirping and the gentle rustle of leaves in the wind. They quickly set up their tents and lighted a fire in a suitable space.

As the night fell, the sky was filled with countless stars. The friends sat around the fire telling stories. Suddenly, they heard a rustling sound from behind the bushes. Everyone froze in fear. "What could be hiding in the darkness," they thought. Then, to their surprise, a small deer stepped out near their tent. It looked at the group for a moment and quietly walked away into the woods.

The friends breathed a sigh of relief. "How scared we are!", they laughed and laughed. They enjoyed their night under the stars and felt thankful for the beauty of nature.

- What did the friends do first when they arrived at the forest?
  - Climbed a hill
  - Set up their tents
  - Told stories
  - Went to sleep
- Find the statement that is NOT true regarding the story?
  - Heard the rustling sound of leaves.
  - The sky was filled with countless stars.
  - The friends sat around the fire telling stories.
  - The deer scared them.
- Which among the following statements is true?
  - The friends ran away when they heard the rustling sound from the bushes.
  - They searched in the bushes for the source of the sound.
  - They ignored the sound.
  - They froze in fear on hearing the sound.
- Why did the friends sigh in relief?
  - A small deer came out of the bush.
  - A lion came out of the bush.
  - A rustling sound was heard from the bush.
  - They heard the chirping of birds.
- At the end of the story, how did the friends feel when they enjoyed the beauty of nature?
  - Sad
  - Angry
  - Grateful
  - Tired

6. Mini was standing on a football ground looking towards west. She then turned left and walked 5 metres. Then she walked 3 metres to the right. Which direction is she looking at now?

- A. East                      B. West                      C. South                      D. North

7. What is the area of this square?



- A. 20.25 square centimetre                      B. 2.025 square centimetre  
C. 20.25 centimetre                      D. 18 centimetre

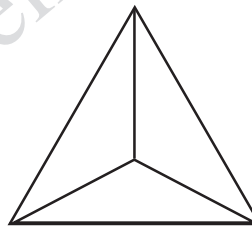
8. Which of the following is a cylinder?



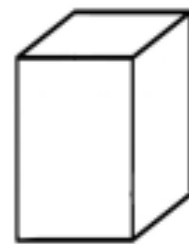
A



B

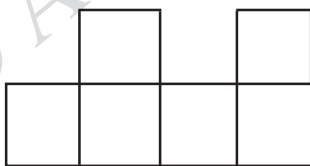


C

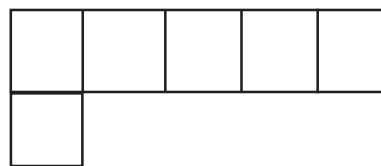


D

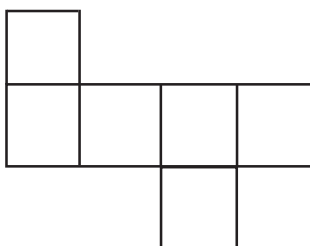
9. Which of the following shapes can be folded to make a closed box?




A



B

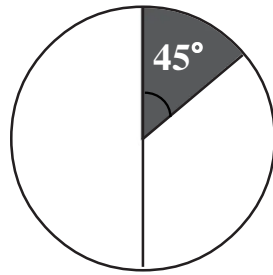


C



D

10. What part of the circle is shaded?



- A.  $\frac{1}{9}$       B.  $\frac{1}{8}$       C.  $\frac{1}{4}$       D.  $\frac{1}{12}$
11. The overuse of chemical pesticides **indirectly** affects some kind of birds and may become a reason for their decline. How?
- A. By eating fruits contaminated with pesticides  
B. Because the availability of food is getting reduced.  
C. By breathing the air contaminated with pesticides.  
D. By bathing in the water contaminated with pesticides
12. Potato and tapioca were sowed in the soil. A sapling sprout out from potato. But the tapioca did not sprout. Which among the following may be the reason for this.
- A. Tapioca is a root and there are no buds on it.  
Potato is an underground stem and there are buds on it.  
B. Tapioca is an underground stem. There are no buds on it.  
Potato is a storage root. There are buds on it.  
C. Both Tapioca and Potato are underground stems and buds are seen on both of them.  
D. Tapioca is an underground stem and there are buds on them.  
Potato is a storage root and there are no buds on them.
13. The natural pollinator of the vanilla plant is a species of bee. This species of bees are not seen in our locality. Then which of the following means of pollination we follow in vanilla cultivation in our locality?
- A. By wind    B. By birds    C. Through rainwater    D. With human assistance
14. Some worm like organisms were seen in the waste water pit near the kitchen. They were large in number and could move quickly. Identify the organism from the following?
- A. Caterpillar      B. Wiggler      C. Nymph      D. Tadpole
15. You notice an old dead tree beside a public road. Pick out the most appropriate action you will take from the following.
- A. You will inform the Local Government.  
B. You will inform the Woodcutters .  
C. You will fix a warning board near the tree.  
D. You will seek the help of people.

16. Find out the festival that is not related to agriculture.
- A. Pongal                      B. Deepawali              C. Holi                      D. Bihu
17. As a part of the study tour, a group of children decided to go for boating. Select the correct pair of things that need to be kept in the boat.
- A. Food                      -              Drinking water
- B. Food                      -              First Aid Kit
- C. Drinking water              -              First Aid Kit
- D. Life Jacket                      -              First Aid Kit
18. Pick out the correct statements related to energy conservation.
- i. Use electrical equipment only when needed.
- ii. Make more use of non-conventional energy sources.
- iii. Build more Thermal power stations.
- iv. Make use of more fossil fuels.
- A. i and ii                      B. i and iii                      C. i and iv                      D. ii and iv
19. You are getting down from a bus. You want to cross the road. Which way will you follow?
- A. Crossing the road from behind the bus.
- B. Cross the road carelessly.
- C. Cross from in front of the bus so the driver can see you.
- D. Cross the road after bus passes, ensuring there is no traffic.

20. Observe the map and pick out northern most state from the following.  
 A. Punjab B. Himachal Pradesh C. Arunachal Pradesh D. Sikkim



---

Space for Rough Work

---

© Assessment Cell Kerala 2024