

SECOND TERM EVALUATION 2022-23
HEALTH AND PHYSICAL EDUCATION,
ART EDUCATION, WORK EDUCATION

Standard - IX

Time: 2 hours

Total Score: 45

General Instructions

- The question paper has three sections: Health and Physical education, Art Education and Work Education
- Each section carries 15 marks. 15 minutes out of the 2 hours for the written test is the cool-off time.
- Answers to all three sections should be written on separate papers. Subject, Name, Class and Roll number should be entered in all of these papers.

HEALTH AND PHYSICAL EDUCATION

Time: 40 minutes

Total Score: 15

Questions 1 to 6. Answer any four. 1 score for each correct answer. (4 x 1 = 4)

1. 'Sluggish' is associated with which sport ?
(Cricket, Softball, Tennis, Volleyball)
2. asana resembles the position of a rabbit?
(Shashangasana, Makarasana, Bhujangasana, Naukasana)
3. Which game is associated with the equipment given in the picture ?
(Tennis, Baseball, Table tennis, Hockey)
4. Which of the following ray causes Sunstroke?
(Beta rays, Infrared rays, Gamma rays, Ultraviolet rays.)
5. Which breathing exercise helps to control the mind?
(Walking, Pranayama, Zumba Dance, Aerobics)
6. The French open tennis match is held on which surface?
(Lawn Court, Synthetic Court, Clay Court, Sand Court)



Questions 7 to 12. Answer any four. 2 scores for each correct answer. (4 x 2 = 8)

7. What is Malnutrition?
8. Write the names of International Tennis matches?
9. Name any four folk games popular in your area.
10. Write any four words/terms related to the game Softball.

11. What is Surplus energy?
12. Write the health problems caused by over eating of Junk foods?

Questions 13 and 14. Answer any one. 3 scores for each correct answer. (1 × 3 = 3)

13. What is Sunburn? Write down the remedies.
14. Describe the various stages of Anuloma Viloma Pranayama?

Art Education

Time: 40 minutes
Total Score: 15

Questions 1 to 6. Answer any four. 1 score for each correct answer. (4 × 1 = 4)

1. Name the style of painting that Pablo Picasso developed with Georges Braque.
(Cubism, Expressionism, Impressionism, Dadaism)
2. Identify the musical instrument made of clay shown in the figure, known as upapakkavadya used in a concert.



(Ilatalam, Tabala, Ghatam, Mridangam)

3. What is the ultimate goal of drama according to Natyashastra?
(Kavyanubhuti, Rasanubhuti, Shabadanubhuti, Divyanubhuti)
4. What is the name of the technology used for sound mixing in films?
(Video Editing, Cinematography, Sound Engineering, Directing)
5. What is the name of Kalagram established by famous painter KCS Panicker in Tamil Nadu?
(Lalitakala Academy, Cholamandalam, Chitrakala Parishad, Kalamandalam)
6. Find and write the sruti vadya from the following.
(Flute, Guitar, Tamburu, Violin)

Questions 7 to 11. Answer any two. 3 scores for each correct answer. (3 × 2 = 6)

7. What is Natyabhinayam? Explain.

8. Write any 3 percussion instruments from the following.
(Chenda, Violin, Tabla, Veena, Idakka)

9.




Image from Chittaprasad's Famine period film

Observe and understand the characteristics of Chittaprasad's picture given above.
Draw the scene of a street life from your imagination.

Complete with appropriate colors. (Use separate paper for drawing)

10. Write the names of chaturvidha abhinaya
Angikam, -----, -----, -----, -----

11. Identify and write the following musical instruments .



Questions 12 to 14. Answer any one. 5 scores for each correct answer. (1 x 5 = 5)

12. "The boy who goes to school by the roadside. The boy walks to school after giving food in his bag to a street dog lying hungry on the side of the road."

1. Prepare a script suitable for the occasion.
2. Prepare the story board based on the script.

13. You see the nature around the school every day. You see various scenes on the way to school from home. Combine the two natural scenes and prepare a painting. Complete the picture by adding colors of your choice.

(Use separate paper to draw the picture)

14. Identify the musical form given in the picture and write the names of the instruments involved in it.

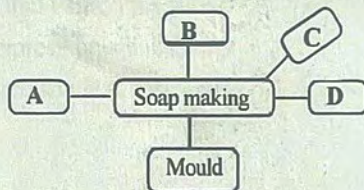


Questions 1 to 4. Answer any three. 1 score for each correct answer. (3 x 1 = 3)

1. In which of the following is caustic soda dissolved in the manufacturing of soap? (in water, in coconut oil, in kerosene, in gingerly oil)
2. What is the abbreviation of 'Earth leakage circuit breaker'? (MCB, LED, ELCB, CCL)
3. A chemical used to give colour to coir products. (Fabric Paint, Rhodamine, Enamel Paint, Water Colour)
4. Which category do the colours Orange, Violet and Green belong to? (Primary Colours, Tertiary Colours, Contour Colours, Secondary Colours)

Questions 5 to 9. Answer any four. 2 scores for each correct answer. (4 x 2 = 8)


5. Complete the Word Web.



6. Name any four fabrics used for making clothes.
7. Match suitably.

Silk	Fur cloth
Stuffed Toys	Silkworm
Printing	Nails
Thread pattern	Stencil

8. Identify and name the following pictures.



9. Name any 4 tools and materials required for electrical wiring.

Questions 10 to 11. Answer any one. 4 scores for each correct answer. (1 x 4 = 4)

10. Name any 2 methods of book binding. Describe a method of book binding?

OR

11. What are the different methods that can be adopted to bring the concept of "Drug Free Kerala" to society? Elaborate any one of them.