

Social Science**Std: 5****Time: 2 Hrs****Instructions**

1. 15 minutes cool-off time is to be allotted for reading and understanding the activities.
2. Answer any **FIVE** activities from the given **SEVEN** activities.
3. Answer all the sub questions of the selected activities.

Activity 1

Observe the various jobs given in the pictures.

- A) Is employment the only source of income for a family? Write a short note expressing your opinion.
- B) List the reasons for the various economic inequalities that exist in society.

Activity 2

- A) Complete the worksheet related to planets and their characteristics.

Name of the Planet	Characteristics
Mars	a)
b)	The second largest planet.
Uranus	c)
d)	Known as the morning star and the evening star.

- B) Which of the following statements is correct?

- a) The Sun is a star.
- b) All planets have satellites.
- c) Planets are self illuminating.
- d) All planets rotate from west to east.

Activity 3

- A) Read the following statements related to rotation and revolution of the Earth. Classify and complete the table given below.

The Earth rotates on its imaginary axis.	It revolves round the Sun in a fixed orbit.
Completes one revolution in $365\frac{1}{4}$ days	It takes 23 hours 56 minutes and 4 seconds to complete one rotation.
Seasons occur	The Sun appears to rise in the east and set in the west.

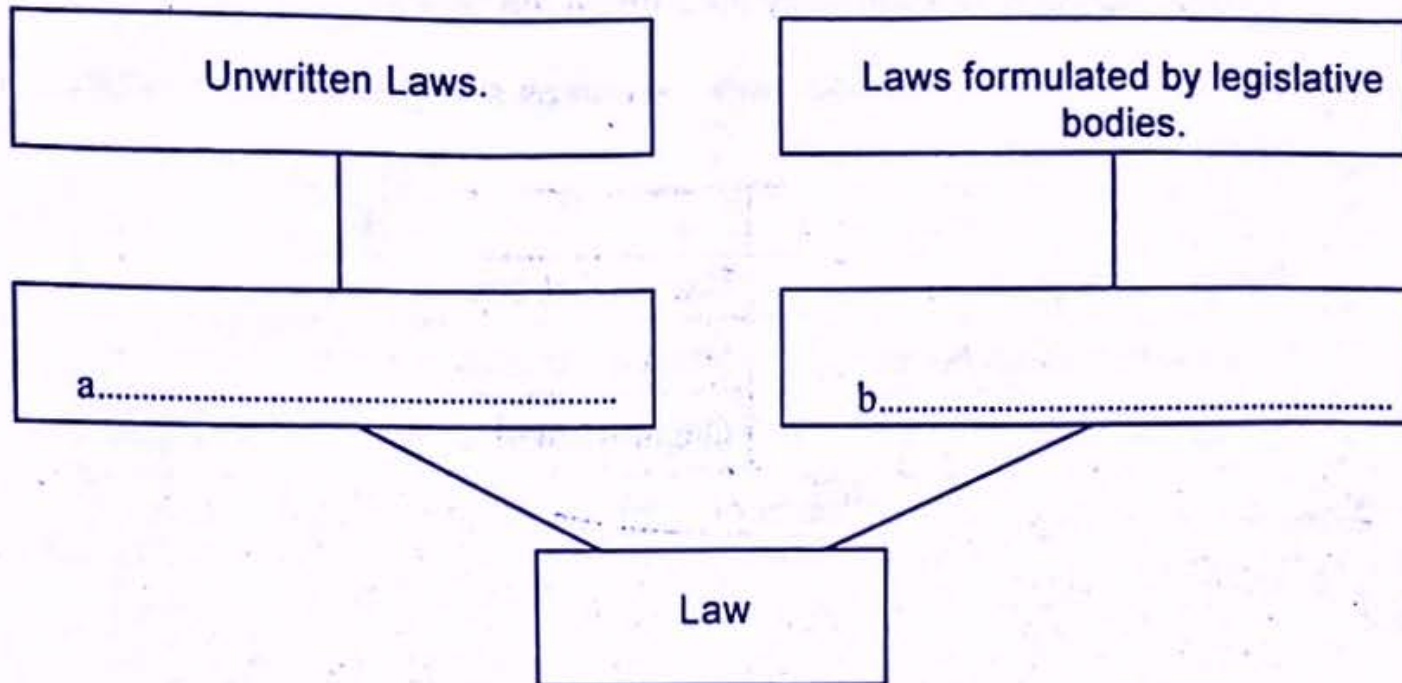
Rotation	Revolution
The Earth rotates on its imaginary axis.	Seasons occur
●	●
●	●

- B) A child living in Kerala watches at night the live telecast of the Copa America match taking place in New York, USA during the day. Which movement of the Earth is the reason for this?

Activity 4

Law is the accepted set of rules and regulations laid down for the existence and smooth functioning of society.

A) Complete the diagram related to Laws.



B) Write any two rules/guidelines that children must follow for the smooth functioning of the school.

C) Which law is related to children's rights?

a) Child Rights Act.

c) Traffic Laws.

b) Right to Information Act.

d) Wetland Conservation Act.

Activity 5

Food is the basic right of every human being. There are thousands of people in many parts of the world who do not get a single meal to sustain life.

A) Which day is observed as World Food Day?

a) October 16

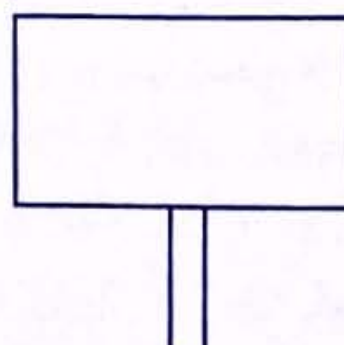
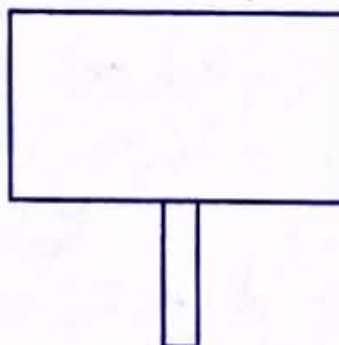
c) September 16

b) June 12

d) May 28

B) Write a note on the reasons for poverty and starvation.

C) Prepare placards for the rally to be organised in school in connection with World Food Day.



Activity 6

- A Which of the following statement about rivers is correct?
- Most of the rivers in Kerala flow from west to east.
 - Rivers in Kerala originate from the highlands.
 - Most of the rivers in Kerala flow into the Bay of Bengal.
 - Rivers in Kerala flow abundantly throughout the year.
- B) Government schemes to protect water resources and ensure fresh water supply are given below. Arrange them suitably.

A	B
Ini Njan Ozhukatte	Central Government
Thelineerozhukum Navakeralam	Haritha Kerala Mission
Jal Jeevan Mission	Department of Local Self Government

- C) Write a method to prevent pollution of water resources.

Activity 7

A safe and secure childhood is the right of every child. There are several laws and systems in place to protect child rights.

- A) List the main ideas necessary to prepare a wall magazine in the class on child rights.

-
-
-
-

- B) Which day is observed as Anti Child Labour Day?

- November 20
- November 14
- June 12
- September 5