

SOCIAL SCIENCE

Standard : X

Time : 2 1/2 Hours

Total Score : 80

Instructions

- The first fifteen minutes is cool off time.
- Read the questions and instructions carefully and write the answers.
- Answer the questions considering score and time.
- Attempt any one question from each section having choice.
- For answering the question number 27 you can use the attached outline map (Page - 7) of the world

Answer the questions from 1 to 8. Each carries 1 score.

(8 x 1 = 8)

1. Identify the climatic region in which the coniferous evergreen trees are common.

- | | |
|----------------------------|-------------------------------|
| A. Taiga region | B. Tundra region |
| C. Savanna Climatic Region | D. Equatorial climatic region |

2. Find out those related with Donatello from among the following.

- a. Gattamelata
 b. The Last Judgement
 c. Pieta
 d. David

- | | |
|---------|---------|
| A) a, b | B) b, c |
| C) a, d | D) c, d |

3. Identify the characteristics of sociological imagination.

- a. Critical thinking
 b. Relies on speculations or practices
 c. Self – reflection
 d. Bases itself on stereotypes

- | | |
|------------------------|------------------------|
| A) a and b are correct | B) b and c are correct |
| C) a and c are correct | D) b and d are correct |

4. Which of the following is not a Cyclone?

- | | |
|------------------|--------------|
| A) Hurricanes | B) Typhoons |
| C) Willy Willies | D) Harmattan |

5.

Arrange the table connected with the Renaissance art suitably and identify the correct sequence from the options given below:

a. Michelangelo	i) Portrayed humans as wise, moderate and dignified
b. Leonardo da Vinci	ii) Works feature powerful and graceful human forms
c. Raphael	iii) Harmonises colour, shadow and light

A) a-i, b-ii, c-iii

B) a-ii, b-iii, c-i

C) a-iii, b-i, c-ii

D) a-iii, b-ii, c-i

6.

Identify the Bourbon King who declared 'I am the State.'

A) Napoleon

B) Louis XIV

C) Louis XV

D) Louis XVI

7.

Identify the process of examining how social relationships, social institutions, social structures and social problems affect individuals and society.

A) Commonsense knowledge

B) Sociological imagination

C) Self-reflection

D) Social analysis

8.

Find out the correct pairs.

a. Thomas More

- Utopia

b. Dante

- Canterbury Tales

c. Erasmus

- In Praise of Folly

d. Geoffrey Chaucer

- Don Quixote

A) Only a is correct

B) a and b are correct

C) Only c is correct

D) a and c are correct

Answer the questions from 9 to 15 in two or more sentences. Each carries 2 score.

(7 x 2 = 14)

9.

(A) How does the responsibility of the administrator as presented by Machiavelli through his work 'The Prince' differ from the traditional medieval feudal administrators?

OR

(B) How did the outbreak of the Bubonic Plague in the mid-14th century pave the way for the emergence of humanism?

10.

(A) Teenagers are always rebellious and irresponsible. Elucidate how this statement can be an example for stereotype.

OR

(B) Anu couldn't take care of her studies nowadays. Is it merely an individual problem? What other factors might have influenced her?

11. The concepts related to clouds are given below . Identify the clouds and write the names.

- a) Dark, rain-bearing clouds, formed in the lower part of the atmosphere.
- b) Thin, delicate feather like-clouds formed at very high altitudes.

12. Evaluate the participation of women in the French Revolution.

13. Hot deserts are mostly confined to the western margins of continents. Why?

14. Complete the table related to the changes that took place in France through the administrative reforms of Napoleon.

Reforms	changes
a. Economic Reforms
b. Military Reforms

15. Identify the climatic region in which the following native people belong to.

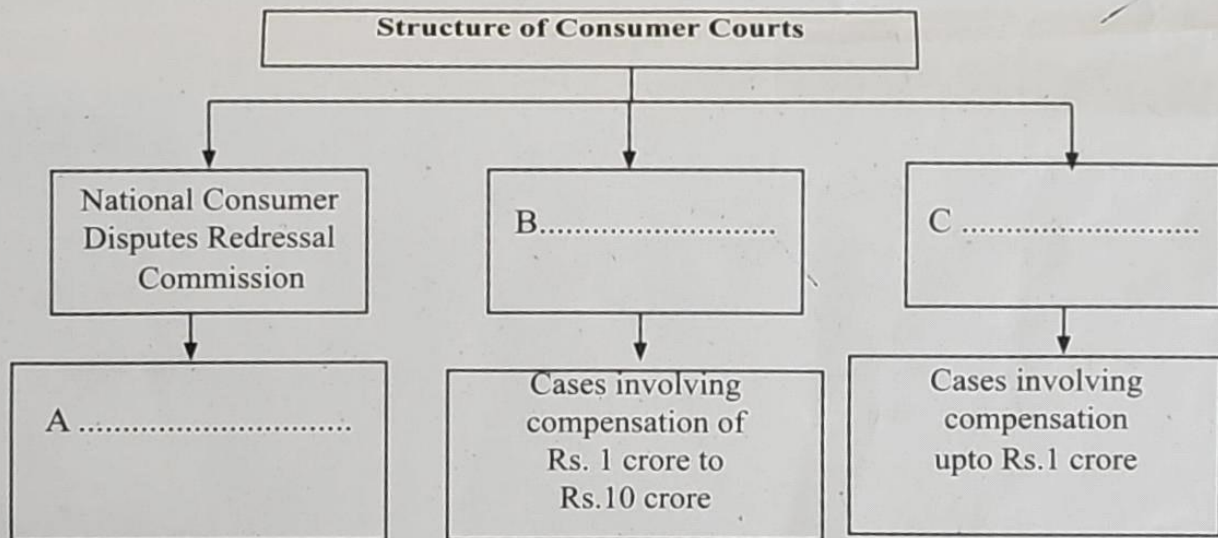
a) Bushmen :

b) Maasai :

Answer the questions from 16 to 23 in three or more sentences. Each carries 3 score.

(8 x 3 = 24)

16. Complete the chart related to the structure of Consumer Courts.



17. (A) What are the reforms introduced by the French National Assembly in the social, economic and political spheres of France?

OR

(B) The map of Europe has been redrawn after the defeat of Napoleon. Evaluate the statement based on the major decisions of the Congress of Vienna.

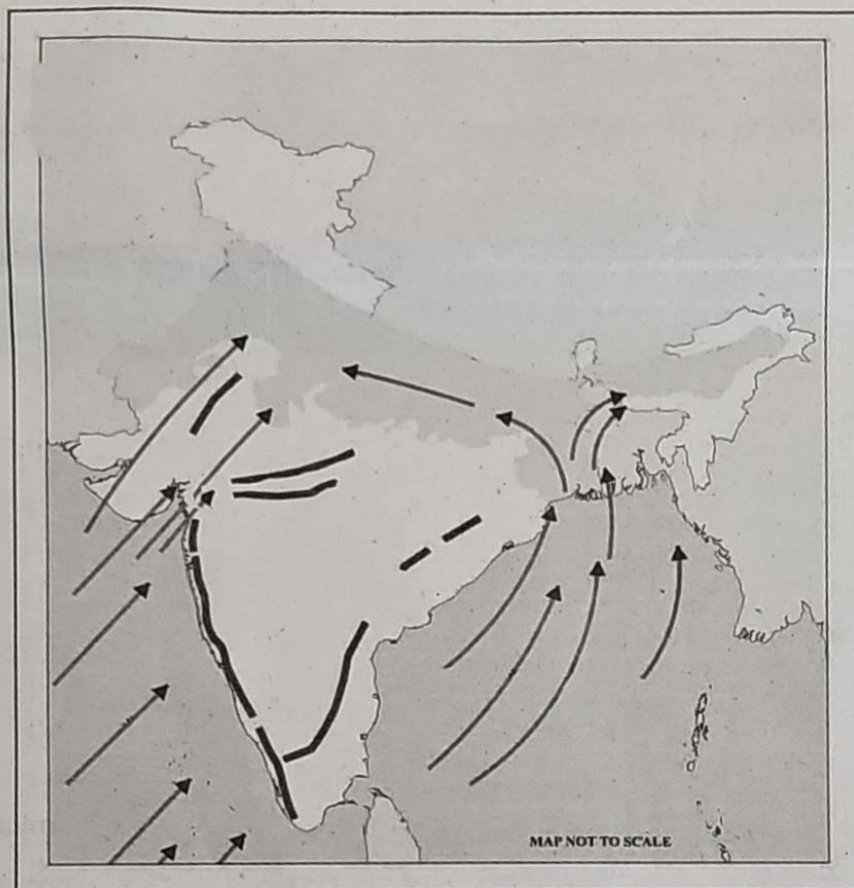
18. What is Scholasticism? Analyse the shift from Scholasticism to the concept of Humanism.

19. Complete the chart regarding the characteristic features of the Savanna climatic region.

Savanna Climatic Region	
Latitudinal extent	: between 10° and 30° latitudes in both the hemispheres
Annual average temperature	: <u>a</u> <u>20°</u>
Vegetation types	: <u>b</u>
Livelihood	: <u>c</u>

20. How does commonsense knowledge approach differ from sociological imagination approach in the analysis of social problems?

21. Identify the type of monsoon wind represented in the figure. Give an account of the formation of the monsoon wind.



earth summit
alt.

22. Deepa purchased a mobile phone. But it was damaged within its warranty period. She couldn't get it replaced as she didn't receive the bill. Analyse the objectives of consumer education based on this problem.

23. Point out any three international initiatives and interventions for the protection of climate and environment.

Answer the questions from 24 to 29 in four or more sentences. Each carries 4 score.

(6 x 4 = 24)

24. (A)

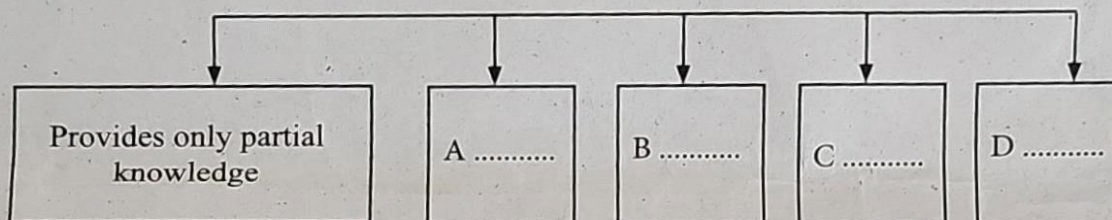


Identify the permanent winds marked as A and B in the figure. Name the global pressure belts between which these permanent winds blow.

OR

(B) Atmosphere is heated from the earth's surface. Substantiate the statement by explaining the processes of heat transfer in the atmosphere.

25. (A) Complete the chart showing the limitations of the commonsense knowledge.



OR

(B) Analyse the table and answer the following questions.

**Labour force participation rate in India by gender status
2017-2023**

Year	Labour Participation rate	
	Male	Female
2017-2018	75.1	21.1
2018-2019	74.9	21.6
2019-2020	75.8	26.3
2020-2021	75.8	27.5
2021-2022	75.9	27.2
2022-2023	77.4	31.6

Source: Periodic Labour Force Survey Report, Ministry of Statistics and Programme Implementation.

- Identify the period during which the lowest male labour force participation rate is recorded.
- Find out the female labour force participation rate for the period 2017-18?
- Compare the labour force participation rates of male and female and write your inference.

26. (A) What are the features of Consumer Protection Act 2019?

OR

(B) Mention the institutions to be approached against healthcare and banking frauds.

27. Mark and label the following geo information in the outline map of the world.

A) Sahara desert

B) Llanos grasslands

C) Kalahari desert

D) Prairies grasslands

28. Evaluate the role of thinkers in inspiring the people to protest against the injustice existed in France.

29. Analyse the changes that occurred in historiography during the renaissance period from the Middle ages.

Answer the questions 30 and 31 in detail. Each carries 5 score.

(2 x 5 = 10)

30. (A) How global pressure belts are formed? Explain.

OR

(B) What information can be included to prepare a seminar paper on the topic 'The anthropogenic interventions that aggravate natural climate change'. Explain.

31. (A) 'The Counter Reformation was both a reaction against the reformation and an effort to reform itself'. Evaluate the statement based on the initiatives taken by the Catholic church.

OR

(B) "Nobles fight, Priests pray and the Commons pay". Analyse the social system that existed in France in the 18th century based on the above statement.