



SUMMATIVE ASSESSMENT- II 2025-2026

Health and Physical Education, Art Education
Work Integrated Education

Class : 6

Time : 2 hrs 15 minute

Total Score : 45

Instructions

- The first 15 minutes is cool-off time. Read the questions and plan the answer during this time.
- There are three sections in the question paper. A. Health and Physical Education B. Art Education C. Work Integrated Education
- Follow the instructions while answering the questions and its sub questions in all the sections.

A. Health and Physical Education

Time: 40 minutes




Score: 15

Read the following questions carefully and answer them.

1. Which among the following statements about precautions to be taken during lightning is incorrect? (1 score)
- (A) Stay inside the building. (B) Keep the windows and doors closed.
- (C) Use of electric devices. (D) Don't play in open areas or terrace.
- i) A & B are correct ii) C & D are correct
- iii) Only C is correct iv) Only D is correct
2. Match the following.


Examine the table below and find the correct answer.

(1 score)

A	B
1. Mandatory Signs	(i) blue square 
2. Warning signs	(ii) red circle 
3. Informational signs	(iii) red triangle 

- a) 1-i, 2-ii, 3-iii
b) 1-ii, 2-iii, 3-i
c) 1-iii, 2-i, 3-ii

3. If a wound occurs while playing, what are the two main first aid measures to be taken to prevent infection and help faster recovery of the wound? (2 Score)
4. Observe the pictures given below. Identify and describe the correct method.



Picture A



Picture B

Questions 5 to 7 have a, b parts. Answer any one.

5. a. Explain two important things to be followed to reduce physical impact while jumping and to land safely on the ground?

OR

b. Identify the type of throwing technique used in the following sports activities.

i) throwing cricket ball

ii) shooting handball

6. a. Accidents often happen when people cross the road carelessly. There are four steps to follow while crossing the road that can help prevent such accidents. Which are those steps? (2 score)

OR

b. While travelling on the national highway, you might have seen broken white lines in the middle of the road. (2 score)

i) What does this road sign indicate?

ii) What is the main safety rule followed when using this sign?

7. a. Hot oil spilled on a person's hand while cooking causing a minor burn. What are the two immediate first aid measures to be given to the injured? (2 score)

OR

b. If a fire breaks out in a building in your school, what measures are to be taken to get immediate help?

8. 'PRICE' is the first aid method for contusion. What do these letters indicate? (3 score)



P



R



I



C



E

Answer questions 1 and 2.

1. When Rikki came back from the school and turned on the TV, he saw someone playing a musical instrument. He found it very fascinating and realised that the instrument was the piano in his lesson. (2x1 score =2)

Identify the correct statements given about piano and write them.

- a. Piano is a major instrument in Western music.
 b. Piano is used in Karnatic music.
 c. It is a string instrument played using blocks.
 d. Piano is only used in folk songs.
- i. a and b are correct
 ii. a and c are correct.
 iii. d and c are correct
 iv. None of the above.
2. The rhythms of Kathak, a major dance form of North India are given below. According to the number of 'Matras' find out and write the suitable options.

a. Theentaal (16 matra)	i. dhi na / dhi dhi na / thina dhi dhi na
b Japtaal (10 matra)	ii. dha dhi na / dha thu naa
c Kaharwa taal (8 matra)	iii. dha dhin dhin dha / dha dhin dhin dha / dha dhin dhin dha / dha dhin dhin dha
d. Bhadra taal (6 matra)	iv. dha ge na thi / tha ka dhi naa

- 1) a (iii) b (i) c (iv) d (ii)
 2) a (iv) b (ii) c (iii) d (i)
 3) a (i) b (ii) c (iii) d (iv)
 4 a (ii) b (iv) c (i) d (iii)

Write answers to all the questions from 3 to 6.

(4x2 Score =8)


3. In a radio drama, apart from dialogues, the character's mental status and the setting of the scene is also to be reached to viewers: What are the main elements used for this?
4. (a) The picture given here is the classical dance form of Odisha. Identify the dance form.



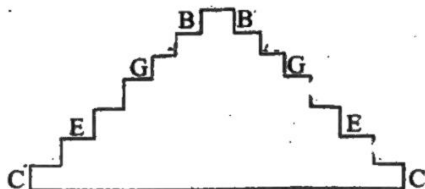
(b) Analyse the statements given below and identify the dance form.

- Practised by boys aged 9 to 13.
- Acquire exceptional body flexibility.
- This dance form is the first training stage of Odissi dance.

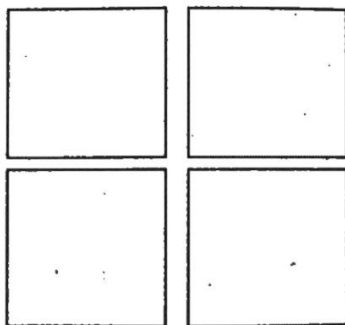
5.



Observe the picture given above and complete the pyramid using English letters in ascending and descending order.



6. Draw the scene of a bird flying in and sitting on the branch of tree, as a story board for an animated movie in four frames.



Questions 7A, 7B. Answer any one.

(5x1=5 score)

7. (A) 'Sauhridham' is the manuscript magazine prepared in the class. Draw and create a suitable cover image for it. (While preparing the cover follow the dimension of 10 cm width and 15 cm length)

OR

7. (B) Prepare a cartoon on the theme 'Challenges faced by nature', using living beings as characters.

C. Work Integrated Education

Time: 40 minutes

Score: 15

Pick out the correct statements from the following.

(Score 1)

1. Statements about the skills and abilities required for a Radio Jockey are given below.

- Deep knowledge about the topic to be presented.
- Use complex language.
- Ability to speak fluently.

- Statements I and III are correct.
- Statements II and III are correct.
- Statements I and II are correct.
- All the statements are correct.

2. Match the following and select the correct option given below.

a) Economic activity	1. Recycle	i. Farmer
b) Medium of growth	2. Skilled labour	ii. Radio Jockey
c) Live broadcast	3. Perlite	iii. Green task force
d) 8R concept	4. Communication	iv. Doctor

- a-3-iv, b-2-iii, c-4-ii, d-1-i
 - a-2-iv, b-4-ii, c-1-iv, d-3-i
 - a-2-iv, b-3-i, c-4-ii, d-1-iii
 - a-4-ii, b-1-iii, c-3-i, d-2-iv
3. How are the roots of the plant shown in the picture different from the roots of a normal plant? What is the name of this condition? (Score 2)



4. a) How many types of radio programmes are there? (Score 1)
- b) What are the things to be kept in mind while presenting recorded radio programmes? (Score 1)

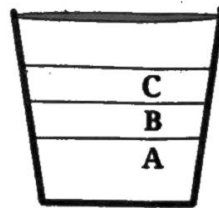
5. Sherin got a room for his own in his new house. Can you help Sherin to arrange the room in a way suitable for studying and resting? Explain with the help of a picture. (Score 2)
6. a) Suggest any two medium of growth that can be used for vegetable cultivation on the terrace. (Score 1)
- b) Explain the reasons for suggesting this medium. (Score 2)

Answer any one from questions 7 A and 7 B.

- 7.A. a) Good citizens are formed when economic and non economic activities are equally undertaken. Do you agree with this statement? Why? (Score 2)
- b) List four economic activities and four non-economic activities which you are familiar with. (Score 2)

or

7.B



This is the flower pot prepared at Renu's house for soil less cultivation. The potting mixture was prepared in the ratio 3:1:1

- a) Identify the items A, B and C (Score 2)
- b) Write down the advantages and limitations of each. (Score 2)