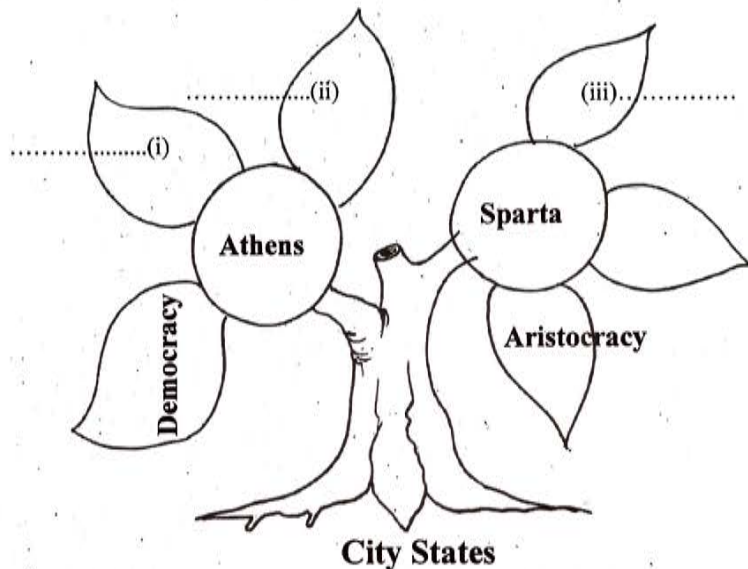


Instructions

- The first 15 minutes is cool-off time. Read the questions and plan your answers during this time.
- Answer 6 questions and its sub questions.

1 Athens and Sparta were two major city states in Ancient Greece.

- a) Complete the concept map including the features of Athens and Sparta, the city states in Ancient Greece.



- b) Choose the correct statement related to Ancient Greece from the options.

- A) Olympics started here.
- B) For administrative convenience, it was divided into several satrapies.
- C) Zoroastrian philosophy was originated.
- D) It was the birth place of Western civilization.

2 Early humans evolved millions of years ago.

- a) The various stages of human evolution and their characteristics are given in jumbled order. Write them in correct.

Stage of Evolution	Features
1. Hominids	a. Tool makers
2. Hominoids	b. Upright humans
3. Homo erectus	c. Walked on four legs
4. Homo habilis	d. Walked on two legs

- A) 1 - c, 2 - d, 3 - a, 4 - b B) 1 - d, 2 - c, 3 - b, 4 - a
 C) 1 - b, 2 - a, 3 - c, 4 - d D) 1 - a, 2 - b, 3 - d, 4 - c

b) What were the developments in human life when they moved from Mesolithic to Neolithic period? Write a note on it.

Question 3 has internal choices 3(A), 3(B). Write any one completely.

3(A) In the Bronze age, civilizations were formed centered around river.

- a) Which among the given statements is not correct?
 A) The main feature of Harappan civilization is town planning.
 B) The writing system of the Mesopotamians is known as 'sacred writing'.
 C) Chinese civilization originated along the bank of river Hwang-Ho.
 D) Egyptian kings were known as 'Pharaohs'.
- b) Examine the features of the given civilization and arrange them in the table correctly.
- The region between rivers
 - The city of Cairo
 - The Lunar Calendar
 - The Gift of Nile
 - The city of Lagash
 - Pyramids

Egyptian Civilization	Mesopotamian Civilization
The city of Cairo	The region between rivers

OR


3 (B)

- a) Observe the pictures of the writing systems that existed in the Bronze age. Write down the civilization they are related to?



Cuneiform Script

i)

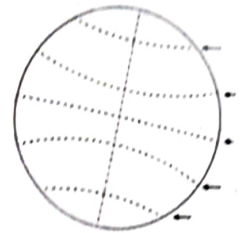


Hieroglyphic script

ii)

- b) Prepare a note comparing the features of these two scripts.
- 4 The imaginary lines drawn on the surface of the Earth are known as lines of Longitudes and Latitudes.
- a) Which of the following is not a feature of equator?
- A) The greatest circle of latitude.
- B) Based on the equator, the earth can be imagined as two hemispheres.
- C) The 0° line of latitude.
- D) Connects the poles.
- b) Draw a model of the globe and mark the lines of latitude correctly.

<p>Arcic Circle $66\frac{1}{2}^{\circ}$ North</p> <p>Tropic of Cancer $23\frac{1}{2}^{\circ}$ North</p> <p>Tropic of Capricorn $23\frac{1}{2}^{\circ}$ South</p> <p>Antarctic Circle $66\frac{1}{2}^{\circ}$ South</p>
--



- 5 State is the highest socio-political system formed by the people.
- a) Find out the correct statement related to the state and write them.
- A. The state protects the rights of the people.
- B. The state can exist without the people.
- C. For the existence of a state, a permanent and well-defined territory is essential.
- D. State is a temporary institution.
- b) Add necessary details to present in the debate on the subject – ‘The role of Government in ensuring the welfare of people of the state’.
- The Government ensures the welfare of the people of the state.
 -
 -
 -

Question 6 has two internal choices 6(A), 6(B). Answer any one completely.

6(A) Buddhism and Jainism were the two philosophies emerged in ancient India.

- a) According to Jainism, which among the following is included in Tri-Ratna?
- A. Right Food, Right Belief, Right Knowledge.
- B. Right Belief, Right Knowledge, Right Dress
- C. Right Belief, Right Knowledge, Right Action
- D. Right Food, Right Action, Right Knowledge

- b) Complete the table including the two features of the ideals of Buddhism and Jainism.

Jainism	Buddhism
• All things have life	• Do not harm others
•	•
•	•

OR

6 (B) Magadha emerged as a prominent power among the sixteen Mahajanapadas which existed in India.

- a) What are the factors that helped the growth of Magadha? Prepare a note.
- b) Which among the following statements is not correct about Magadha. Write them.
- A) The fertility resulting from proximity to the Ganges and its tributaries helped the growth of Magadha.
 - B) Pataliputra served as the earlier capital of Magadha.
 - C) Chandragupta Maurya who established the Maurya Empire by annexing nearby regions to Magadha.
 - D) Dhanananda was the ruler of Magadha.