

STATE BANK OF INDIA 08

TEST - I

TEST OF REASONING

Q.1. In a certain code **BOARD** is written as **53169** and **NEAR** is written as **2416**. How is **NODE** written in that code?

- a) 2494
- b) 2394
- c) 2934
- d) 2694
- e) None of these

Q.2. What should come next in the following sequence of letters?

B B C B C D B C D E B C D E F B C D E F G B C D E F

- a) B
- b) G
- c) H
- d) D
- e) None of these

Q.3. In a certain code **SPORADIC** is written as **QNORDJEB**. How is **TROUBLES** written in that code?

- a) SQTNTFMC
- b) TNQSRDKA
- c) TNQSTFMC
- d) TFQSCMFT
- e) None of these

Q.4. Four of the following five are alike in a certain way and so form a group. Which is the one that does not belong to that group?

- a) Mica
- b) Zinc
- c) Iron
- d) Chlorine
- e) Aluminum

Q.5. If it is possible to make only one meaningful word with the first, the third, fifth and the eighth letters of the word **SHAREHOLDING**, which of the following will be the second letter of that word? If no such word can be made, give 'X' as the answer and if more than one such word can be made, give 'Y' as the answer.

- a) L
- b) E
- c) S
- d) X
- e) Y

Q.6. Four of the following five are alike in a certain way and so form a group. Which is the one that does not belong to that group?

- a) 18

- b) 24
- c) 36
- d) 34
- e) 26

Q.7. If 'green' means 'yellow' 'yellow' means 'white'; 'white' means 'red'; 'red' means Violet'; Violet' means 'black'; then which of the following will be the colour of human blood?

- a) Red
- b) Black
- c) Green
- d) White
- e) None of these

Q.8. How many such pairs of letters are there in the word "**GLIMPSE**" each of which has as many letters between them in the word as in the English alphabet?

- a) None
- b) One
- c) Two
- d) Three
- e) More than three

Q.9. **EARN** is related to **RANE** and **BOND** is related to **NODB** in the same way as **TEAR** is related to — —.

- a) AERT
- b) ATRE
- c) ARET
- d) REAT
- e) None of these

Q.10. How many such digits are there in the number **5831649** each of which is as far away from the beginning of the number as when the digits are rearranged in descending order?

- a) None
- b) One
- c) Two
- d) Three
- e) More than three

Q.11. If 'x' means 'added to'; '÷' means 'multiplied by'; '+' means 'subtracted from' and '-' means 'divided by' then

$$24 + 36 - 12 \times 8 \div 4 = ?$$

- a) 36
- b) 53
- c) 5
- d) -20
- e) None of these

Q.12. Four of the following five are alike in a certain way and so form a group. Which is the one that does not belong to that group?

- a) Dahlia

- b) Lotus
- c) Lily
- d) Rose
- e) Marigold

Read the given information carefully and answer the questions given below

(i) 'P x Q' means 'P is brother of Q'.

(ii) 'P - Q' means 'P is sister of Q'.

(iii) 'P + Q' means 'P is father of Q'.

(iv) 'P ÷ Q' means 'P is mother of Q'.

Q.13. Which of the following represents 'M is nephew of N'?

- a) $N - K + M$
- b) $N \times K \div M$
- c) $N \div K \times M$
- d) $N - K + M \times T$
- e) None of these

Q.14. How is T related to D in the expression: $H + T \div R - D$?

- a) Nephew
- b) Niece
- c) Nephew or Niece
- d) Data inadequate
- e) None of these

Q.15. Which of the following represents 'F is daughter of W'?

- a) $W \div R + F$
- b) $W \times R \times F$
- c) $W + R \times F - T$
- d) $W + R - F + T$
- e) None of these

In each of the questions below are given four statements followed by four conclusions numbered I, II, III and IV. You have to take the given statements to be true even if they seem to be at variance from commonly known facts. Read all the conclusions and then decide which of the given conclusions logically follows from the given statements disregarding commonly known facts.

Q.16. Statements: Some bags are trunks. All trunks are shirts. Some shirts are books. All books are shops.

Conclusions: I. Some shops are bags. II. Some books are bags. III. Some shops are shirts. IV. Some shirts are bags.

- a) Only I and II follow
- b) Only I and III follow
- c) Only III and IV follow
- d) Only II and IV follow
- e) None of these

Q.17. Statements: All pens are chairs. All flowers are chairs. All chairs are trucks. All trees are trucks.

Conclusions: I. Some trucks are pens. II. Some trucks are chairs. III. Some trees are pens. IV. Some trees are chairs.

- a) Only I and III follow
- b) Only I and II follow
- c) Only III and IV follow
- d) Only II and IV follow
- e) None of these

Q.18. Statements:All desks are pillars. Some pillars are towns.All towns are benches. Some benches are cars.

Conclusions: I. Some cars are towns. **II.** Some benches are desks.**III.** Some benches are pillars. **IV.** Some cars are pillars.

- a) None follows
- b) Only I follows
- c) Only II follows
- d) Only III follows
- e) Only IV follows

Q.19. Statements:All stations are houses. No house is garden.Some gardens are rivers. All rivers are ponds.

Conclusions: I. Some ponds are gardens. **II.** Some ponds are stations. **III.** Some ponds are houses. **IV.** No pond is station.

- a) Only I follows
- b) Only either II or IV follows
- c) Only I and II follow
- d) Only I and IV follow
- e) None of these

Q.20. Statements:Some towers are lanes. Some lanes are roads. Some roads are rivers. Some rivers are jungles

Conclusions: I. Some jungles are roads. **II.** Some roads are lanes.**III.** Some jungles are towers. **IV.** No jungle is road.

- a) Only I follows
- b) Only II follows
- c) Only either I or IV follows
- d) Only IV follows
- e) Only either I or IV and II follow

Study the following arrangement carefully and answer the questions given below —.

B ↑ A M 3 # D 2 E K 9 \$ F @ N I T 4 1 U W © H 8 % V J 5 Y 6 * 7 R

Q.21. Howmany such symbols are there in the above arrangement each of which is either immediately preceded by a letter or immediately followed by a letter but not both?

- a)None
- b)One
- c)Two
- d) Three
- e)More than three

Q.22. If all the symbols in the above arrangement are dropped which of the following will be the twelfth from the left end?

- a) 9
- b) U
- c) I
- d) 1
- e) None of these

Q.23. How many such numbers are there in the above arrangement each of which is immediately followed by a consonant but not immediately preceded by a letter?

- a) None
- b) One
- c) Two
- d) Three
- e) More than three

Q.24. Four of the following five are alike in a certain way based on their positions in the above arrangement and so form a group. Which is the one that does not belong to that group?

- a) DK3
- b) 4NU
- c) 8J©
- d) F K N
- e) 5*%

Q.25. Which of the following is the seventh to the right of the eighteenth from the right end of the above arrangement?

- a) H
- b) 9
- c) %
- d) E
- e) None of these

In each question below is given a group of digits/symbols followed by four combinations of letters numbered a), b), c) and d). You have to find out which of the combination correctly represents the group of digits/symbols based on the following coding system and the conditions that follow. If none of the combinations correctly represents the group of letters/digits, give e) i.e. 'None of these' as the answer.

Digit /Symbol: 1 # \$ 9 8 6 % @ © 7 2 4 * 3 5

Letter Code: B D E N I V R G H K T J P F A

Conditions:

(i) If both the first and the last elements in the group are odd digits both are to be coded as 'Y'.

(ii) If the first element is a symbol and the last element is an even digit, the codes for the first and the last elements are to be interchanged.

(iii) If the first element is an odd digit and the last element is a symbol, both are to be coded as 'Z'.

(iv) If the first element is an even digit and the last element is an odd digit, both are to be coded as the code for the odd digit.

Q.26. 3\$95#1

- a) FENADB
- b) BENADF
- c) ZENADZ
- d) FENADF
- e) None of these

Q.27. 8%©3#5

a) YRHFYD b) ARHFDI c) ARHFDA d) YRHFDA e) None of these

Q.28. ©8143*\$

a)EIBJFPH b) VIBJFPY c) EIBJFP# d) HIBJFPE e) None of these

Q.29. 6%@9#3

a) VRGNDF b) FRGNDF c) YRGNDF d)ZRGNDZ e) None of these

Q.30. *\$6724

a) JEVKTP b) PEVKTJ c) YEVKTY d) ZEVKTZ e) None of these

Each of the questions below consists of a question and two statements numbered I and II given below it. You have to decide whether the data provided in the statements are sufficient to answer the question. Read both the statements and — — —.

Give answer a) if the data in statement I alone is sufficient to answer the question, while the data in statement II alone is not sufficient to answer the question.

Give answer b) if the data in statement II alone is sufficient to answer the question, while the data in statement I alone is not sufficient to answer the question.

Give answer c) if the data either in statement I alone or in statement II alone is sufficient to answer the question.

Give answer d) if the data in both the statements I and II together are not sufficient to answer the question.

Give answer e) if the data in both the statements I and II together are necessary to answer the question.

Q.31. How is M related to F?

Statements I:F is sister of N who is mother of R. **II:**M has two brothers of which one is R.

Q.32. On which date in March was Pravin's father's birthday?

Statements I:Pravin correctly remembers that his father's birthday is after 14th but before 19th March.

II:Pravin's sister correctly remembers that their father's birthday is after 17th but before 21st March.

Q.33. Among M, N, T, R and D each having different age who is the youngest?

Statements I:N is younger than only D among them.**II:**T is older than R and younger than M.

Q.34. Village D is in which direction of village H?

Statements I:Village H is to the South of village A which is to the South-East of village D. **II:**Village M is to the East of village D and to the North-East of village H.

Q.35. How is 'food' written in a code language?


Statements I:'Always eat good food' is written as 'ha na pa ta' in that code language. **II:**'Enjoy eating good food' is written as 'ni ha ja pa' in that code language.

Each of the following series consists of seven figures, two of which at the end are unnumbered. One of the five numbered figure does not fit into the series. Find out the figure.

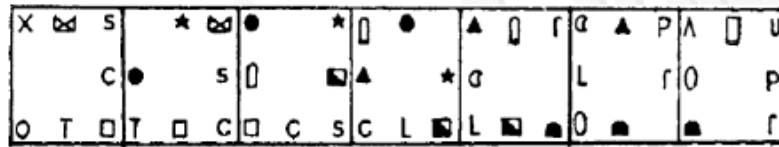
Q.36.



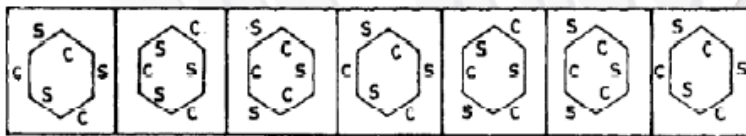
a)b)c)d)e)
Q.37.



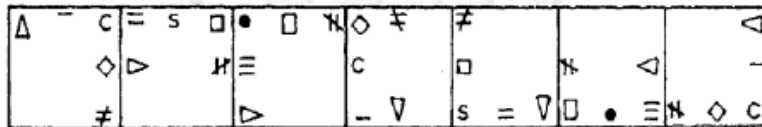
a)b)c)d)e)
Q.38.



a)b)c)d)e)
Q.39.



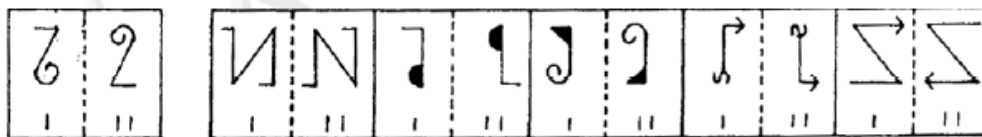
a)b)c)d)e)
Q.40.



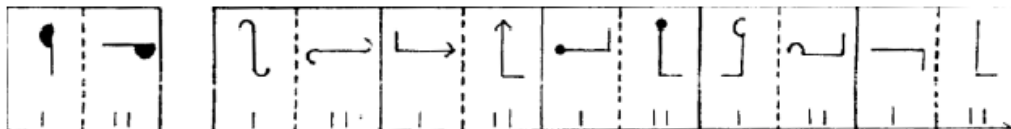
a)b)c)d)e)

In the following question, a related pair of figures is followed by five numbered pairs of figures. Select the pair that has a relationship **similar** to that in the original Pair.

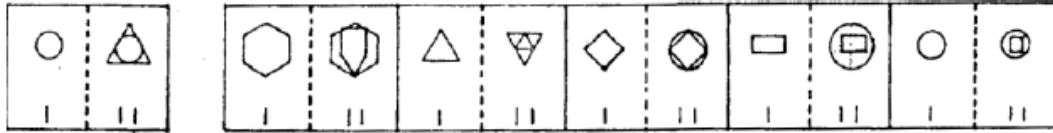
Q.41.



a)b)c)d)e)
Q.42.

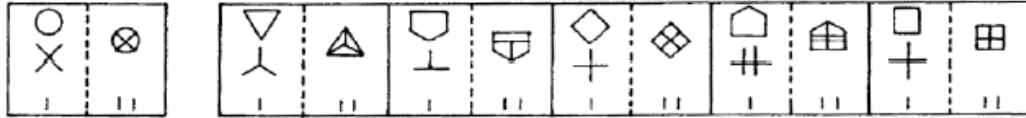


a)b)c)d)e)
Q.43.



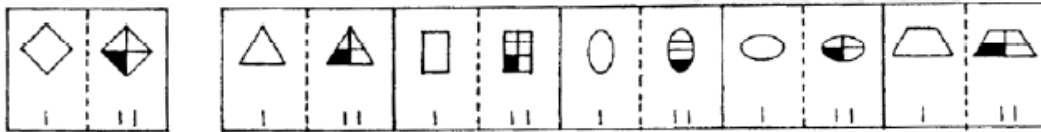
a)b)c)d)e)

Q.44.



a)b)c)d)e)

Q.45.



a)b)c)d)e)

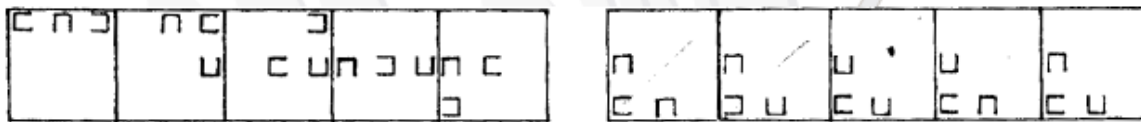
In each of the Questions given below which one of the five answer figure on the right should come after the problem figures on the left, if the sequence were continued.

Q.46.



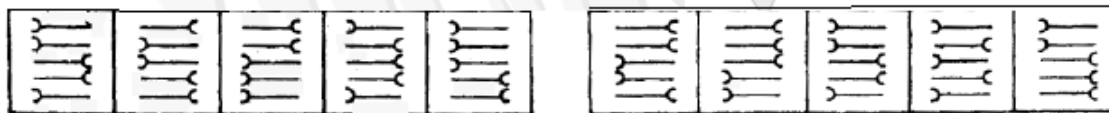
a)b)c)d)e)

Q.47.



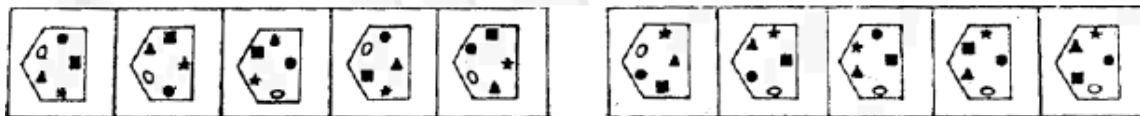
a)b)c)d)e)

Q.48.



a)b)c)d)e)

Q.49.



a)b)c)d)e)

Q.50.



a)b)c)d)e)

TEST - II

TEST OF QUANTITATIVE APTITUDE

What should come in place of the question mark (?) in the following questions–

Q. 51. $(-151 \times 31 \times -22) \div ? = 343.273$

- a) 250
- b) 400
- c) 300
- d) 150
- e) None of these

Q. 52. $28.6\% \text{ of } 350 + \sqrt{?} = 119.1$

- a) 4000
- b) 400
- c) 360
- d) 361
- e) None of these

Q. 53. $37965 + 23488 - 19052 - 37561 = ?$

- a) 4480
- b) 4048
- c) 4800
- d) 4840
- e) None of these

Q. 54. $[(17.25)^2 - 102.5625] \div ? = 25$

- a) 7.79
- b) 7.81
- c) 7.8
- d) 7.82
- e) None of these

Q. 55. $\frac{0.41 \times 2.5}{0.125} = ?$

- a) 5.21
- b) 4.21
- c) 3.21
- d) 3.99
- e) None of these

Q. 56. $8392 * \frac{3}{6} * \frac{2}{15} * ? = 1049$

- a) 1.51
- b) 0.51
- c) 2.5
- d) 2.51
- e) None of these

Q. 57. $(784 \div 14) \times (1568 \div 28) = ?$

- a) 3000
- b) 3100
- c) 3200
- d) 3300
- e) None of these

Q. 58. $848 \times ? \times 19 = 467248$

- a) 21
- b) 38
- c) 39
- d) 29
- e) None of these

Q. 59. $8.21\% \text{ of } 600 + 9.5\% \text{ of } ? = 239.26$

- a) 1900
- b) 1990
- c) 2000
- d) 2090
- e) None of these

Q. 60. $888 \times 88 \times 8 = ?$

- a) 652152
- b) 652512
- c) 625512
- d) 625152
- e) None of these

Q. 61. $(46)^2 + (67)^2 \div ? = 20$

- a) 331.75
- b) 331.25
- c) 330.75
- d) 330.25
- e) None of these

Q. 62. $3\sqrt{?} = (48 \times 47) \div 75.2$

- a) 8000
- b) 27000
- c) 6400
- d) 1000
- e) None of these

Q. 63. $41785 - 3058 - 1485 - 19054 = ?$

- a) 18188
- b) 18178
- c) 18198
- d) 18288
- e) None of these

Q. 64. $1568.2 + 3084 \times 0.85 = ?$

- a) 2564
- b) 2574
- c) 2554
- d) 2504
- e) None of these

Q. 65. $\sqrt{2401} \div 19.6 \times 1500 \div 37.5 = ?$

- a) 40
- b) 140
- c) 100
- d) 95
- e) None of these

Q. 66. $3 \sqrt{175616}$

- a) 64
- b) 66
- c) 68
- d) 56
- e) None of these

Q. 67. $1125 + 8860 + 3360 \div 400 = ?$

- a) 9939.4
- b) 9393.4
- c) 9993.4
- d) 9039.4
- e) None of these

Q. 68. $[(21)^2 \times (43)^2] \div (105)^2 = ?$

- a) 74.96
- b) 75.96
- c) 73.96
- d) 72.96
- e) None of these

Q. 69. $\sqrt{?} * 3\sqrt{166375} = 2475$

- a) 1500
- b) 1590
- c) 1400
- d) 1600
- e) None of these

Q. 70. $12\frac{4}{25} + 13\frac{1}{5} = ?$

- a) 24.36
- b) 25.36
- c) 24.46
- d) 24.66

e) None of these

What should come in place of the question mark (?) in the following number series?

Q. 71. 2 3 11 38? 227

- a) 92
- b) 112
- c) 102
- d) 104
- e) None of these

Q. 72. 2 8 33? 765 4625

- a) 148
- b) 158
- c) 138
- d) 168
- e) None of these

Q. 73. 11 45? 380.25 567.375

- a) 151.5
- b) 152.5
- c) 153.5
- d) 154.5
- e) None of these

Q. 74. 3 2? 6 14 37.5

- a) 1
- b) 2
- c) 4
- d) 3
- e) None of these

Q. 75. 1 3 4 7 11?

- a) 15
- b) 18
- c) 16
- d) 13
- e) None of these

Q. 76. If the price of sugar is increased by 15% find by how much percent a householder must reduce consumption of sugar so as not to increase the expenditure?

- a) $13\frac{2}{23}$
- b) 13%
- c) $14\frac{2}{3}$ %
- d) $13\frac{1}{23}\frac{4}{25}$
- e) None of these

Q. 77. A customer asks for the production of x number of goods. The company produces y number of goods daily out of which z % are unfit for sale. The order will be completed in :

a) $\frac{100x}{(z-1)}$ days

b) $\frac{x}{100y(1-z)}$ days

c) $\frac{100yz}{x}$ days

d) $\frac{100x}{y(100-1)}$ days

e) None of these

Q. 78. If $\frac{a}{3} = \frac{b}{4} = \frac{c}{7}$ then $\frac{a+b+c}{c} = ?$

a) 1

b) 4

c) 2

d) 7

e) None of these

Q. 79. An alloy contains Zinc and Copper in the ratio 5 : 8 and another alloy contains zinc and copper in the ratio 5 : 3. If equal amounts of both the alloy are melted together then the ratios of zinc and copper in the resulting alloy is

a) 25 : 24

b) 3 : 8

c) 103 : 105

d) 105 : 103

e) None of these

Q. 80. Mr. Agarwal invests a sum of Rs. 80000 at the rate of 6 p.c p.a. What approximate amount of C.I will obtain at the end of 3 years?

a) 15280

b) 15290

c) 15270

d) 15260

e) 16000

Q. 81. A tradesman marks his goods 30% above cost price. If he allows a discount of $6\frac{1}{4}$ % then his gain percent is :

a) $20\frac{7}{8}$ %

b) $21\frac{7}{8}$ %

c) $22\frac{7}{8}$ %

d) $23\frac{7}{8}$ %

e) None of these

Q. 82. A certain number of men complete a piece of work in 60 days. If there were 8 more men, the work could be finished in 10 days less. How many men were originally there?

- a) 30
- b) 50
- c) 60
- d) 40
- e) None of these

Q. 83. 4 men and 6 women finish a job in 8 days, while 3 men and 7 women finish it in 10 days. In how many days will 10 women finish it?

- a) 24
- b) 32
- c) 40
- d) 36
- e) None of these

Q. 84. A man invested $\frac{1}{3}$ rd of his capital at 7%, $\frac{1}{4}$ th of his capital at 8% and the remainder at 10% if his annual interest is Rs 561, the capital is.

- a) Rs. 6600
- b) Rs. 6000
- c) Rs. 5400
- d) Rs. 7200
- e) None of these

Q. 85. The man travelled a distance of 80 Km in 7 hours partly on foot with the speed of 8 km per hour and partly by bicycle at 16 km per hour. Find the distance travelled on foot in km.

- a) 30
- b) 32
- c) 24
- d) 48
- e) None of these

Q. 86. In how many different ways can the letters of the word UNIVERSAL be arranged where E, R, S always occur together-

- a) 32240
- b) 30240
- c) 32420
- d) 31240
- e) None of these

Q. 87. A, B, C invests Rs. 50000 for business A invest Rs. 4000 more than B and B Rs. 5000 more than C. Out of the total profit of Rs. 35000, A receives.

- a) 11900
- b) 8400
- c) 14700
- d) 13600
- e) None of these

Q. 88. A wire is moulded in the form of a ring with radius of 28 cm. Again it is bent into square form. Determine the length of the side of the square.

- a) 44cm
- b) 45cm
- c) 46cm
- d) 48cm
- e) None of these

Q. 89. The perimeter of a right angled triangle is 90 cm and its hypotenuse is 39cm. Find the other sides.

- a) 30cm, 10cm
- b) 36cm, 15cm
- c) 48cm, 20cm
- d) 30 cm, 15cm
- e) None of these

Q. 90. The average age of a class is 15.8 years. The average age of the boys in the class is 16.4 years and that of girls is 15.4 years. What is the ratio of boys and girls in the class?

- a) 1 : 2
- b) 2 : 3
- c) 3 : 4
- d) 4 : 5
- e) None of these

Q. 91. A motorboat whose speed is 15km/hr in still water goes 30 km downstream and returns in four and a half hours. The speed of the stream is.

- a) 4 km/hr
- b) 6km/hr
- c) 7km/hr
- d) 5km/hr
- e) None of these

Q. 92. The population of a town is 144000. It increases by 5% during the first year. During the second year it decreases by 10% and increases by 15% during the third year. What is the population after 3years?

- a) 154692
- b) 156492
- c) 154629
- d) 156429
- e) None of these

Q. 93. If we multiply the fraction by itself and divide the product by the square of its reciprocal, the fraction so obtained is $3\frac{13}{81}$. The original fraction is—

- a) 16/9
- b) 8/9
- c) 4/3

- d) $\frac{1}{3}$
- e) None of these

Q. 94. If $\sqrt{2n} = 64$ then find the value of n ?

- a) 8
- b) 10
- c) 12
- d) 16
- e) None of these

Q. 95. Which of the following number should be added to 18962 to make it exactly divisible by 13?

- a) 2
- b) 3
- c) 4
- d) 5
- e) None of these

Q. 96. Which of the following numbers is divisible by 25?

- a) 505520
- b) 437850
- c) 124505
- d) 500555
- e) None of these

Q. 97. The length of a rectangle is increased by 20% and its breadth decreased by 10%. The area of new rectangle –

- a) Decreases by 10%
- b) Neither decrease nor increase
- c) Increase by 8%
- d) Increase by 10%
- e) None of these

Q. 98. A person travels equal distance with speeds of 3 km/hr, 4 km/hr and 5km/hr and takes a total time of 47 minutes. The total distance (in Km) is–

- a) 2
- b) 3
- c) 4
- d) 5
- e) None of these

Q. 99. What is 397 times 256.

- a) 106132
- b) 106142
- c) 101632
- d) 101362
- e) None of these

Q. 100. The difference between the present ages of Shailendra and Deepak is 28years. Seven years ago the ratio of their ages was 5 : 12 respectively. What is Deepak's present age?

- a) 45 years
- b) 42 years
- c) 48 years
- d) 55 years
- e) None of these

TEST - III

GENERAL AWARENESS

Q.101. Which of the following is a better measurement of Economic Development?

- a) Per Capita Income
- b) Disposable Income
- c) GDP
- d) NNP
- e) None of these

Q.102. ASHAs stand for-

- a) Auxiliary Social Health Activities
- b) Associated Safe Health Activities
- c) Area Social Health Agents
- d) Associated Social Health Activities
- e) None of these

Q.103. Who has written the book, 'My Country, My Life'?

- a) L.K.Advani
- b) Manmohan Singh
- c) Sonia Gandhi
- d) AtalBihariBajpai
- e) None of these

Q.104. Which commodity has been exempted from import duty to contain inflation?

- a) Rice
- b) Cotton
- c) Wheat
- d) Agriculture Product
- e) None of these

Q.105. What is the name of the British born science fiction writer who died recently?

- a) Evans D
- b) Arthur C. Clarke
- c) Hair Stone
- d) Linker
- e) None of these

Q.106. CENVAT is related to -

- a) Excise Duty
- b) Custom Duty

- c) Sales Tax
- d) Service Tax
- e) None of these

Q.107. Which is the first state in the country to have introduced free chemotherapy treatment to cancer patients?

- a) Delhi
- b) Kerala
- c) Assam
- d) West Bengal
- e) None of these

Q.108. Which of the following statements is/are **TRUE** about the Economic Survey 2007-08?

- (A) The survey focus on only two key factors growth and inflation.
 - (B) The growth rate for the year 2007-08 will be at 8.7 percent.
 - (C) The survey lays stress on improved delivery mechanisms for the success of programs such as the NREGP.
 - (D) The Govt. has capped fuel prices, raising the cost from 1.8 percent to 2.7 percent in the last 12 months.
- a) Only B
 - b) A,B and C
 - c) A and D
 - d) All are true
 - e) None of these

Q.109. Fahmida Mirza is recently elected as the Speaker of National Assembly. With which country is she related to?

- a) Sri Lanka
- b) Pakistan
- c) Afghanistan
- d) Iran
- e) None of these

Q.110. Which is the most liquid measure of money supply?

- a) M2
- b) M3
- c) M1
- d) M4
- e) None of these

Q.111. The Union Cabinet has approved a proposal to increase the number of judges (including the chief justice) in the Supreme Court from 26 to -

- a) 31
- b) 30
- c) 32
- d) 33
- e) None of these

Q.112. Which bank has decided to acquire Centurion Bank of Punjab, which will be the biggest financial sector takeover in the country?

- a) ICICI Bank
- b) HDFC Bank
- c) Bank of India
- d) Punjab National Bank
- e) None of these

Q.113. Which day is celebrated as Computer Literacy Day?

- a) 1 Dec.
- b) 10 Dec.
- c) 2 Dec.
- d) 22 Dec.
- e) None of these

Q.114. VAT is imposed–

- a) Directly on Consumer
- b) On first stage of production
- c) On final stage of production
- d) On all stages between production and final sale
- e) None of these

Q.115. Who has been awarded with the Vyas Samman-2007?

- a) Pankaj Bisht
- b) Krishna Sobati
- c) Ashok Vajpai
- d) MannuBhandari
- e) None of these

Q.116. Which of the following statements is/are **TRUE** about the recent visit of Victor Zubkov to India?

(A) The two sides signed two MoUs on cooperation in law enforcement on taxation matters and on archiving.

(B) Russian PrimeMinister Victor Zubkov and PrimeMinister Manmohan Singh inaugurated the "Year of Russia" in India.

(C) Both agreed to more than double their trade to \$ 10 billion by 2010.

- a) Only B
- b) Only C
- c) A and C
- d) All are true
- e) None of these

Q.117. Which of the following statements is **TRUE** for International Monetary Fund?

- a) It is not an agency of UNO.
- b) It grants loan only to member nations.
- c) It can grant loan to any country of the World.
- d) It can grant loan to state govt. of a country.
- e) None of these

Q.118. Which sector shows the lowest growth rate during 2007-08?

- a) Agriculture
- b) Service Sector
- c) Industry
- d) All are equal
- e) None of these

Q.119. What is the name of the first woman head of the US-India Business Council (USIBC)?

- a) Kiran Majumdar Shaw
- b) Naina Lal Kidwai
- c) Indra Nooyi
- d) Chanda Kochar
- e) None of these

Q.120. By which govt. the Infosys mentor N.Narayanmurthy was conferred for "The Officer of The Legion of The Honour"?

- a) USA
- b) Russia
- c) China
- d) France
- e) None of these

Q.121. Bobby Fisher, who died recently, was related to -

- a) Badminton
- b) Golf
- c) Chess
- d) Cricket
- e) None of these

Q.122. In which of the following banks one cannot open one's account?

- a) RBI
- b) Regional Rural Bank
- c) Scheduled Commercial Bank
- d) Urban Co-operative Bank
- e) None of these

Q.123. Which state has been selected by The Union Government for the National Tourism Award (2007-08) in the "Best Tourism Performing State/UT" category?

- a) Madhya Pradesh
- b) Tamil Nadu
- c) Rajasthan
- d) Uttar Pradesh
- e) None of these

Q.124. Which of the following is not a quantitative measure for credit control?

- a) SLR Variation
- b) Open Market Operations
- c) Bank Rate

- d) Margin Requirements for Debts
- e) None of these

Q.125. With which Commission Sam Pitroda is related to?

- a) Planning Commission
- b) National Knowledge Commission
- c) Nanavati Shah Commission
- d) Lingdoh Committee
- e) None of these

Q.126. Which of the following statements is/are **TRUE** about the 6th Pravasi Bhartiya Divas?

- (A) Prime Minister of India, Manmohan Singh inaugurated this meet in New Delhi on January 08, 2008.
 - (B) He announced setting up of a Prime Minister's Global Advisory Council of People of Indian Origin.
 - (C) The theme of this meet was "Engaging the Diaspora- theWay Forward".
 - (D) The P.M. of Mauritius Navin Chandra Ram Goolam was the Chief Guest of this meet.
- a) A and B
 - b) C and D
 - c) A, C and D
 - d) All are true
 - e) None of these

Q.127. Which of the following statements is/are **TRUE** about 'DhanLaxmi'?

- a) It is a new policy of LIC for the girl child.
- b) It is a conditional cash transfer scheme for the girl child launched by Union Government.
- c) Under this U P Government give financial support to SC girls.
- d) Delhi govt. starts this programme for self defence of girls.
- e) None of these

Q.128. Who is elected as a new President of Sahitya Akademi?

- a) Sunil Gangopadhyay
- b) Shubhasheesh Gangopadhyay
- c) Shiv Shankar Mukherjee
- d) Rajiv Chandrashekhar
- e) None of these

Q.129. How much percent TRAI has recommended for raising the foreign investment limit in News Channels and FM Radio?

- a) 26%
- b) 49%
- c) 51%
- d) 55%
- e) None of these

Q.130. Which of the following city has overtaken Mumbai as the most populous metropolis in the country?

- a) Hyderabad
- b) Chennai
- c) Bangalore

- d) Delhi
- e) None of these

Q.131. Who has been appointed as the new CEO of the ICC?

- a) Imtiaz Patel
- b) Sharad Pawar
- c) Haroon Lorgat
- d) Ahsan Mani
- e) None of these

Q.132. With which game the Deodhar Trophy is associated?

- a) Athletics
- b) Cricket
- c) Football
- d) Golf
- e) None of these

Q.133. Which of the following statements is/are **TRUE** about the Supreme Court decision on reservation of OBC's in the higher education?

(A) The Supreme Court has upheld the law enacted by the centre in 2006 providing a quota of 27 percent for candidates belonging to the Other Backward Classes in central higher educational institutions.

(B) But it directed the governments to exclude the 'Creamy Layer' among the OBC's while implementing the law.

(C) The institutions will include the Indian Institutes of technology and the Indian Institutes of Management.

- a) Only A
- b) Only B
- c) B and C
- d) All are true
- e) None of these

Q.134. Where will be the Commonwealth Games held in 2010?

- a) Pakistan
- b) India
- c) China
- d) Japan
- e) None of these

Q.135. Silvio Berlusconi has been re-elected as the Prime Minister of -

- a) Italy
- b) Spain
- c) Peru
- d) Fiji
- e) None of these

Q.136. The Office application that enables you to create documents such as letters and reports is called _____.

- a) Microsoft Excel

- b) Microsoft Access
- c) Microsoft Word
- d) Microsoft PowerPoint
- e) Microsoft Internet Explorer

Q.137. The Office application that enables you to create slides, outline, speaker's gate, and audience handouts is called _____.

- a) Microsoft Excel
- b) Microsoft Access
- c) Microsoft Word
- d) Microsoft PowerPoint
- e) Microsoft Internet Explorer

Q.138. The Office schedule/organization application is called _____.

- a) Microsoft PowerPoint
- b) Microsoft Publishing
- c) Microsoft Outlook
- d) Microsoft Internet Explorer
- e) Microsoft FrontPage

Q.139. The quickest and easiest way to save and print documents is by using the

- a) Menu bar
- b) options window
- c) toolbar
- d) taskbar
- e) None of these

Q.140. Click the _____ button to open a blank document with default settings.

- a) File Menu
- b) New
- c) Edit Menu
- d) ToolMenu
- e) Format Menu

Q.141. Use the _____ key to remove characters to the left of the insertion point.

- a) Backspace
- b) Delete
- c) Shift
- d) Ctrl
- e) None of these

Q.142. you can find the Cut, Copy, and Paste buttons on the _____ toolbar.

- a) Status
- b) Standard
- c) Formatting
- d) Task
- e) None of these

Q.143. Pressing _____ means removes the character to the right of the insertion point.

- a) Backspace
- b) Delete
- c) Shift
- d) Ctrl
- e) None of these

Q.144. The _____ is the temporary storage place in memory.

- a) Clipview
- b)clip graphic
- c) Clipart
- d) Clipboard
- e) None of these

Q.145. If you owned a large business that handled millions of pieces of information a day, which computer would you use?

- a)Microcomputer
- b) Minicomputer
- c) Mainframe Computer
- d) Super Computer
- e) None of these

Q.146. A machine that prints letters, numbers, and symbols on paper from the computer.

- a) Keyboard
- b) Printer
- c) Disk Drive
- d) Video Monitor
- e) None of these

Q.147. The machine that looks like a typewriter. It is used to type words, numbers, and symbols. It gives the computer information and instructions.

- a) Keyboard
- b) Printer
- c) Disk Drive
- d) Floppy Disk
- e) Video Monitor

Q.148. The temporary memory of the computer is called—

- a)ROM
- b) RAM
- c) CPU
- d)MDII
- e) None of these

Q.149. Which option would you use to print information or graphics in the top margin of your page?

- a)Footer
- b)Page break
- c)Header

- d) Hard return
- e) None of these

Q.150. The size of a font is measured in _____.

- a) Fonts
- b) Points
- c) Single
- d) Portrait orientation
- e) Alignment

TEST - IV

ENGLISH LANGUAGE

Read the following passage carefully and answer the questions given below it. Certain words are printed in bold to help you to locate them while answering some of the questions.

There is absolutely no point in complaining that over the years, there has been pressure for increased productivity and higher earnings for workers in industry. There are several ways of increasing employees' earnings. Employee earnings can be increased by raising the selling price of the firm's products and services, reducing profits or costs of raw materials, or augmenting labour productivity. However, increasing employee earnings by means other than increased labour productivity **jeopardizes** the firm's competitive strength in the market. Higher prices usually mean fewer customers, reduced profit means less capital investment, and low-cost materials mean poor product quality. But, increasing labour productivity by enhancing skills and motivation creates an almost unlimited resource. The development of economic resources, human as well as nonhuman, is the product of human effort, and the quality of human effort in large part depends on human motivation.

Enthusiasm of employees with workaholic spirit through traditional authority and financial incentives has become increasingly difficult as employees become economically secure and their dependency on any one particular organization decreases. According to expectancy theorists, the motivation to work increases when an employee feels his performance is an instrument for obtaining desired rewards. Nevertheless, in many organizations today employees are entitled to organizational rewards just by being employed. Unions, governmental regulations, and the nature of the job itself in some cases prevent management from relating financial rewards to performance. People may be attracted to join and remain in organizations to receive organizational rewards, but being motivated to join an organization is not the same as being motivated to exert effort in an organization. The challenge to management is to find and administer alternative forms of incentives which will **induce** employees to improve work performance. Such alternative forms of reinforcement will require increased understanding of motivational theories and programs.

Q.151. Which of the following statements is **TRUE** in the context of the passage?

- a) Development of economic resources is primarily the product of market conditions
- b) Earnings can be increased by lowering the selling price of products.
- c) Employees can be best motivated by providing financial incentives.
- d) All employees should be entitled to organizational rewards just by being employed
- e) None of these

Q.152. Organizations can derive maximum advantages by — — — —

- a) Providing financial incentives to employees regardless of performance
- b) Enhancing labour productivity by increasing skills and motivation
- c) Encouraging employees to expend greater physical energy

- d) Inducing employees to improve work performance and control their demands
- e) Strictly adhering to governmental regulations

Q.153. According to the passage, all of the following contribute to an increase in employee earnings **EXCEPT**—

- a) Increasing the selling price of the company's products
- b) Reducing profits in favour of employees
- c) Providing incentives and fringe benefits to employees
- d) Enhancing labour productivity
- e) Increased capital investment

Q.154. Employees feel motivated to work when they— — — —

- a) Experience good working conditions in the organization
- b) Decide to produce goods and services as a result of team work
- c) Think of performance as a tool for obtaining rewards
- d) Relate rewards to material prosperity
- e) Are members of the union

Q.155. Choose the word which is **MOST SIMILAR** in meaning as the word **induce** as used in the passage.

- a) Appreciate
- b) Stimulate
- c) Exhibit
- d) Inflate
- e) Threaten

Q.156. Which of the following factors, according to the passage, adversely affects the organization's competitive strength?

- a) Making rewards contingent on performance
- b) Anti-productivity and anti-management activities of labour unions
- c) Motivating employees with traditional authority
- d) Increasing employee earnings regardless of their productivity.
- e) None of these

Q.157. Which of the statements is/are **not true** in the context of the passage?

- (A) Human effort is the cause of the development of economic resources.
- (B) Management is free to relate financial rewards to performance.
- (C) Employees can be easily motivated with traditional authority today.
- a) Both (A) and (B)
- b) Only (C)
- c) Both (A) and (C)
- d) Both (B) and (C)
- e) None of these

Q.158. Which of the following factors determine the quality of human efforts?

- a) Desire and willingness of an individual to excel in whatever he undertakes
- b) Economic resources available with the organization
- c) The individual's innovativeness
- d) Authoritarian leadership and job security.

e) None of these

Q.159. In the context of the passage, a company's competitive strength in the market is affected mainly because of— — —

- (A) A slump in the international market.
 - (B) Poor inter-departmental coordination.
 - (C) Decreased labour productivity.
- a) Only (A)
 - b) Only (B)
 - c) Only (C)
 - d) Both (B) and (C)
 - e) None of these

Q.160. Which of the following words is **most opposite** in meaning of the word 'jeopardizes' as used in the passage?

- a) Safeguards
- b) Endangers
- c) Projects
- d) Devalues
- e) Decreases

One of the four words given in each of these questions may be wrongly spelt. The number of that wrongly spelt is the answer. If all the four words are correctly spelt, mark e) i.e. 'All Correct' as the answer.

Q.161.

- a) defamation
- b) arrogant
- c) solitude
- d) exorbitant
- e) All Correct

Q.162.

- a) decompose
- b) veteran
- c) venturesome
- d) definition
- e) All Correct

Q.163.

- a) wastefull
- b) prejudice
- c) expensive
- d) embarrassing
- e) All Correct

Q.164.

- a) significant
- b) possessive

- c) impatient
- d) device
- e) All Correct

Q.165.

- a) prosperous
- b) glumy
- c) dormant
- d) derogatory
- e) All Correct

Read each sentence to find out if there is any error in it. The error, if any will be in one part of the sentence. The number of that part is the answer. If there is no error, the answer is e) i.e. 'No error'. (Ignore the errors of punctuation, if any).

Q.166. He gave me all the details of when he a) / had visited all the temples b) / while he will be going c) / on official tour. d) / No error e).

Q.167. Let's all work a) / together as like homogeneous b) / group so that c) / success would be obvious. d) / No Error e).

Q.168. The process was so simple a) / and easy to understand b) / that it hardly took c) / five minutes for us to learn it. d) / No Error e).

Q.169. It is strange that a) / even after fifteen years of experience, b) / he is still not c) / able to be performed d) / No Error e).

Q.170. What to make people a) / tense is actually b) / a mystery, which c) / is difficult to unfold. d) / No Error e).

Rearrange the following six sentences (A), (B), (C), (D), (E) and (F) in the proper sequence to form a meaningful paragraph; then answer the questions given below them.

- (A) The insurance policy has to be deposited with NABARD.
- (B) I intend to purchase a tractor and certain other agricultural equipment.
- (C) I shall therefore feel obliged if you send your representative to inspect the equipment's.
- (D) I shall be applying for a loan of Rs. six lakhs from NABARD for that purpose.
- (E) On completion, your representative may kindly inform me of the annual insurance premium.
- (F) The rules state that the equipments have to be insured against accidents and fire.

Q.171. Which of the following will be the **SIXTH (LAST)** sentence after rearrangement?

- a) A
- b) B
- c) C
- d) D
- e) E

Q.172. Which of the following will be the **FOURTH** sentence after rearrangement?

- a) A
- b) B

- c) C
- d) D
- e) E

Q.173. Which of the following will be the **FIFTH** sentence after rearrangement?

- a) A
- b) B
- c) C
- d) D
- e) E

Q.174. Which of the following will be the **SECOND** sentence after rearrangement?

- a) A
- b) B
- c) C
- d) D
- e) E

Q.175. Which of the following will be the **FIRST** sentence after rearrangement?

- a) A
- b) B
- c) C
- d) D
- e) E

In each question below a sentence with four words printed in **bold** type is given. These are numbered as a), b), c) and d). One of these four **boldly** printed words may be either **wrongly spelt or inappropriate** in the context of the sentence. Find out the word which is wrongly spelt or inappropriate, if any. The number of that word is your answer. If all the words printed in **bold** are correctly spelt and also are appropriate in the context of the sentence, mark e) i.e. 'All Correct as your answer.

Q.176. Some people think that their life is full of **grief** and **miseries** too **grievous** to be **born**. All Correct

- a)grief
- b)miseries
- c)grievous
- d)born
- e) All correct

Q.177. The **opinion expressed** is based only on our **transactions** with the party **concerns**. All Correct

- a)opinion
- b)expressed
- c)transactions
- d)concerns
- e) All correct

Q.178. I was **surprised** when I got **confirmation** of the news that he was the **recipient** of the **prestigious** award.

- a)surprised

- b)confirmation
- c)recipient
- d)prestigious
- e) All correct

Q.179. The **circumstances** in which the **claim** was made are **certainly unbelievable**. All Correct

- a)circumstances
- b)claim
- c)certainly
- d)unbelievable
- e) All correct

Q.180. The **authorities** always request our **assistance** whenever they **felt** they **require** it. All Correct

- a)authorities
- b)assistance
- c)felt
- d)require
- e) All correct

In each question below, a part is printed in **bold**. It may contain an error. If so, find out which of the phrases a), b), c) and d) given below should replace the part printed in **bold** in the following sentence to make the sentence grammatically meaningful and correct. If the sentence is correct as it is and 'no correction is required', mark e) as the answer.

Q.181. When they **start investigating**, several irregularities were detected.

- a)started investigate
- b)started an investigation
- c)start investigation
- d)started off investigation
- e) No correction required

Q.182. You **must be stopped** these undesirable activities immediately.

- a)must have been stopped
- b)may have been stopped
- c)might have been stopped
- d)must stop
- e) No correction required

Q.183. Farmers in our country suffer because of an over dependence on rain and the **threat to natural calamities** like floods.

- a)threat of natural calamities
- b)threat against natural calamities
- c)threatened due to natural calamity
- d)natural calamities threatened
- e) No correction required

Q.184. Automation in agriculture and farm management is considered a boon but in fact, it is not true as **they lid to more unemployment**.

- a)it lids to more employment

- b)they lead to more employment
- c)they lead to more unemployment
- d)it leads to more unemployment
- e) No correction required

Q.185. The agricultural sector **deserves more attention** than the industrial sector in our country.

- a)deserves attentionmore
- b)deservingmore attention
- c)deservemore attention
- d)deserve to be attendedmore
- e) No correction required

In the following passage there are blanks each of which has been numbered. These numbers are printed below the passage and against each five words are suggested one of which fits the blank appropriately. Find out the appropriate word in each case.

Some of India's largest companies have begun opening the **(186)** of what they say will be thousands of new supermarkets across the country in the next few years. At the same time foreign retail chains are **(187)** to enter themarket through joint ventures and by **(188)** the government to change protectionist laws so that they can set up wholly owned chains. The opportunities are **(189)**-McKinsey Global Institute estimates that India's retail market will be **(190)** \$1.52 trillion by 2025 and the food and beverage category will account for 25 percent of all retail spending in twenty years. Building new stores to **(191)** that demand is easy. The difficulty lies in supplying them with fresh, safe and clean fruits and vegetables through a **(192)** chain that links farms and consumers, country and cities. It is here that the real revolution lies. At **(193)** India has one of the most fragmented supply chains in theworld.On an average goods pass through six or seven middle men before a consumer can buy it. **(194)**, in tortuous journeys and poor quality. Replacing that system requires not just building a modern efficient network but **(195)** it to Indian conditions.

Q.186.

- a) Economical
- b) Initial
- c) First
- d) Ideal
- e) Premium

Q.187.

- a) Pressing
- b) Arrived
- c) Urgent
- d) Intent
- e) Pursuing

Q.188.

- a) Inviting
- b) Threatening
- c)Warning
- d)Campaigning
- e) Lobbying

Q.189.

- a) Local
- b) Immense
- c) Mysterious
- d) Remote
- e) Greatest

Q.190.

- a) Depleted
- b) Priced
- c) Valued
- d) Worth
- e) Account

Q.191.

- a) Create
- b) Generate
- c) Experience
- d) Saturate
- e) Meet

Q.192.

- a) Rigid
- b) Elaborated
- c) Sophisticated
- d) Routine
- e) Flexible

Q.193.

- a) Moment
- b) Present
- c) Current
- d) Last
- e) Par

Q.194.

- a) Investing
- b) Filling
- c) Dealing
- d) Resulting
- e) Allowing

Q.195.

- a) Adapting
- b) Adhering
- c) Complying
- d) Adopting
- e) Attaching

In each of the following questions five words are given which are denoted by (A),(B),(C),(D) and (E). By using all the five words, each only once, you have to frame a meaningful and grammatically correct sentence. The correct order of the words is your answer. Choose from the five alternatives the one having the correct order of words and mark it as your answer on the answer sheet.

Q.196. A. he B. up C. has D. to E. woken F. reality

- a) CADFEP
- b) ACEBDF
- c) BDFACE
- d) FCEBDA
- e) BDEACF

Q.197. A.now B. she C. formal D. should E. charge F. take

- a) BDCFEA
- b) BDAFCE
- c) ABFDCE
- d) ABEDCF
- e) CDEABF

Q.198. A. emerged B. leverage C. greater D. the E. party F. with

- a) BDAFCE
- b) DAFBCE
- c) DEAFCE
- d) EAFDCB
- e) AFCBDE

Q.199. A. to B. strike C. were D. unable E. alliances F. they

- a) ABEFCD
- b) FCDABE
- c) ACDBFE
- d) BFEACD
- e) FCEDAB

Q.200. A. turbine B. prices C. event D. the E. fell F. after

- a) DABEFC
- b) BEFDCA
- c) BAEDCF
- d) ABCDEF
- e) ABEFDC

ANSWERS

Q.1	D	Q.5	D	Q.9	E	Q.13	B
Q.2	B	Q.6	C	Q.10	D	Q.14	E
Q.3	A	Q.7	D	Q.11	D	Q.15	A
Q.4	E	Q.8	B	Q.12	C	Q.16	D

Q.17	E	Q.58	D	Q.99	A	Q.140	B
Q.18	B	Q.59	C	Q.100	C	Q.141	A
Q.19	A	Q.60	A	Q.101		Q.142	B
Q.20	E	Q.61	A	Q.102		Q.143	B
Q.21	D	Q.62	D	Q.103	A	Q.144	D
Q.22	B	Q.63	B	Q.104		Q.145	C
Q.23	B	Q.64	D	Q.105	B	Q.146	B
Q.24	B	Q.65	D	Q.106	A	Q.147	A
Q.25	B	Q.66	D	Q.107	C	Q.148	B
Q.26	E	Q.67	E	Q.108		Q.149	C
Q.27	A	Q.68	E	Q.109	B	Q.150	B
Q.28	E	Q.69	E	Q.110	A	Q.151	D
Q.29	A	Q.70	A	Q.111		Q.152	A
Q.30	E	Q.71	B	Q.112	B	Q.153	B
Q.31	D	Q.72	D	Q.113	C	Q.154	C
Q.32	A	Q.73	A	Q.114		Q.155	C
Q.33	B	Q.74	E	Q.115	E	Q.156	B
Q.34	D	Q.75	C	Q.116		Q.157	C
Q.35	A	Q.76	D	Q.117		Q.158	C
Q.36	C	Q.77	B	Q.118		Q.159	A
Q.37	E	Q.78	E	Q.119	C	Q.160	D
Q.38	A	Q.79	C	Q.120	D	Q.161	B
Q.39	B	Q.80	A	Q.121	C	Q.162	C
Q.40	D	Q.81	E	Q.122		Q.163	D
Q.41	C	Q.82	B	Q.123	A	Q.164	D
Q.42	A	Q.83	C	Q.124		Q.165	A
Q.43	B	Q.84	D	Q.125	B	Q.166	D
Q.44	C	Q.85	E	Q.126		Q.167	B
Q.45	B	Q.86	D	Q.127		Q.168	C
Q.46	D	Q.87	A	Q.128	A	Q.169	A
Q.47	B	Q.88	A	Q.129		Q.170	B
Q.48	C	Q.89	C	Q.130		Q.171	C
Q.49	B	Q.90	B	Q.131	C	Q.172	B
Q.50	D	Q.91	E	Q.132	B	Q.173	E
Q.51	C	Q.92	A	Q.133		Q.174	C
Q.52	E	Q.93	B	Q.134	B	Q.175	B
Q.53	B	Q.94	C	Q.135	A	Q.176	A
Q.54	A	Q.95	D	Q.136	C	Q.177	D
Q.55	D	Q.96	B	Q.137	D	Q.178	A
Q.56	E	Q.97	D	Q.138	C	Q.179	C
Q.57	C	Q.98	E	Q.139	D	Q.180	C

Q.181	B	Q.186	D	Q.191	E	Q.196	A
Q.182	D	Q.187	B	Q.192	B	Q.197	E
Q.183	A	Q.188	-	Q.193	D	Q.198	B
Q.184	D	Q.189	E	Q.194	D	Q.199	D
Q.185	B	Q.190	A	Q.195	C	Q.200	C