

TEST I

REASONING

Q.1-2. Study the given information carefully and answer the given questions :

Sunil started walking from point A. He walked 6 meters towards East to reach point B. From point B he took a right turn and walked 3 meters to reach point C. From point C he took a right turn and walked 10 meters to reach point D. From point D he took a left turn and walked 4 meters to reach point E. From point E, he walked 4 meters East to reach point F. Point G is exactly mid-way between point C and point D.

Q.1. If Sunil walks 4 meters to the North of point F, how far and in which direction will he be from point G ?
 (1) 1 meter towards East (2) 2 meters towards East (3) 1 meter towards West
 (4) 2 meters towards West (5) 1.5 meters towards East

Q.2. How far and in which direction is point F from point A ?
 (1) 7 meters towards North (2) 6 meters towards South (3) 8 meters towards South
 (4) 6 meters towards North (5) None of these

Q.3. Four of the following five are alike in a certain way and hence form a group. Which of the following does not belong to that group ?
 (1) Think (2) Reflect (3) Speak (4) Consider (5) Ponder

Q.4. How many such pairs of letters are there in the word BARGAINED, each of which has as many letters between them in the word (in both forward and backward directions) as they have between them in the English alphabetical series ?
 (1) Two (2) Three (3) None (4) One (5) More than three

Q.5-7. Study the given information carefully and answer the given questions :

In a group of six people, P, Q, R, S, T and U, each having a different weight, S is heavier than Q. R is lighter than only T and P. Q is not the lightest. P is not the heaviest.

Q.5. Who amongst the following is the lightest ?
 (1) T (2) P (3) R (4) U (5) None of these

Q.6. Who amongst the following is the second heaviest ?
 (1) R (2) S (3) U (4) T (5) P

Q.7. How many people are lighter than S ?
 (1) None (2) Three (3) Two (4) More than three (5) One

Q.8. Which of the following will come next in the following series ?
 9 1 9 8 2 9 8 7 3 9 8 7 6 4 9 8 7 6 5 5 9 8 7 6 5 4 6 9 8 7 6 5 4
 (1) 7 (2) 8 (3) 3 (4) 2 (5) 4

Q.9. Which of the following will come in the place of the question mark (?) in the following series based on the English alphabetical order ?
 ZA BY XC DW ?
 (1) VF (2) EU (3) UE (4) EV (5) VE

Q.10. Fifteen girls are standing in a straight line facing North. Sudha is standing eleventh from the right end. Radha is standing ninth from the left end. Meena is standing exactly between Sudha and Radha. How many girls are standing to the right of Meena ?
 (1) Eight (2) Seven (3) Nine (4) Six (5) Cannot be determined

Q.11-15. Study the given information carefully and answer the given questions :

Eight people P, Q, R, S, T, U, V and W are sitting around a circular table facing the centre not necessarily in the same order. T is sitting third to the right of P. W is sitting second to the right of S. S is not an immediate neighbour of either P or T. U and Q are immediate neighbours of each other. Q is not an immediate neighbour of P. V is not an immediate neighbour of W.

Q.11. What is R's position with respect to V ?
 (1) Second to the left (2) Second to the right (3) Third to the right
 (4) Third to the left (5) None of these

- Q.12.** Four of the following five are alike in a certain way based on their seating positions in the above arrangement and so form a group. Which one does not belong to the group ?
 (1) RQ (2) PV (3) TP (4) US (5) WT
- Q.13.** Who is sitting second to the right of the one who is sitting to the immediate right of W ?
 (1) U (2) R (3) V (4) P (5) Q
- Q.14.** How many people are sitting between U and W when counted from the left side of U ?
 (1) Three (2) None (3) More than three (4) Two (5) One
- Q.15.** Who is sitting exactly between T and S ?
 (1) U (2) Q (3) W (4) V (5) R
- Q.16-20.** In each of the questions below, two statements are given followed by two conclusions numbered I and II. You have to take the two statements to be true even if they seem to be at variance from the commonly known facts and then decide which of the given conclusions logically follows from the given statements disregarding the commonly known facts.
- Give answer (1) if only conclusion I follows.
 Give answer (2) if only conclusion II follows.
 Give answer (3) if either conclusion I or II follows.
 Give answer (4) if neither conclusion I nor II follows.
 Give answer (5) if both conclusions I and II follow.
- Q.16.** Statements : All stones are pebbles. All pebbles are rocks.
 Conclusion : I. All stones are rocks.
 II. All rocks are pebbles.
- Q.17.** Statements : All kings are rulers. Some rulers are queens.
 Conclusion : I. Some kings are queens.
 II. Atleast some queens are rulers.
- Q.18.** Statements : Some gardens are parks. Some parks are areas.
 Conclusion : I. Atleast some areas are parks.
 II. No garden is an area.
- Q.19.** Statements : No letter is a fax. All messages are faxes.
 Conclusion : I. No message is a letter.
 II. Atleast some faxes are messages.
- Q.20.** Statements : Some boards are plains. No plain is a square.
 Conclusion : I. All squares are boards.
 II. All plains are boards.
- Q.21-25.** Study the given information carefully and answer the given questions :
- Eight people – A, B, C, D, E, F, G and H are sitting in a straight line facing North not necessarily in the same order. F is sitting fifth to the right of A. D is sitting fifth to the right of E. E is to the immediate right of A. H is third to the left of D, B is third to the right of G. G is an immediate neighbour of A.
- Q.21.** What is E's position with respect to C ?
 (1) Second to the left (2) Third to the right (3) Fourth to the right
 (4) Third to the left (5) None of these
- Q.22.** Who is sitting third to the right of the one who is sitting sixth from the right end of the above arrangement ?
 (1) D (2) C (3) E (4) H (5) None of these
- Q.23.** Who amongst the following are sitting at the extreme ends of the line ?
 (1) G and D (2) A and D (3) G and F (4) E and D (5) A and B

- Q.24.** Four of the following five are alike in a certain way based on their seating positions in the above arrangement and so form a group. Which one does not belong to the group ?
 (1) HD (2) BE (3) EC (4) AH (5) GB
- Q.25.** If all eight persons are asked to sit in an alphabetical order from right to left, the positions of how many will remain unchanged as compared to their original seating position ?
 (1) Three (2) More than three (3) One (4) Two (5) None
- Q.26-30.** In these questions, relationships between different elements is shown in the statements. These statements are followed by two conclusions.

Give answer (1) if **only** conclusion I follows.
 Give answer (2) if **only** conclusion II follows.
 Give answer (3) if **either** conclusion I or conclusion II follows.
 Give answer (4) if **neither** conclusion I nor conclusion II follows.
 Give answer (5) if **both** conclusions I and II follow.

Q.26. Statements : $G \leq F = L \leq J$; $J \leq K = H$
 Conclusion : I. $H = G$
 II. $G < H$

Q.27. Statement : $P < R < S < T > U$
 Conclusion : I. $U < R$
 II. $T > P$

Q.28. Statements : $T > U \geq V > W$; $X < Y = W > Z$
 Conclusion : I. $Z > U$
 II. $W < T$

Q.29. Statements : $K < L < M < N$; $M < O < P$
 Conclusion : I. $P > K$
 II. $N > O$

Q.30. Statements : $B < A < C$; $A > D \leq E$
 Conclusion : I. $B \leq E$
 II. $C > E$

Q.31-40. In each of the questions given below which one of the five answer figures on the right should come after the problem figures on the left, if the sequence were continued ?

PROBLEM FIGURES

ANSWER FIGURES

Q.31.

MARINE	ENIRAM	NERIMA	ANERIP	PIRENA
--------	--------	--------	--------	--------

APIRET	ANERIP	IPERAN	RIPAEN	ERI PAN
--------	--------	--------	--------	---------

1 2 3 4 5

Q.32.

LLLLL LLLLL	LLLLL LLLLL	LLLLL LL	LLLLL L	LLLL
xx	xxx	xxxxx	xxxxxx	xxxxxx

LLL	LL	LLL	LL	L
xxxxx xxxxxx	xxxxx xxxxxx	xxxxxx xxxxxx	xxxxxx xxxxxx	xxxxxx xxxxxx

1 2 3 4 5

TEST II

NUMERICAL ABILITY

Q.41-55. What should come in place of the question mark (?) in the following questions ?

- Q.41. $417.25 - 41.72 - 4.53 = ?$
 (1) 380.06 (2) 371 (3) 348 (4) 315 (5) None of these
- Q.42. $896 - (?)^3 = 4608 \div 12$
 (1) 2 (2) 2^3 (3) 8^2 (4) 4^2 (5) 2^4
- Q.43. $273 \div 3 - 9.1 = ?$
 (1) 81.9 (2) 62.3 (3) 84.9 (4) 91.8 (5) None of these
- Q.44. $\sqrt{3969} \div 1.4 = ? \times 2.5$
 (1) 18 (2) 112.5 (3) 16 (4) 24 (5) None of these
- Q.45. $15.8 \times 3 + 8.1 - 21.5 = ? + 14.6$
 (1) 14.9 (2) 20.1 (3) 18.4 (4) 19.4 (5) None of these
- Q.46. $83^{27.3} \div 83^{1.4} \times 83^{49.8} = 83^{31.9 + ?}$
 (1) 64.1 (2) 41.9 (3) 40.8 (4) 39.1 (5) None of these
- Q.47. 43% of 586 = $341.2 - ?$
 (1) 76.28 (2) 49.53 (3) 82.99 (4) 48.96 (5) None of these
- Q.48. $(504.14 \div 14) \div 13 = ?$
 (1) 2.77 (2) 2.56 (3) 3.14 (4) 2.17 (5) None of these
- Q.49. $4431 + 431 - 31 = ?$
 (1) 4530 (2) 3969 (3) 4831 (4) 4031 (5) None of these
- Q.50. $2 \frac{13}{17} + \frac{4}{17} = ?$
 (1) 5 (2) 2.9 (3) 7 (4) 4 (5) None of these
- Q.51. $1001 + 96 \div 16 = ?$
 (1) 1108 (2) 996 (3) 1070 (4) 1007 (5) None of these

Q.52. $\frac{1}{5}$ of $\frac{2}{7}$ of $\frac{8}{3}$ of 4095 = ?
 (1) 642 (2) 598 (3) 648 (4) 475 (5) None of these

Q.53. 32% of 150 × 53% of ? = 7632
 (1) 480 (2) 324 (3) 300 (4) 298 (5) None of these

Q.54. 1767 = ? × 57
 (1) 27 (2) 31 (3) 39 (4) 37 (5) None of these

Q.55. $7^2 + 3^4 - 4^3 = ? - 11^2$
 (1) 55 (2) 196 (3) 172 (4) 187 (5) None of these

Q.56-60. What approximate value should come in place of the question mark (?) in the following questions ?
 (NOTE : You are not expected to calculate the exact value)

Q.56. $(10.97)^2 + (4.13)^3 \times 3.79 = ?$
 (1) 428 (2) 376 (3) 197 (4) 204 (5) 302

Q.57. 12.13% of 935.81 + 1498% of 25.85 = ?
 (1) 500 (2) 550 (3) 478 (4) 341 (5) 596

Q.58. $\sqrt[3]{65} \times 23.93 - 31.04 = ?$
 (1) 98 (2) 65 (3) 102 (4) 35 (5) 79

Q.59. 1624.12 × 3.891 = ?
 (1) 6100 (2) 6900 (3) 6000 (4) 6400 (5) 6500

Q.60. 3018.19 ÷ 2.87 - 841.02 = ?
 (1) 365 (2) 90 (3) 387 (4) 1000 (5) 200

Q.61-65. What should come in place of the question mark (?) in the following series ?

Q.61. 5 6 16 57 ? 1245
 (1) 244 (2) 148 (3) 296 (4) 271 (5) None of these

Q.62. 12 ? 168 504 1260 2520
 (1) 96 (2) 59 (3) 61 (4) 48 (5) None of these

Q.63. 4 9 29 ? 599 3599
 (1) 117 (2) 347 (3) 258 (4) 174 (5) None of these

Q.64. 177 170 159 146 ? 110
 (1) 132 (2) 106 (3) 129 (4) 127 (5) None of these

- Q.65. $2^3 \times 11 \times 38 \times 102 = ?$
 (1) 402 (2) 182 (3) 227 (4) 168 (5) None of these
- Q.66. On a particular day, sweets were to be equally distributed among 495 students of a school. However, on that particular day 396 students from a nearby school also joined them. Hence each student present on that day got four sweets less. How many sweets were distributed ?
 (1) 5445 (2) 4950 (3) 4455 (4) 3960 (5) None of these
- Q.67. A student requires 324 pencils in 6 years. How many dozen pencils will he require in 14 years ?
 (1) 52 (2) 64 (3) 59 (4) 62 (5) None of these
- Q.68. In how many different ways can the letters of the word 'REPLACE' be arranged ?
 (1) 2630 (2) 5040 (3) 1680 (4) 2580 (5) None of these
- Q.69. A particular sum was divided among A, B and C in the ratio 2 : 6 : 7 respectively. If the amount received by A was ₹ 4,908/-, what was the difference between the amounts received by B and C ?
 (1) ₹ 2,454/- (2) ₹ 3,494/- (3) ₹ 2,135/- (4) ₹ 2,481/- (5) None of these
- Q.70. The average of four consecutive even numbers P, Q, R and S respectively (in increasing order) is 51. What is the product of P & R ?
 (1) 2592 (2) 2400 (3) 2600 (4) 2808 (5) None of these
- Q.71. What is the least number to be added to 4523 to make it a perfect square ?
 (1) 101 (2) 34 (3) 238 (4) 121 (5) None of these
- Q.72. The product of two consecutive even numbers is 7568. What is 150% of the sum of the two numbers ?
 (1) 204 (2) 261 (3) 304 (4) 198 (5) None of these
- Q.73. Length of the floor of a rectangular auditorium is 6 m. more than the radius of a circle with a circumference of 572 m. The perimeter of the floor of the rectangular auditorium is 356 m. What will be cost of flooring the auditorium (only the floor of the auditorium), if the cost of flooring is ₹ 12/m² ?
 (1) ₹ 87,954/- (2) ₹ 91,236/- (3) ₹ 94,284/- (4) ₹ 75,490/- (5) None of these
- Q.74. A car covers a distance of 528 km. in a certain time at a speed of 66 km./hr. How much distance would a truck cover at an average speed which is 24 km./hr. less than that of the speed of the car in time which is 7 hours more than that taken by the car ?
 (1) 336 km. (2) 682 km. (3) 598 km. (4) 630 km. (5) None of these
- Q.75. The average age of a man and his son is 30 years. The ratio of their ages four years ago was 10 : 3 respectively. What is the difference between the present ages of the man and his son ?
 (1) 28 years (2) 16 years (3) 26 years (4) 44 years (5) None of these
- Q.76. What would be the compound interest obtained on an amount of ₹ 7,790/- at the rate of 10 p.c.p.a. after two years ?
 (1) ₹ 1532.60 (2) ₹ 1495.90 (3) ₹ 1653.50 (4) ₹ 1635.90 (5) None of these

TEST III

GENERAL AWARENESS

- Q.81. Which of the following is the Currency of Bahrain ?
(1) Peso (2) Dinar (3) Riyal (4) Baht (5) Kwacha
- Q.82. Which of the following organizations/bodies formulates the rule of international trade among/between the nations ?
(1) World Trade Organisation (2) Asian Development Bank
(3) International Monetary Fund (4) World Bank
(5) United Nations Development Programme
- Q.83. Which of the following services is provided only by the Reserve Bank of India ?
(1) Compilation of economic data (2) Issue of currency notes
(3) Purchase and sale of gold/gold coins (4) Sale of Demand Drafts
(5) Safe deposit lockers for keeping valuables
- Q.84. Which of the following Committees/Task force was set up to suggest reforms in Banking Sector ?
(1) Task force on Infrastructure (2) Narasimham Committee
(3) Rajinder Sachar Committee (4) Swaminathan Committee
(5) None of these
- Q.85. Pranab Mukherjee won the Presidential election against _____
(1) P. A. Sangma (2) Pratibha Patil (3) Hamid Ansari
(4) A P J Abdul Kalam (5) None of these
- Q.86. 'SEBI' Tightens Consent norms – was the headline in some papers/magazines recently. What is the full form of SEBI ?
(1) Secured Economy Bureau of India (2) Small Economy Based Investment
(3) Securities and Exchange Board of India (4) Severe Ecological Balance and Internet
(5) Society for Ecological Balance and Internet
- Q.87. Which of the following is the Capital of Australia ?
(1) Perth (2) Sydney (3) Hobart (4) Darwin (5) Canberra
- Q.88. Which of the following nations is NOT the member of OPEC ?
(1) Algeria (2) Iran (3) Libya (4) Qatar (5) France
- Q.89. Ms. Christine Lagarde is the _____
(1) Managing Director of the International Monetary Fund (IMF)
(2) President, World Bank (3) Secretary General of UNO
(4) Foreign Minister of Russia (5) None of these
- Q.90. Which of the following terms is used in the game of Football ?
(1) Baseline (2) Chop (3) Back Pass (4) Drop Shot (5) Grand Slam
- Q.91. Which of the following is a Public Sector Undertaking ?
(1) AXIS Bank (2) Reliance Power (3) Hindustan Motors
(4) Indian Oil Corporation Ltd. (5) Ambuja Cements
- Q.92. Ms. Hillary Clinton who was on a visit to India in May 2012 is the Secretary of State of _____
(1) Britain (2) France (3) USA (4) Germany (5) None of these
- Q.93. The 6th World Water Forum was organized in March 2012 in _____
(1) London (2) Tokyo (3) Perth (4) Berlin (5) Marseilles
- Q.94. Which of the following countries had launched a Spy Satellite Kobalt-M in May 2012 ?
(1) France (2) China (3) Iran (4) Russia (5) USA

- Q.95. Which of the following countries is the newest member of the FIFA ?
(1) South Sudan (2) Bangladesh (3) Brazil (4) Cuba (5) Chile
- Q.96. Which of the following is the name of a Patton Tank developed in India ?
(1) Agni (2) Arjun (3) Shakti (4) Basant (5) Pawan
- Q.97. Jim Yong Kim has taken over as the new President of _____
(1) World Bank (2) IMF (3) ADB (4) UNESCO (5) Bank of America
- Q.98. How many members are nominated by the President of India to the Rajya Sabha ?
(1) 5 (2) 6 (3) 8 (4) 9 (5) None of these
- Q.99. Which of the following is a food grain grown in India ?
(1) Rose (2) Mustard (3) Sunflower (4) Banana (5) Paddy
- Q.100. Dr. D. Subbarao is a well known name in the field of _____
(1) Science & Technology (2) Politics (3) Sports
(4) Banking (5) Literature
- Q.101. Viswanathan Anand is a world famous _____
(1) Cricket player (2) Chess player (3) Hockey player
(4) Golf player (5) Lawn Tennis player
- Q.102. Which of the following is decided by the RBI ?
(1) Interest rate on time deposits (2) Rent of safe deposit vaults
(3) Inflation Rate (4) Dearness Allowance to Govt. Employees
(5) Cash Reserve Ratio
- Q.103. Members of the Lok Sabha are elected for a period of _____
(1) 4 years (2) 5 years (3) 6 years (4) 3 years (5) 6 ½ years
- Q.104. Which of the following Acts ensures that every child gets school education ?
(1) RTI Act (2) RTE Act (3) Apprentice Act
(4) Govt. Grants Act (5) None of these
- Q.105. Which of the following books is written by Anita Desai ?
(1) Where Shall We Go This Summer (2) A General and His Army
(3) An Eye to China (4) Between Hope and History
(5) Coolie
- Q.106. Which of the following Awards is given to Cine persons for their life time achievement ?
(1) Saraswati Samman (2) Kalidas Samman (3) Arjuna Award
(4) Dada Saheb Phalke Award (5) Kirti Chakra
- Q.107. Common Wealth Games – 2014 will be organized in _____
(1) London (2) New Delhi (3) Glasgöw (4) Toronto (5) Wellington
- Q.108. Who among the following is a Cabinet Minister in Union Cabinet of India ?
(1) Sachin Pilot (2) Milind Deora (3) A. K. Antony (4) Rahul Gandhi (5) None of these
- Q.109. Which of the following statements is True about Rashtriya Swasthya Bima Yojana launched by the Govt. of India ?
(1) This scheme is only for children upto 14 years of age
(2) Scheme was launched in 1983 but was withdrawn in 2000
(3) In 12th Five Year Plan about 7 crore families will be provided insurance cover under the scheme
(4) All those who are above 60 will get an insurance cover of ₹ 10 lakh
(5) None of these
- Q.110. What does the letter 'C' denote in the term 'CBS' as used in banking operations ?
(1) Central (2) Critical (3) Commercial (4) Core (5) Capital

- Q.111. Who among the following is the Foreign Secretary of India at present ?
(1) Ajit Seth (2) S. K. Tripathi (3) Pulok Chatterjee
(4) Mukul Joshi (5) None of these
- Q.112. Who among the following was a famous author of Sanskrit language ?
(1) Kalidas (2) Mirabai (3) Tulsidas (4) Jaidev (5) Raskhan
- Q.113. Deepika Kumari's name is associated with. _____
(1) Swimming (2) Archery (3) Billiards (4) Golf (5) Cricket
- Q.114. Which of the following countries has imposed new sanctions on Iran and Syria ?
(1) India (2) Sri Lanka (3) Russia (4) USA (5) South Africa
- Q.115. Which of the following places in India **does not** have a nuclear power plant ?
(1) Narora (2) Rawatbhata (3) Silchar (4) Tarapore (5) Kalpakkam
- Q.116. Who among the following is from Trinamool Congress party ?
(1) Srikant Jena (2) Navin Jindal (3) Gurudas Dasgupta
(4) Dinesh Trivedi (5) Sanjay Nirupam
- Q.117. Which of the following terms is NOT associated with banking/finance ?
(1) RTGS (2) SLR (3) Repo Rate (4) Credit (5) LBW
- Q.118. Oscar Awards are given in the field of _____
(1) Economics (2) Social Service (3) Literature (4) Films (5) Sports
- Q.119. Which of the following Cups/Trophies is associated with the game of Cricket ?
(1) Ranji Trophy (2) Davis Cup (3) Thomas Cup (4) Nehru Trophy (5) Agha Khan Cup
- Q.120. Which of the following is a Union Territory of India ?
(1) Uttarakhand (2) Chandigarh (3) Himachal Pradesh
(4) Kerala (5) West Bengal

TEST IV

COMPUTER KNOWLEDGE

- Q.121. Computers process data into information by working exclusively with _____
(1) multimedia. (2) words. (3) characters. (4) numbers. (5) None of these
- Q.122. Which of the following memory chip is programmed during the manufacturing process ?
(1) RAM (2) ROM (3) PROM (4) EEPROM (5) None of these
- Q.123. A byte is a collection of _____
(1) Four bits (2) Six bits (3) Eight bits (4) Ten bits (5) Twelve bits
- Q.124. CD-ROM is an example of _____
(1) Input device (2) Output device (3) Both Input & Output
(4) Pointing Device (5) None of these
- Q.125. Volatility is a property of _____
(1) computer networks (2) ROM (3) disk
(4) software (5) RAM
- Q.126. Java is an example of a(n) _____
(1) machine language (2) assembly language (3) high-level language
(4) fourth generation language (5) None of these
- Q.127. Which of the following is not one of the four major data processing functions of a computer ?
(1) gathering data (2) processing data into information
(3) analyzing the data or information (4) storing the data or information
(5) None of these
- Q.128. The hardware device commonly referred to as the "brain" of the computer is the _____
(1) RAM chip. (2) data input. (3) CPU.
(4) secondary storage. (5) None of these
- Q.129. When the computer is working on given instructions, it is called _____
(1) output (2) storage (3) processing (4) input (5) None of these
- Q.130. An input device that is used widely in supermarkets is _____
(1) Keyboard (2) Mouse (3) Trackball
(4) Bar code reader (5) None of these
- Q.131. Producing output involves _____
(1) accepting information from the outside world. (2) communication with another computer.
(3) moving and storing information. (4) communicating information to the outside world.
(5) None of these

132. Compiler is the _____
(1) name given to the computer operator (2) part of the digital machine to store the information
(3) operator of Boolean Algebra (4) part of arithmetic logic unit
(5) translator of source program to object code
133. A computer program is _____
(1) A set of instructions that enable the computer to solve a problem or perform a task.
(2) Main memory (3) Pseudocode (4) A flow chart (5) None of these
134. _____ terminals (formerly known as cash registers) are often connected to complex inventory and sales computer systems.
(1) Data (2) Point-of-sale (POS) (3) Sales
(4) Query (5) None of these
135. _____ is a cross between human language and a programming language.
(1) Pseudocode (2) Java (3) The Java Virtual Machine
(4) The compiler (5) None of these
136. Viruses, Trojan horses and Worms are _____
(1) able to harm computer system (2) unable to detect if present on computer
(3) user-friendly applications (4) harmless applications resident on computer
(5) None of these
137. Computers gather data, which means that they allow users to _____ data.
(1) present (2) input (3) output (4) display (5) None of these
138. The components that process data are located in the _____
(1) input devices. (2) output devices. (3) system unit.
(4) storage component. (5) None of these
139. Software refers to _____
(1) The physical components that a computer is made of. (2) Firmware
(3) Programs (4) Peopleware (5) None of these
140. The shortcut key to print documents is _____
(1) Ctrl + D (2) Ctrl + A (3) Ctrl + B (4) Ctrl + C (5) Ctrl + P
141. In the binary language each letter of the alphabet, each number and each special character is made up of a unique combination of _____
(1) eight bytes. (2) eight kilobytes. (3) eight characters.
(4) eight bits (5) None of these
142. Graphical pictures that represent an object like file, folder etc. are _____
(1) Task bar (2) Windows (3) Desktop (4) Icons (5) None of these

- Q.143. Because of their size and cost, these computers are relatively rare _____
(1) minicomputers (2) mainframe computer (3) microcomputers
(4) laptops (5) supercomputers
- Q.144. RAM is an acronym for _____
(1) Read All Memory (2) Read Any Memory (3) Ready Access Memory
(4) Random Area Memory (5) Random Access Memory
- Q.145. This type of software works with end-users, application software, and computer hardware to handle the majority of technical details _____
(1) Communications software (2) Application software (3) Utility software
(4) System software (5) None of these
- Q.146. Special-purpose applications include all of the following except _____
(1) Web authoring programs (2) database management systems
(3) multimedia creation programs (4) virtual reality programs
(5) None of these
- Q.147. An object typically hides its data, but allows outside code to access _____
(1) The methods that operate on the data (2) The data files
(3) Private data members (4) The pseudocode
(5) None of these
- Q.148. A rectangular area on a computer screen that can contain a document, program, or messages is referred to as a(n) _____
(1) cell (2) window (3) tuplet (4) field (5) None of these
- Q.149. Specialized programs designed to allow particular input or output devices to communicate with the rest of the computer system are called _____
(1) compilers (2) device drivers (3) interpreters
(4) operating systems (5) None of these
- Q.150. This type of computer is the least powerful, yet the most widely used and fastest-growing type of computer _____
(1) mainframe computers (2) supercomputers (3) minicomputers
(4) microcomputers (5) None of these
- Q.151. Programs designed to perform specific tasks related to managing computer resources are called _____
(1) system software (2) operating system (3) application software
(4) utility programs (5) None of these
- Q.152. Of the following types of computers, which is the most powerful ?
(1) minicomputer (2) mainframe computer (3) supercomputer
(4) microcomputer (5) None of these

- Q.153.** The Internet service that provides a multimedia interface to available resources is called _____
(1) FTP (2) World Wide Web (3) Telnet
(4) Gopher (5) None of these
- Q.154.** Word processing software is used to create _____
(1) databases (2) documents (3) spreadsheets
(4) electronic slides (5) None of these
- Q.155.** A device that connects to a network without the use of cables is said to be _____
(1) distributed (2) cabled (3) centralized (4) open source (5) wireless
- Q.156.** Menus are a part of the _____
(1) hardware (2) user interface (3) Status Bar (4) monitor (5) None of these
- Q.157.** A program that is used to view Web sites is called a _____
(1) word processor (2) Web viewer (3) spreadsheet
(4) search engine (5) browser
- Q.158.** Which of the following is not an example of a document file ?
(1) spreadsheet (2) memo (3) letter (4) term paper (5) thesis
- Q.159.** Toolbars contain small outlined areas called _____ that provide shortcuts for quick access to commonly used commands.
(1) buttons (2) dials (3) bullets (4) pointers (5) None of these
- Q.160.** A business's customer, inventory, and payroll records would best be stored in a _____ file.
(1) database (2) document (3) worksheet (4) presentation (5) None of these

TEST V (A)

ENGLISH LANGUAGE

Q.161-170. Read the following passage carefully and answer the questions given below it. Certain words/phrases have been printed in bold to help you locate them while answering some of the questions.

Once upon a time there lived a stone cutter in a small village. He worked hard throughout the day, preparing the shapes that were ordered by his customers. His hands were rough and his clothes were dirty. One day he went to the mountain to cut a big stone. It was difficult to work as the weather was extremely hot. After working for several hours, he sat down in the shade of a nearby tree and soon fell asleep. After sometime, he heard the sound of a procession. He woke up and saw many soldiers and attendants walking in the sun, alongside the king who not only rode an elephant but also had an umbrella to **keep the sun away**. "How wonderful it must be to be a king", thought the stone cutter. He wondered how happy would he be if he were the king instead of a poor stone cutter. As he thought so, a **strange** thing happened. The stone cutter found himself dressed in silk clothes and shining jewels. His hands were soft and he was sitting on the elephant. He looked around at the attendants and thought, "how easy it is to **be a king**, these people are here to serve me." The procession moved on and the sun grew hotter.

The stone cutter, now the king, became too warm for comfort. He asked the procession to stop so that he could rest for some time. At once the chief of the soldiers bent before the king and said, "Your Majesty, this morning you swore to have me hanged to death if we did not reach the palace before the sun set." The stone cutter felt sorry for him and **let** the procession go on its way again. "I am powerful, it is true, but how more powerful the sun is. I would rather be the sun than a king", he thought. At once, he became the sun, shining down on the earth.

Its new power was hard to control. It shone too brilliantly and burned up the fields with its rays. But no matter how hard it shone, it could not see through the clouds. It was **evident** that the clouds were even stronger and more powerful than the sun. The sun wished that it would rather be a cloud. Suddenly it found itself turned into a huge dark cloud. It started using its new power. It poured rain down on the fields and caused floods. All the trees and houses were swept away but the boulder, which once it had been cutting when it was a stone cutter was unmoved and unchanged. No matter how hard it **poured down on the stone**, the stone did not move.

The cloud wondered, "That rock is more powerful than I am. Only a stone cutter could change the rock by his skill." No sooner had it said these words, he found himself sitting on a stone. He picked up his tools and began working.

Q.161-162. Choose the word / phrase which is **MOST SIMILAR** in **MEANING** to the word / phrase printed in bold as used in the passage.

Q.161. **KEEP THE SUN AWAY** (1) Maintain darkness (2) Delay the sunset (3) Block the sun
(4) Stock the shade (5) Enjoy little shade

Q.162. **EVIDENT** (1) Obvious (2) Transparent (3) Known (4) Public (5) Active

Q.163-165. Choose the word which is **MOST OPPOSITE** in **MEANING** to the word printed in bold as used in the passage.

Q.163. **LET** (1) Stopped (2) Punished (3) Allowed (4) Admitted (5) Disciplined

Q.164. **HARD** (1) Mockingly (2) Badly (3) Leisurely (4) Soft (5) Aimlessly

Q.165. **STRANGE** (1) Wonderful (2) False (3) Erratic (4) Orthodox (5) Usual

Q.166. Which of the following is the most appropriate title for the story ?
(1) The Stone cutter (2) The King's Procession (3) The power of nature
(4) Experiments of a king (5) A dream of a king

Q.167. Why could the king's procession not be stopped ?
(1) The king had promised the queen that he would reach the palace in time.
(2) It was getting dark and it was unsafe to halt.
(3) It was about to rain and the palace was close by.
(4) The soldiers were in a hurry to reach the palace as they were very hungry.
(5) None of these

Q.168. Why did the sun wish to become a cloud ?
(1) It wanted to cool down the earth by raining.
(2) It did not want to set in the evening and be visible even in the night.
(3) It assumed that the clouds were stronger than the sun.
(4) It wanted to wander in the sky like the clouds did.
(5) None of these

Q.169. What problem did the cloud face ?
(1) The cloud could not affect the boulder.
(2) The cloud had to rain all the time.
(3) The cloud brought about a huge flood for which it was punished by the king.
(4) The cloud needed the sun for its formation.
(5) None of these

Q.170. Why did the king desire to become the sun ?
(1) The sun was troubling the king and the king desired to take revenge.
(2) The king desired to be more powerful than he already was.
(3) The chief of the soldiers suggested the king to be the sun.
(4) The king would be able to live in the sky, once he were the sun.
(5) None of these

Q.171-175. In each question below a sentence with four words printed in bold type is given. These are numbered as (1), (2), (3) and (4). One of these four words printed in bold may either be misspelt or inappropriate in the context of the sentence. Find out the word which is wrongly spelt or inappropriate if any. The number of that word is your answer. If all the words printed in bold are correctly spelt and also appropriate in the context of the sentence, mark (5) i.e. 'All Correct' as your answer.

Q.171. The **need** to grow should not be mistaken for dissatisfaction with one's **current** state. All correct
(1) (2) (3) (4) (5)

Q.172. He lay in the bed to **rest**, and **within** no time dozed off to sleep. All correct
(1) (2) (3) (4) (5)

Q.173. It was **disapointing** to know that **despite** his best attempts, he had failed in the exam. All correct
(1) (2) (3) (4) (5)

Q.174. He was so **scared** after **watching** the **movie** that he didn't sleep for three nights after that. All correct
(1) (2) (3) (4) (5)

Q.175. Vijay had **always** been **keen** on **getting** as much education as he could. All correct
(1) (2) (3) (4) (5)

Q.176-180. Rearrange the following five sentences (A), (B), (C), (D) and (E) in a proper sequence so as to form a meaningful paragraph, and then answer the questions given below :

- (A) But Gandhiji stuck to his principles and did not copy, thus, having to face scolding and ridicule after the inspector left.
- (B) Gandhiji wrote four words correctly, but he could not spell the fifth word 'Kettle'.
- (C) The Inspector of Schools visited Gandhiji's school.
- (D) Having noticed that except Gandhiji all the other students had spelt all the five words, the teacher prompted Gandhiji to copy the word from his neighbour's slate.
- (E) He read out five English words to the class and asked all the boys to write them down.

Q.176. Which of the following should be the **LAST (FIFTH)** sentence after the rearrangement ?
(1) B (2) A (3) E (4) D (5) C

Q.177. Which of the following should be the **FIRST** sentence after the rearrangement ?
(1) D (2) B (3) C (4) E (5) A

Q.178. Which of the following should be the **THIRD** sentence after the rearrangement ?
(1) C (2) B (3) E (4) A (5) D

Q.179. Which of the following should be the **FOURTH** sentence after the rearrangement ?
(1) A (2) C (3) D (4) B (5) E

Q.180. Which of the following should be the **SECOND** sentence after the rearrangement ?
(1) E (2) B (3) D (4) C (5) A

Q.181-190. Read each sentence to find out whether there is any grammatical error in it. The error, if any, will be in one part of the sentence. The number of that part is the answer. If there is 'No error', the answer is (5). (Ignore the errors of punctuation, if any)

Q.181. People who play / their radios too / loud have no / considerations for others. No error
(1) (2) (3) (4) (5)

Q.182. The novel has neither / an interesting / plot, nor any / interesting character. No error
(1) (2) (3) (4) (5)

Q.183. If you were given a / chance to live in / some other country, which / No error
(1) (2) (3) (4) (5)
one would you have chosen ?

Q.184. Having lived to / Paris for two / years, Prakash understands / French reasonably well. No error
(1) (2) (3) (4) (5)

Q.185. Reema decided not to / watch the movie because / she had to study for the / No error
(1) (2) (3) (4) (5)
quiz to be hold the next day.

Q.186. Athletes do various / kinds of warm / up activities before / they start to running. No error
(1) (2) (3) (4) (5)

Q.187. Ramesh will lives / with Ram until he / finds a separate / house for himself. No error
(1) (2) (3) (4) (5)

- Q.188. Cows, goats and / other such domestic / animals together is / called livestock. No error
 (1) (2) (3) (4) (5)
- Q.189. Students are likely to / work on the evenings, / during the weekends, / or summer breaks. No error
 (1) (2) (3) (4) (5)
- Q.190. Being able to / remember a lot of informations is / not the same as / being able to think. No error
 (1) (2) (3) (4) (5)

Q.191-200. In the following passage there are blanks, each of which has been numbered. These numbers are printed below the passage and against each, five words are suggested, one of which fits the blank appropriately. Find out the appropriate word in each case.

I wanted to (191) myself a sweater. When I asked my mother for some wool, she directed me to the old cloth bag under the stairs. This was the bag (192) which my mother had over the years (193) all the remains from sweaters, scarves, cardigans and gloves that she had knitted for herself (194) the family. When I opened the bag – I screamed "What a mess!" All the wool had tangled itself into a huge knot. I said to my mother, "Its hopeless. All the wool is so badly mixed. (195) can I even detangle it, let alone knit a sweater from it." She smiled and said, "It's easier (196) you think. All you have to do is look for the easiest knot and undo that. (197) that is done, the next knot will be easier. Just keep on doing this, until all the wool is unravelled". I (198) as my mother had told me to, and sooner than I had thought, the wool started to loosen and different colours (199) to emerge. Very soon, instead of one huge untidy bunch of wool I had several neat balls in (200) of me.

- Q.191. (1) own (2) does (3) have (4) prepared (5) knit
- Q.192. (1) from (2) on (3) to (4) for (5) in
- Q.193. (1) put (2) keep (3) managed (4) instilled (5) hide
- Q.194. (1) and (2) with (3) apart (4) aside (5) beside
- Q.195. (1) How (2) What (3) Where (4) Why (5) Which
- Q.196. (1) that (2) than (3) more (4) those (5) also
- Q.197. (1) With (2) Along (3) Where (4) Then (5) Once
- Q.198. (1) try (2) follow (3) decided (4) did (5) listened
- Q.199. (1) began (2) see (3) could (4) came (5) starts
- Q.200. (1) search (2) reward (3) close (4) front (5) awe

प्रश्नावली V (ब)

हिन्दी भाषा

प्र.201-210. नीचे दिए गए परिच्छेद को ध्यानपूर्वक पढ़िए और उस पर आधारित प्रश्नों के उत्तर दीजिए। कुछ शब्दों को मोटे अक्षरों में मुद्रित किया गया है, जिससे आपको कुछ प्रश्नों के उत्तर देने में सहायता मिलेगी। दिए गए विकल्पों में से सबसे उपयुक्त का चयन कीजिए।

शहीद भगत सिंह एक असाधारण साहसी और महान देशभक्त थे। इनके पिता सरदार किशन सिंह तथा चाचा दोनों ही स्वतंत्रता सेनानी थे। इनके जन्म के समय दोनों जेल में थे। इनका जन्म 27 सितंबर 1907 ई. में लायलपुर जिले में हुआ था। इनके जन्म के दो माह बाद ही इनके पिता तथा चाचा की रिहाई हो गई। दादी ने प्रसन्न होकर इनका नाम 'भागावाला' अर्थात् भाग्यवाला रखा। यही बालक आगे चलकर भगत सिंह कहलाया। जिस समय इनका जन्म हुआ देश में विद्रोह की ज्वाला धधक रही थी। वे बचपन से ही असाधारण खेल खेला करते थे। एक बार एक खेत में पाट्टी में लकड़ियाँ गाड़ रहे थे। पूछने पर इन्होंने कहा बंदूक बो रहा हूँ। बचपन से ही इनका संपर्क लाला लाजपतराय, करतार सिंह सरामा से हो गया। करतार सिंह से यह बहुत प्रभावित थे। प्रथम लाहौर पंड्यंत्र केस (1915) में यह केवल 9 वर्ष के थे। 1919 में घटित जलियाँवाला बाग कांड ने पूरे देश को झकझोर दिया। भगत सिंह भी उस स्थान पर शहीदों को श्रद्धांजलि देने गए। वहीं पर मिट्टी उठाकर बलिदान की शपथ खाई। 1920 में गाँधी के असहयोग आंदोलन ने जोर पकड़ा। भगत सिंह भी डी. ए. वी. कॉलेज छोड़कर लाला लाजपतराय द्वारा स्थापित नेशनल कॉलेज में भर्ती हो गए। वहीं इनकी भेंट भगवती चरण, सुखदेव, यशपाल आदि क्रांतिकारियों से हुई। वहाँ इन्हें बड़े-बड़े नेताओं का भाषण सुनने को मिला। जयचंद्र विद्यालंकार से यह विशेष प्रभावित थे। विद्यालय में यह देशभक्ति के नाटक खेला करते थे जिसका उद्देश्य लोगों के दिल में राष्ट्रीय चेतना पैदा करना था। इनके पिता ने इनसे विवाह करने के लिए कहा तो इन्होंने साफ मना कर दिया और कहा - आप केवल माँ की चिंता करते हैं 33 करोड़ की माँ भारत कितने दुःख में है। इसका दुःख दूर करना मेरा पहला कर्तव्य है, उन्होंने आजीवन विवाह न करने का निश्चय कर लिया। बाद में भगत सिंह कानपुर आए और गणेशशंकर विद्यार्थी के संपर्क में रहकर राष्ट्र की सेवा करते रहे। 1928 में साइमन कमीशन का विरोध करते हुए लाला लाजपतराय अंग्रेजों की लाठी से घायल हो गए और उसमें इनकी मृत्यु हो गई। क्रांतिकारियों ने मिस्टर स्काट की हत्या की योजना बनाई। भगत सिंह का भी नाम उसमें था। एक अंग्रेज कार्यालय से बाहर निकला। क्रांतिकारियों ने उस पर गोली चलाई और वह मारा गया। सभी क्रांतिकारी माग निकलें। अंग्रेज सार्वजनिक सुरक्षा विधेयक संसद में पेश करना चाहते थे। यह विधेयक सरकार की दमनकारी नीति का पोषक था। 1929 अप्रैल में इसे लागू करना था। क्रांतिकारियों ने असेंबली पर बम फेंकने का निश्चय कर लिया। भगत सिंह सहित चार साथी असेंबली में प्रविष्ट हुए और उन्होंने वहाँ बम फेंक कर स्वयं गिरफ्तारी दे दी। इन पर मुकदमा चलाया गया। उन पर सांडर्स की हत्या का भी आरोप था। उन्हें मृत्यु दंड दिया गया। 23 मार्च 1931 को भगत सिंह, सुखदेव तथा राजगुरु को फाँसी दी गई। उनकी माता ने जेल में आकर पुत्र से कहा - 'बेटा हठ मत छोड़ना, एक दिन तो मरना ही है, पर ऐसा मरना जिससे पूरा विश्व याद करके रो उठे।' तख्ते पर खड़े होकर उन्होंने इंकलाब का नारा लगाया और फाँसी पर झूल गए।

- प्र.201. भगत सिंह किससे प्रभावित हुए थे ?
 (1) करतार सिंह से (2) जयचंद्र विद्यालंकार से (3) किशन सिंह से
 (4) (1) और (2) (5) इनमें से कोई नहीं
- प्र.202. इस परिच्छेद में प्रयुक्त शब्द 'समय' का असमानार्थी निम्नलिखित में से क्या है ?
 (1) वक्त (2) समां (3) वेला (4) घड़ी (5) इनमें से कोई नहीं
- प्र.203. भगत सिंह ने क्या शपथ ली थी ?
 (1) बलिदान की (2) पदलिखकर पुलिस बनने की (3) पिता की इच्छा के अनुसार ब्याह करने की
 (4) सरकारी नौकरी करने की (5) इनमें से कोई नहीं
- प्र.204. क्रांतिकारियों ने किसकी हत्या की योजना बनाई थी ?
 (1) साइमन की (2) सांडर्स की (3) गवर्नर की (4) जेलर की (5) इनमें से कोई नहीं
- प्र.205. सरकार की दमनकारी नीति का पोषक किसे कहा गया है ?
 (1) पुलिस के आतंक को (2) साइमन कमीशन को (3) सार्वजनिक सुरक्षा विधेयक को
 (4) जेलों में हो रहे अत्याचार को (5) इनमें से कोई नहीं
- प्र.206. भगत सिंह किसे अपना पहला कर्तव्य मानते थे ?
 (1) माता-पिता का कहना मानने को (2) भारत माता का दुःख दूर करने को (3) पढ़ाई को
 (4) निष्ठा से नौकरी करने को (5) इनमें से कोई नहीं

- प्र.207. इस परिच्छेद में प्रयुक्त 'भेंट' शब्द के स्थान पर निम्नलिखित में से किसका प्रयोग उसी अर्थ में किया जा सकता है ?
 (1) उपहार (2) मुलाकात (3) सौगात (4) तोहफा (5) इनमें से कोई नहीं
- प्र.208. इस परिच्छेद में प्रयुक्त शब्द 'विरोध' का समानार्थी निम्नलिखित में से कौनसा नहीं है ?
 (1) अनुरोध (2) प्रतिरोध (3) प्रतिवाद (4) खिलाफत (5) इनमें से कोई नहीं
- प्र.209. इस परिच्छेद में प्रयुक्त शब्द 'विद्रोह' का समानार्थी निम्नलिखित में से क्या है ?
 (1) विप्लव (2) बगावत (3) बलवां
 (4) (1), (2) और (3) तीनों (5) इनमें से कोई नहीं
- प्र.210. इस परिच्छेद में प्रयुक्त शब्द 'विवाह' का समानार्थी निम्नलिखित में से क्या है ?
 (1) ब्याह (2) शादी (3) (1) और (2) दोनों (4) स्नेहबद्ध (5) इनमें से कोई नहीं
- प्र.211-215. नीचे (A), (B), (C), (D) और (E) में पांच कथन दिए गए हैं। इन पांचों कथनों को इस तरह व्यवस्थित करिए कि पांचों कथनों का एक अर्थपूर्ण परिच्छेद बन जाए। फिर उसके बाद दिए गए प्रश्नों का उत्तर दीजिए।
 (A) उसके संभलते ही उसने सुना 'छक्का' और उसकी टीम ने उसे कंधों पर उठा लिया।
 (B) एक दुबले-पतले कृशकाय खिलाड़ी को गेंद का सामना करना था।
 (C) खेल का अंतिम ओवर बाकी था और अंतिम जोड़ी बल्लेबाजी कर रही थी।
 (D) एक-एक कर पांच गेंदें बिना रन के गईं, अंतिम गेंद बाकी थी और जीतने के लिए पांच रन जरूरी थे।
 (E) गेंदबाज ने बड़ी तेजी से गेंद डाली, खिलाड़ी ने गेंद को बल्ला लगाया और खुद गिर पड़ा।
- प्र.211. तीसरा वाक्य कौन सा होगा ?
 (1) A (2) B (3) C (4) D (5) E
- प्र.212. चौथा वाक्य कौन सा होगा ?
 (1) A (2) B (3) C (4) D (5) E
- प्र.213. पहला वाक्य कौन सा होगा ?
 (1) A (2) B (3) C (4) D (5) E
- प्र.214. दूसरा वाक्य कौन सा होगा ?
 (1) A (2) B (3) C (4) D (5) E
- प्र.215. अंतिम वाक्य कौन सा होगा ?
 (1) A (2) B (3) C (4) D (5) E
- प्र.216-220. नीचे प्रत्येक वाक्य में चार शब्द नोटे अक्षरों में छापे गए हैं जिन्हें (1), (2), (3) और (4) क्रमांक दिए गए हैं। इनमें से एक शब्द में या तो वर्तनी की अशुद्धि हो सकती है या वह शब्द वाक्य के संदर्भ में उपयुक्त नहीं हो सकता है। उस शब्द का क्रमांक ही आपका उत्तर है। यदि चारों शब्दों की वर्तनी सही हो और वे सभी उपयुक्त भी हों तो उत्तर दीजिए (5) अर्थात् 'सभी सही हैं'।
- प्र.216. हमारा इतिहास इस बात को प्रमाणित करता है कि अच्छे राजाओं के शासन काल में संस्कृति, कला और वाणी का पर्याप्त विकास हुआ है।
 (1) (2) (3)
 (4) सभी सही हैं
 (5)
- प्र.217. मंत्रीमंडल की बैठक में केरोसीन पर दी जा रही सब्सिडी की समाप्ति के बारे में विचार विमर्श की मद को अध्यक्ष ने स्थगित कर दिया।
 (1) (2) (3)
 (4) सभी सही हैं
 (5)
- प्र.218. कबीर सरल और सात्विक स्वभाव के व्यक्ति थे और वे अंधविश्वास और छूआछूत को नहीं मानते थे।
 (1) (2) (3) (4) सभी सही हैं
 (5)





- प्र.219. देश में प्रचुर मात्रा में फैले हुए भूस्टाचार को मिटाने के लिए प्रत्येक नागरिक को सरकार का साथ देना चाहिए । सभी सही हैं
(1) (2) (3) (4) (5)
- प्र.220. लोकोक्तियां किसी न किसी घटना से संबंधित होती हैं और उनका प्रयोग भी उसी प्रकार की घटनाओं या प्रसंगों में किया जाता है । सभी सही हैं
(1) (2) (3) (4) (5)
- प्र.221-230. नीचे दिया गया हरेक वाक्य चार भागों में बांटा गया है जिन्हें (1), (2), (3) और (4) क्रमांक दिए गए हैं । आपको यह देखना है कि वाक्य के किसी भाग में व्याकरण, भाषा, वर्तनी, शब्दों के गलत प्रयोग या इसी तरह की कोई त्रुटि तो नहीं है । त्रुटि अगर होगी तो वाक्य के किसी एक भाग में ही होगी । उस भाग का क्रमांक ही उत्तर है । अगर वाक्य त्रुटिरहित है तो उत्तर (5) अर्थात् 'त्रुटिरहित' दीजिए ।
- प्र.221. जीवन में सफल होना / चाहते हो तो यह समझ / लो कि इसके लिए / मेहनत का कोई वैकल्प नहीं है । त्रुटिरहित
(1) (2) (3) (4) (5)
- प्र.222. श्री रामलाल ने भोतीकी में साठ / और रसायन में नब्बे / प्रतिशत अंक पाए हैं और / वह कक्षा में प्रथम आया है । त्रुटिरहित
(1) (2) (3) (4) (5)
- प्र.223. योजना आयोग ने / पिछले माह गरीब रेखा / की नयी परिभाषा / जारी की है । त्रुटिरहित
(1) (2) (3) (4) (5)
- प्र.224. प्रत्येक कार्य उपयुक्त / समय पर ही फलदायी / होता है तथा समय व्यतित हो / जाने पर वह व्यर्थ हो जाता है । त्रुटिरहित
(1) (2) (3) (4) (5)
- प्र.225. एक अधीक्षण से यह पता / चला है कि भारत की / प्रति व्यक्ति आय में पिछले / दशक में पर्याप्त वृद्धि हुई है । त्रुटिरहित
(1) (2) (3) (4) (5)
- प्र.226. हिन्दी दिवस समारोह / में पुरस्कार वितरण / के बाद सभी को / जलपान दिया गया । त्रुटिरहित
(1) (2) (3) (4) (5)
- प्र.227. भारत के योजना / आयोग ने रेजगार बढ़ाने / के लिए भारत सरकार / को सुझाव दिए हैं । त्रुटिरहित
(1) (2) (3) (4) (5)
- प्र.228. भारत में कारों की / बिक्री का आंकड़ा जून में / 8.8 प्रतिशत बढ़ कर / डेढ़ लाख तक पहुंच गया है । त्रुटिरहित
(1) (2) (3) (4) (5)
- प्र.229. रुपए के गिरते हुए मूल्य / ने वाणिज्य मंत्रालय को परेशान / कर दिया क्योंकि देश के / नियातकों को घाटा हो रहा है । त्रुटिरहित
(1) (2) (3) (4) (5)
- प्र.230. इंजीनियरिंग क्षेत्र की प्रमुख / कंपनी लार्सन एण्ड टुब्रो ने मलेशिया / की बिजली अपकरण बनाने वाली / एक कंपनी का अधिग्रहण किया है । त्रुटिरहित
(1) (2) (3) (4) (5)

- प्र.231-235. नीचे दिये गये गत्येक प्रश्न में एक रिक्त स्थान छूटा हुआ है और उसके नीचे पांच शब्द सुझाए गए हैं। इनमें से कोई एक उस रिक्त स्थान पर रख देने से वह वाक्य अर्थपूर्ण बन जाता है। सही शब्द ज्ञात कर उसे उत्तर के रूप में अंकित कीजिए। दिए गए शब्दों में से सर्वाधिक उपयुक्त शब्द का चयन करना है।
- प्र.231. आपसे सादर ----- है कि आप हमारे समारोह में मुख्य अतिथि के रूप में पधारें।
(1) कामना (2) अनुरोध (3) अनुग्रह (4) विनय (5) अभिलाषा
- प्र.232. ताजमहल ----- का अद्भुत नमूना है।
(1) मूर्तिकला (2) शिल्पकला (3) चित्रकला (4) स्थापत्यकला (5) ललितकला
- प्र.233. यहां की जलवायु आपके ----- नहीं है।
(1) योग्य (2) अनुरूप (3) अनुकूल (4) अनुसार (5) प्रतिरूप
- प्र.234. समय का सदुपयोग न करने वाले व्यक्तियों को बाद में ----- करना पड़ता है।
(1) पश्चाताप (2) प्रायश्चित (3) परिष्कार (4) विलाप (5) परिताप
- प्र.235. इस नाटक का ----- अन्त तक बना रहा।
(1) आश्चर्य (2) कुतूहल (3) दर्द (4) विषय (5) रहस्य
- प्र.236-240. नीचे दिये गये शब्द समूह में एक समूह या वाक्यांश दिया गया है और फिर उसके बाद पाँच ऐसे शब्द सुझाए गए हैं जो कि इस पूरे वाक्यांश या शब्द समूह का अर्थ एक शब्द में स्पष्ट कर देते हैं। आपको वह शब्द ज्ञात कर उसको उत्तर के रूप में दर्शाना है।
- प्र.236. जो कठिनाई से समझ में आए
(1) दुर्गम (2) दुर्बोध (3) दुर्लभ (4) दुर्घर्ष (5) दुष्ट
- प्र.237. एक पर ही श्रद्धा अथवा आस्था रखने वाला
(1) एककी (2) अलौकिक (3) अधिकारिक (4) द्रढ़प्रतिज्ञ (5) एकनिष्ठ
- प्र.238. बड़ा बनने की इच्छा रखनेवाला
(1) पदलोलुप (2) चाटुकार (3) विवेकवान (4) महत्वाकांक्षी (5) घमंडी
- प्र.239. मन का दुर्भाव
(1) द्वेषवन्म्य (2) भेदभाव (3) मनोमालिन्य (4) कलुषित (5) मनोनुकूल
- प्र.240. पूर्णतः स्वच्छ करना
(1) परिष्कार (2) सुधार (3) अविष्कार (4) पुनरोद्धार (5) स्वेच्छाचार

Click Here To Buy Book <http://bankpoclerk.com/community/books>

KALINJAR PUBLICATIONS

Other Important Books of Your Interest



Also available at: www.flipkart.com

Helpline No. 011-45151781

Buy Online at: <http://www.upscportal.com/civilservices/books>

Click Here To Buy Book <http://bankpoclerk.com/community/books>